


MATHEMATICS

Part - II

STANDARD NINE



The Constitution of India

Chapter IV A

Fundamental Duties

ARTICLE 51A

Fundamental Duties- It shall be the duty of every citizen of India—

- (a) to abide by the Constitution and respect its ideals and institutions, the National Flag and the National Anthem;
- (b) to cherish and follow the noble ideals which inspired our national struggle for freedom;
- (c) to uphold and protect the sovereignty, unity and integrity of India;
- (d) to defend the country and render national service when called upon to do so;
- (e) to promote harmony and the spirit of common brotherhood amongst all the people of India transcending religious, linguistic and regional or sectional diversities, to renounce practices derogatory to the dignity of women;
- (f) to value and preserve the rich heritage of our composite culture;
- (g) to protect and improve the natural environment including forests, lakes, rivers and wild life and to have compassion for living creatures;
- (h) to develop the scientific temper, humanism and the spirit of inquiry and reform;
- (i) to safeguard public property and to abjure violence;
- (j) to strive towards excellence in all spheres of individual and collective activity so that the nation constantly rises to higher levels of endeavour and achievement;
- (k) who is a parent or guardian to provide opportunities for education to his child or, as the case may be, ward between the age of six and fourteen years.

The coordination committee formed by GR No. Abhyas - 2116/(Pra.Kra.43/16) SD - 4
Dated 25.4.2016 has given approval to prescribe this textbook in its meeting held on 3.3.2017

MATHEMATICS

Part-II

STANDARD NINE




**Maharashtra State Bureau of Textbook Production and
Curriculum Research, Pune.**



22UPCH

The digital textbook can be obtained through DIKSHA App on a smartphone by using the Q. R. Code given on title page of the textbook and useful audio-visual teaching-learning material of the relevant lesson will be available through the Q. R. Code given in each lesson of this textbook.

**First Edition : 2017
Reprint : 2022**



© **Maharashtra State Bureau of Textbook Production and Curriculum Research, Pune - 411 004.**

The Maharashtra State Bureau of Textbook Production and Curriculum Research reserves all rights relating to the book. No part of this book should be reproduced without the written permission of the Director, Maharashtra State Bureau of Textbook Production and Curriculum Research, Pune.

Mathematics Subject Committee

Dr Mangala Naralikar (Chairman)
Dr Jayashri Atre (Member)
Shri. Ramakant Sarode (Member)
Shri. Dadaso Sarade (Member)
Shri Sandeep Panchbhai (Member)
Smt. Lata Tilekar (Member)
Smt. Ujjwala Godbole (Member-Secretary)

Mathematics Study Group (State)

Smt. Pooja Jadhav	Shri. Rama Vanyalkar
Shri. Pramod Thombare	Shri. Ansar Shaikh
Shri. Rajendra Chaudhari	Smt. Suvarna Deshpande
Shri. Annappa Parit	Shri. Ganesh Kolte
Shri Shreepad Deshpande	Shri. Suresh Date
Shri. Bansi Havale	Shri. Prakash Zende
Shri. Umesh Rele	Shri. Shrikant Ratnaparakhi
Shri. Chandan Kulkarni	Shri. Suryakant Shahane
Smt. Anita Jave	Shri. Prakash Kapse
Smt. Bageshri Chavan	Shri. Saleem Hashmi
Shri. Kalyan Kadekar	Smt. Arya Bhide
Shri. Sandesh Sonawane	Shri. Milind Bhakare
Shri. Sujit Shinde	Shri. Dnyaneshwar Mashalkar
Dr Hanumant Jagtap	Shri. Lakshman Davankar
Shri. Pratap Kashid	Shri. Sudhir Patil
Shri. Kashiram Bavisane	Shri. Rajaram Bandgar
Shri. Pappu Gade	Shri. Pradeep Godase
Smt. Rohini Shirke	Shri. Ravindra Khandare
	Shri. Sagar Sakude

Smt. Prajakti Gokhale (Invitee)
Shri. V. D. Godbole (Invitee)
Smt. Taruben Popat (Invitee)

Cover and Illustrations :

Dhanashri Mokashi

Computer Drawings :

Sandeep Koli, Mumbai

Co-ordination : Ujjwala Godbole

I/C Special Officer for Mathematics

Translation : Dr Jayashri Atre

Shri. V. D. Godbole

Smt. Mrinalini Desai

Scrutiny : Smt. Prajakti Gokhale

Smt. Taruben Popat

Co-ordination :

Dhanavanti Hardikar

Academic Secretary for Languages

Santosh Pawar

Assistant Special officer, English

Production :

Sachin Mehta

Chief Production Officer

Sanjay Kamble, Production Officer

Prashant Harne, Asst. Production Officer


Typesetting : D.T.P Section

Textbook Bureau, Pune.

Paper : 70 GSM Cream wove

Printer : Harshwardhan Offset, Kolhapur

Print Order No. : N/PB/2022-23/55,000



Publisher

Vivek Uttam Gosavi, Controller
Maharashtra State Textbook Bureau,
Prabhadevi, Mumbai - 400 025.



The Constitution of India

Preamble

WE, THE PEOPLE OF INDIA, having solemnly resolved to constitute India into a SOVEREIGN SOCIALIST SECULAR DEMOCRATIC REPUBLIC and to secure to all its citizens :

JUSTICE, social, economic and political ;

LIBERTY of thought, expression, belief, faith and worship ;

EQUALITY of status and of opportunity ; and to promote among them all

FRATERNITY assuring the dignity of the individual and the unity and integrity of the Nation ;

IN OUR CONSTITUENT ASSEMBLY this twenty-sixth day of November, 1949, do HEREBY ADOPT, ENACT AND GIVE TO OURSELVES THIS CONSTITUTION.

NATIONAL ANTHEM

Jana-gana-mana-adhināyaka jaya hē
Bhārata-bhāgya-vidhātā,

Panjāba-Sindhu-Gujarāta-Marāthā
Drāvida-Utkala-Banga

Vindhya-Himāchala-Yamunā-Gangā
uchchala-jaladhi-taranga

Tava subha nāmē jāgē, tava subha āsisa māgē,
gāhē tava jaya-gāthā,

Jana-gana-mangala-dāyaka jaya hē
Bhārata-bhāgya-vidhātā,

Jaya hē, Jaya hē, Jaya hē,
Jaya jaya jaya, jaya hē.

PLEDGE

India is my country. All Indians
are my brothers and sisters.

I love my country, and I am proud
of its rich and varied heritage. I shall
always strive to be worthy of it.

I shall give my parents, teachers
and all elders respect, and treat
everyone with courtesy.

To my country and my people,
I pledge my devotion. In their
well-being and prosperity alone lies
my happiness.

Preface

Dear Students,

Welcome to the ninth standard!

You are now going to begin your studies at the secondary level after completing your primary education curriculum. You had only one Mathematics textbook up to the eighth standard, now you will use two textbooks – Mathematics Part-I and Mathematics Part-II.

Up to the eighth standard you have verified the properties of lines, triangles, quadrilaterals, circles, etc. given in the textbook. Now you are going to give logical proofs of these and some more properties. The skill of logical reasoning is of utmost importance in all fields of life. This textbook gives you an opportunity to learn the skill gradually.

Different activities are given in the textbook to help you understand different concepts. Other activities have been provided for revision and additional practice. You are expected to do all these and learn the proofs of properties. Discuss the reason behind every step of a proof and learn the property.

In this textbook, Mathematics-Part II, two new topics namely Trigonometry and Co-ordinate Geometry are introduced. These topics will provide a foundation for higher studies. The study of Surface Area and Volume will be useful in day to day life.

Use of internet will also help you to understand the subject. You will get through the course joyfully if you follow the three point plan of – a deep study of the textbook, activity-based learning and ample practice.

So come on! Let us study Mathematics in the company of our teachers, parents, friends and the internet. Best wishes to you for your studies!



(Dr Sunil Magar)

Director

Pune

Date : 28 April, 2017

Akshaya Tritiya

Indian Solar Year :

8 Vaishakh 1939

Maharashtra State Bureau of Textbook
Production and Curriculum Research, Pune.

It is expected that students will develop the following competencies after studying Mathematics Part II syllabus in Standard IX.

Area	Topic	Competency statement
1. Geometry	1.1 Euclidean Geometry 1.2 Parallel lines and pairs of angles 1.3 Theorems on angles and sides of a triangle. 1.4 Similar triangles 1.5 Circle 1.6 Geometric constructions 1.7 Quadrilateral	The students will be able to – <ul style="list-style-type: none"> ● write ‘what is given’ and ‘what is to be proved’ from the given statement. ● write the proof of the given statements by using logical conclusions. ● identify the pairs of angles made by a transversals of parallel lines. ● understand the properties of pairs of angles and make use of them. ● write ‘Given’ ‘To prove’ and ‘proof’ of the statements. ● identify similar triangles and write the ratios of corresponding sides. ● prove the properties of chord of circle using tests of congruence of triangles. ● draw incircle and circumcircle. ● construct triangles if different type of information is given. ● write proofs of the properties of different types of quadrilaterals. ● use ICT tools to verify the properties of triangle, quadrilateral and circle.
2. Co-ordinate Geometry	2.1 Basics of co-ordinate Geometry	<ul style="list-style-type: none"> ● explain the meaning of co-ordinates of a point in a plane. ● describe a point by its co-ordinates. ● use ICT tools to find the co-ordinates of a point.
3. Mensuration	3.1 Surface Area and Volume	<ul style="list-style-type: none"> ● find the surface area and volume of a sphere and a cone.
4. Trigonometry	4.1 Introduction to trigonometry	<ul style="list-style-type: none"> ● tell the different trigonometric ratios using similar triangles and Pythagoras theorem and make use of it.

Instructions for teachers

It is expected that the teachers should go through the textbook of Mathematics Part-II for std IX thoroughly. The book contains many activities and practicals. Try to understand the purpose behind them.

The activities are of two types, (1) to write the proofs and (2) practical verification of properties and theorems. A teacher should make use of discussion, question-answers, group activities etc. to carry out the activities and make the textbook more useful. A teacher is also expected to encourage the students to do the activities in the book and help them to invent new ones.

It is more important to write the proofs pursuing logical thinking than doing them by heart. The textbook contains a variety of examples to enhance students' logical thinking. Teachers should construct more such examples with the help of students. Examples, which require a little higher thinking ability, are star-marked. Teachers should encourage the students who write proofs logically correct but thinking in a different way.

In the process of evaluation, it is advised to make use of open ended questions and of activity-sheets. Teachers should endeavour to develop such methods of evaluation.

The list of practicals given in the textbook should be considered as specimen. Teachers can frame different practicals as well as teaching aids of their own using available material. Different activities given in the textbook are included in the practicals. We hope that the evaluation method based on all these will be helpful to develop different competencies for further studies.

List of some practicals (specimen)

- (1) To find the distance between two points on a number line.
- (2) To verify the properties of angles made by a transversal of parallel lines.
- (3) To verify the properties of sides and angles of a triangle using Geometric instruments.
- (4) To verify the property of median on hypotenuse of a right angled triangle.
- (5) To do the construction of a triangle with given specific conditions.
- (6) An activity is given in the book to derive the formula of the surface area of a cone. Using the same activity, derive the formula for the area of a circle which is πr^2 .
- (7) To draw proportionate map of a room on a graph paper by considering the measurements of the things inside the room.
- (8) By drawing X and Y-axes on the school ground, ask students to tell the co-ordinates of a students' positions on the ground.
- (9) To find the volume of a cylindrical vessel using formula. Then fill the vessel completely with water and find the volume of the water. Compare both the measurements.

Similar activities can be done for different three dimensional objects.


Index

Chapters	Pages
1. Basic Concepts in Geometry	1 to 12
2. Parallel Lines	13 to 23
3. Triangles	24 to 50
4. Constructions of Triangles	51 to 56
5. Quadrilaterals	57 to 75
6. Circle	76 to 87
7. Co-ordinate Geometry	88 to 99
8. Trigonometry	100 to 113
9. Surface Area and Volume	114 to 123
• Answers	124 to 128



Let's study.

- **Point, line and plane**
- **Betweenness**
- **Co-ordinates of a points and distance**
- **Conditional statements**
- **Proof**



Did you recognise the adjacent picture ? It is a picture of pyramids in Egypt, built 3000 years before Christian Era. How the people were able to build such huge structures in so old time ? It is not possible to build such huge structures without developed knowledge of Geometry and Engineering.

The word Geometry itself suggests the origin of the subject. It is generated from the Greek words Geo (Earth) and Metria (measuring). So

it can be guessed that the subject must have evolved from the need of measuring the Earth, that is land .

Geometry was developed in many nations in different periods and for different constructions. The first Greek mathematician, Thales, had gone to Egypt. It is said that he determined height of a pyramid by measuring its shadow and using properties of similar triangles.

Ancient Indians also had deep knowledge of Geometry. In vedic period, people used geometrical properties to build altars. The book shulba-sutra describes how to build different shapes by taking measurements with the help of a string. In course of time, the mathematicians Aaryabhat, Varahamihir, Bramhagupta, Bhaskaracharya and many others have given valuable contribution to the subject of Geometry.



Let's learn.

Basic concepts in geometry (Point, Line and Plane)

We do not define numbers. Similarly we do not define a point, line and plane also. These are some basic concepts in Geometry. Lines and planes are sets of points. Keep in mind that the word 'line' is used in the sense 'straight line'.



Let's learn.

Betweenness

If P, Q, R are three distinct collinear points, there are three possibilities.

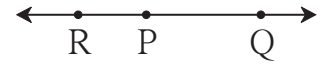


Fig. 1.2

(i) Point Q is between P and R

(ii) Point R is between P and Q

(iii) Point P is between R and Q

If $d(P, Q) + d(Q, R) = d(P, R)$ then it is said that point Q is between P and R. The betweenness is shown as P - Q - R.

Solved examples

Ex (1) On a number line, points A, B and C are such that

$$d(A, B) = 5, d(B, C) = 11 \text{ and } d(A, C) = 6.$$

Which of the points is between the other two ?

Solution : Which of the points A, B and C is between the other two, can be decided as follows.

$$d(B, C) = 11 \dots\dots (I)$$

$$d(A, B) + d(A, C) = 5 + 6 = 11 \dots\dots (II)$$

$$\therefore d(B, C) = d(A, B) + d(A, C) \dots\dots [\text{from (I) and (II)}]$$

Point A is between point B and point C.

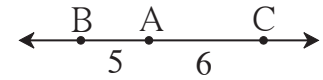


Fig. 1.3

Ex (2) U, V and A are three cities on a straight road. The distance between U and A is 215 km, between V and A is 140 km and between U and V is 75 km. Which of them is between the other two ?

$$\text{Solution : } d(U, A) = 215; \quad d(V, A) = 140; \quad d(U, V) = 75$$

$$d(U, V) + d(V, A) = 75 + 140 = 215; \quad d(U, A) = 215$$

$$\therefore d(U, A) = d(U, V) + d(V, A)$$

\therefore The city V is between the cities U and A.

Practice set 1.1

1. Find the distances with the help of the number line given below.

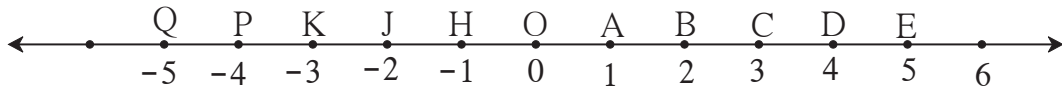


Fig. 1.5

- | | | | |
|---------------|----------------|-----------------|------------------|
| (i) $d(B, E)$ | (ii) $d(J, A)$ | (iii) $d(P, C)$ | (iv) $d(J, H)$ |
| (v) $d(K, O)$ | (vi) $d(O, E)$ | (vii) $d(P, J)$ | (viii) $d(Q, B)$ |
2. If the co-ordinate of A is x and that of B is y , find $d(A, B)$.
- | | | |
|-----------------------|----------------------|-----------------------|
| (i) $x = 1, y = 7$ | (ii) $x = 6, y = -2$ | (iii) $x = -3, y = 7$ |
| (iv) $x = -4, y = -5$ | (v) $x = -3, y = -6$ | (vi) $x = 4, y = -8$ |
3. From the information given below, find which of the point is between the other two. If the points are not collinear, state so.
- | | | |
|-----------------------|-----------------|---------------|
| (i) $d(P, R) = 7,$ | $d(P, Q) = 10,$ | $d(Q, R) = 3$ |
| (ii) $d(R, S) = 8,$ | $d(S, T) = 6,$ | $d(R, T) = 4$ |
| (iii) $d(A, B) = 16,$ | $d(C, A) = 9,$ | $d(B, C) = 7$ |
| (iv) $d(L, M) = 11,$ | $d(M, N) = 12,$ | $d(N, L) = 8$ |
| (v) $d(X, Y) = 15,$ | $d(Y, Z) = 7,$ | $d(X, Z) = 8$ |
| (vi) $d(D, E) = 5,$ | $d(E, F) = 8,$ | $d(D, F) = 6$ |
4. On a number line, points A, B and C are such that $d(A, C) = 10, d(C, B) = 8$. Find $d(A, B)$ considering all possibilities.
5. Points X, Y, Z are collinear such that $d(X, Y) = 17, d(Y, Z) = 8$, find $d(X, Z)$.
6. Sketch proper figure and write the answers of the following questions.
- | | | |
|---|---------------------|------------------|
| (i) If A - B - C and $l(AC) = 11,$ | $l(BC) = 6.5,$ | then $l(AB) = ?$ |
| (ii) If R - S - T and $l(ST) = 3.7,$ | $l(RS) = 2.5,$ | then $l(RT) = ?$ |
| (iii) If X - Y - Z and $l(XZ) = 3\sqrt{7},$ | $l(XY) = \sqrt{7},$ | then $l(YZ) = ?$ |
7. Which figure is formed by three non-collinear points ?



Let's learn.

In the book, Mathematics - Part I for std IX, we have learnt union and intersection of sets in the topic on sets. Now, let us describe a segment, a ray and a line as sets of points.

(1) Line segment :

The union set of point A, point B and points between A and B is called segment AB. Segment AB is written as seg AB in brief. Seg AB means seg BA.

Point A and point B are called the end points of seg AB.

The distance between the end points of a segment is called the length of the segment. That is $l(AB) = d(A,B)$
 $l(AB) = 5$ is also written as $AB = 5$.




Fig. 1.6

(2) Ray AB :

Suppose, A and B are two distinct points. The union set of all points on seg AB and the points P such that A - B - P, is called ray AB.

Here point A is called the starting point of ray AB.

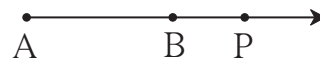


Fig. 1.7

(3) Line AB :

The union set of points on ray AB and opposite ray of ray AB is called line AB.

The set of points of seg AB is a subset of points of line AB.

(4) Congruent segments :

If the length of two segments is equal then the two segments are congruent.

If $l(AB) = l(CD)$ then $\text{seg } AB \cong \text{seg } CD$

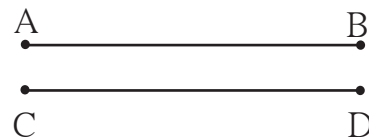


Fig. 1.8

(5) Properties of congruent segments :

(i) Reflexivity : $\text{seg } AB \cong \text{seg } AB$

(ii) Symmetry : If $\text{seg } AB \cong \text{seg } CD$ then $\text{seg } CD \cong \text{seg } AB$

(iii) Transitivity : If $\text{seg } AB \cong \text{seg } CD$ and $\text{seg } CD \cong \text{seg } EF$ then $\text{seg } AB \cong \text{seg } EF$

(6) Midpoint of a segment :

If A-M-B and $\text{seg } AM \cong \text{seg } MB$, then M is called the midpoint of seg AB.

Every segment has one and only one midpoint.



Fig. 1.9

(7) Comparison of segments :

If length of segment AB is less than the length of segment CD, it is written as $\text{seg AB} < \text{seg CD}$ or $\text{seg CD} > \text{seg AB}$.

The comparison of segments depends upon their lengths.

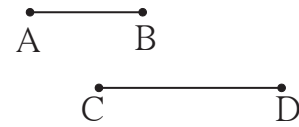


Fig. 1.10

(8) Perpendicularity of segments or rays :

If the lines containing two segments, two rays or a ray and a segment are perpendicular to each other then the two segments, two rays or the segment and the ray are said to be perpendicular to each other.

In the figure 1.11, $\text{seg AB} \perp \text{line CD}$,
 $\text{seg AB} \perp \text{ray CD}$.

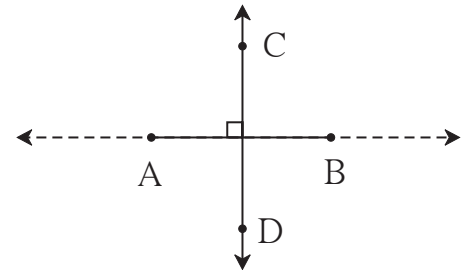


Fig. 1.11

(9) Distance of a point from a line :

If $\text{seg CD} \perp \text{line AB}$ and the point D lies on line AB then the length of seg CD is called the distance of point C from line AB.

The point D is called the foot of the perpendicular.

If $l(\text{CD}) = a$, then the point C is at a distance of 'a' from the line AB.

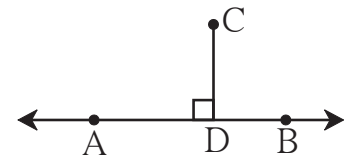


Fig. 1.12

Practice set 1.2

1. The following table shows points on a number line and their co-ordinates. Decide whether the pair of segments given below the table are congruent or not.

Point	A	B	C	D	E
Co-ordinate	-3	5	2	-7	9

(i) seg DE and seg AB (ii) seg BC and seg AD (iii) seg BE and seg AD

2. Point M is the midpoint of seg AB. If $AB = 8$ then find the length of AM.

3. Point P is the midpoint of seg CD. If $CP = 2.5$, find $l(\text{CD})$.

4. If $AB = 5$ cm, $BP = 2$ cm and $AP = 3.4$ cm, compare the segments.

5. Write the answers to the following questions with reference to figure 1.13.

- (i) Write the name of the opposite ray of ray RP
- (ii) Write the intersection set of ray PQ and ray RP.
- (iii) Write the union set of seg PQ and seg QR.
- (iv) State the rays of which seg QR is a subset.
- (v) Write the pair of opposite rays with common end point R.
- (vi) Write any two rays with common end point S.
- (vii) Write the intersection set of ray SP and ray ST.



Fig. 1.13

6. Answer the questions with the help of figure 1.14.

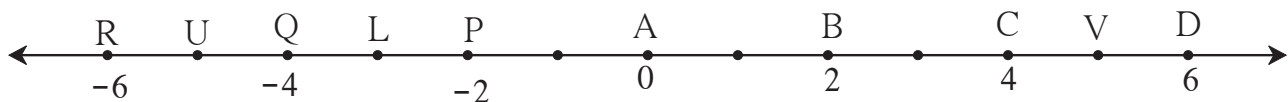


Fig. 1.14

- (i) State the points which are equidistant from point B.
- (ii) Write a pair of points equidistant from point Q.
- (iii) Find $d(U,V)$, $d(P,C)$, $d(V,B)$, $d(U, L)$.



Let's learn.

Conditional statements and converse

The statements which can be written in the 'If-then' form are called conditional statements. The part of the statement following 'If' is called the antecedent, and the part following 'then' is called the consequent.

For example, consider the statement : The diagonals of a rhombus are perpendicular bisectors of each other.

The statement can be written in the conditional form as, 'If the given quadrilateral is a rhombus then its diagonals are perpendicular bisectors of each other.'

If the antecedent and consequent in a given conditional statement are interchanged, the resulting statement is called the **converse** of the given statement.

If a conditional statement is true, its converse is not necessarily true. Study the following examples.

Conditional statement : If a quadrilateral is a rhombus then its diagonals are perpendicular bisectors of each other.

Practice set 1.3

- Write the following statements in 'if-then' form.
 - The opposite angles of a parallelogram are congruent.
 - The diagonals of a rectangle are congruent.
 - In an isosceles triangle, the segment joining the vertex and the mid point of the base is perpendicular to the base.
- Write converses of the following statements.
 - The alternate angles formed by two parallel lines and their transversal are congruent.
 - If a pair of the interior angles made by a transversal of two lines are supplementary then the lines are parallel.
 - The diagonals of a rectangle are congruent.

Problem set 1

- Select the correct alternative from the answers of the questions given below.
 - How many mid points does a segment have ?
(A) only one (B) two (C) three (D) many
 - How many points are there in the intersection of two distinct lines ?
(A) infinite (B) two (C) one (D) not a single
 - How many lines are determined by three distinct points ?
(A) two (B) three (C) one or three (D) six
 - Find $d(A, B)$, if co-ordinates of A and B are -2 and 5 respectively.
(A) -2 (B) 5 (C) 7 (D) 3
 - If $P - Q - R$ and $d(P, Q) = 2$, $d(P, R) = 10$, then find $d(Q, R)$.
(A) 12 (B) 8 (C) $\sqrt{96}$ (D) 20
- On a number line, co-ordinates of P, Q, R are 3 , -5 and 6 respectively. State with reason whether the following statements are true or false.
 - $d(P, Q) + d(Q, R) = d(P, R)$
 - $d(P, R) + d(R, Q) = d(P, Q)$
 - $d(R, P) + d(P, Q) = d(R, Q)$
 - $d(P, Q) - d(P, R) = d(Q, R)$
- Co-ordinates of some pairs of points are given below. Hence find the distance between each pair.
 - $3, 6$
 - $-9, -1$
 - $-4, 5$
 - $0, -2$
 - $x + 3, x - 3$
 - $-25, -47$
 - $80, -85$

4. Co-ordinate of point P on a number line is -7 . Find the co-ordinates of points on the number line which are at a distance of 8 units from point P.
5. Answer the following questions.
 - (i) If $A - B - C$ and $d(A,C) = 17$, $d(B,C) = 6.5$ then $d(A,B) = ?$
 - (ii) If $P - Q - R$ and $d(P,Q) = 3.4$, $d(Q,R) = 5.7$ then $d(P,R) = ?$
6. Co-ordinate of point A on a number line is 1. What are the co-ordinates of points on the number line which are at a distance of 7 units from A ?
7. Write the following statements in conditional form.
 - (i) Every rhombus is a square.
 - (ii) Angles in a linear pair are supplementary.
 - (iii) A triangle is a figure formed by three segments.
 - (iv) A number having only two divisors is called a prime number.
8. Write the converse of each of the following statements.
 - (i) If the sum of measures of angles in a figure is 180° , then the figure is a triangle.
 - (ii) If the sum of measures of two angles is 90° then they are complement of each other.
 - (iii) If the corresponding angles formed by a transversal of two lines are congruent then the two lines are parallel.
 - (iv) If the sum of the digits of a number is divisible by 3 then the number is divisible by 3.
9. Write the antecedent (given part) and the consequent (part to be proved) in the following statements.
 - (i) If all sides of a triangle are congruent then its all angles are congruent.
 - (ii) The diagonals of a parallelogram bisect each other.
- 10*. Draw a labelled figure showing information in each of the following statements and write the antecedent and the consequent.
 - (i) Two equilateral triangles are similar.
 - (ii) If angles in a linear pair are congruent then each of them is a right angle.
 - (iii) If the altitudes drawn on two sides of a triangle are congruent then those two sides are congruent.





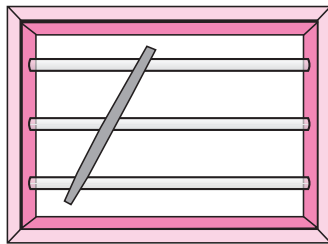
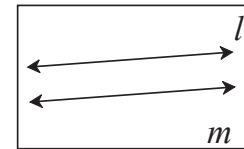
Let's study.

- Properties of angles formed by parallel lines and its transversal
- Tests of parallelness of two lines
- Use of properties of parallel lines



Let's recall.

Parallel lines : The lines which are coplanar and do not intersect each other are called parallel lines.



Hold a stick across the horizontal parallel bars of a window as shown in the figure.

How many angles are formed ?

- Do you recall the pairs of angles formed by two lines and their transversal ?

In figure 2.1, line n is a transversal of line l and line m .

Here, in all 8 angles are formed. Pairs of angles formed out of these angles are as follows :

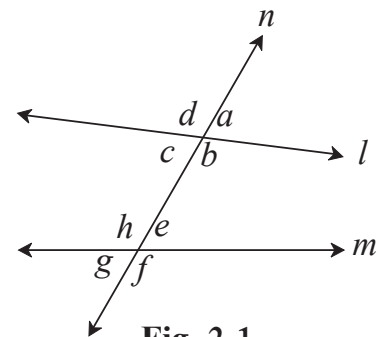


Fig. 2.1

Pairs of corresponding angles

- (i) $\angle d, \angle h$
 (ii) $\angle a, \square$
 (iii) $\angle c, \square$
 (iv) $\angle b, \square$

Pairs of alternate interior angles

- (i) $\angle c, \angle e$ (ii) $\angle b, \angle h$

Pairs of alternate exterior angles

- (i) $\angle d, \angle f$
 (ii) $\angle a, \angle g$

Pairs of interior angles on the same side of the transversal

- (i) $\angle c, \angle h$
 (ii) $\angle b, \angle e$

Some important properties :

- (1) When two lines intersect, the pairs of opposite angles formed are congruent.
- (2) The angles in a linear pair are supplementary.

- (3) When one pair of corresponding angles is congruent, then all the remaining pairs of corresponding angles are congruent.
- (4) When one pair of alternate angles is congruent, then all the remaining pairs of alternate angles are congruent.
- (5) When one pair of interior angles on one side of the transversal is supplementary, then the other pair of interior angles is also supplementary.




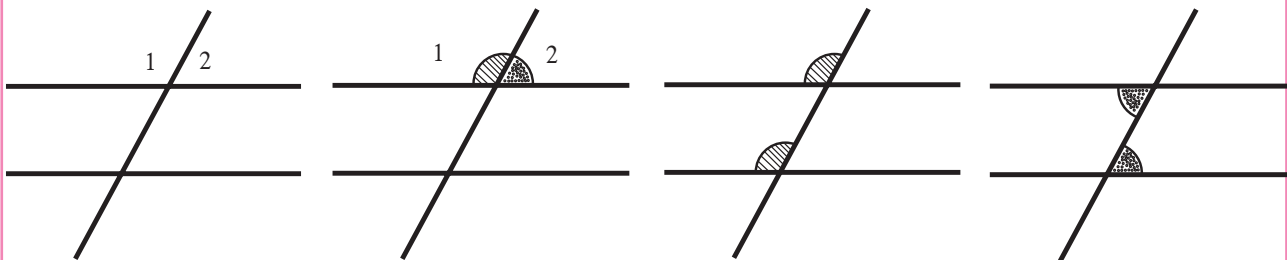
Let's learn.

Properties of parallel lines

Activity

To verify the properties of angles formed by a transversal of two parallel lines.

Take a piece of thick coloured paper. Draw a pair of parallel lines and a transversal on it. Paste straight sticks on the lines. Eight angles will be formed. Cut pieces of coloured paper, as shown in the figure, which will just fit at the corners of $\angle 1$ and $\angle 2$. Place the pieces near different pairs of corresponding angles, alternate angles and interior angles and verify their properties.





Let's learn.

We have verified the properties of angles formed by a transversal of two parallel lines. Let us now prove the properties using Euclid's famous fifth postulate given below.

If sum of two interior angles formed on one side of a transversal of two lines is less than two right angles then the lines produced in that direction intersect each other.

Interior angle theorem

Theorem : If two parallel lines are intersected by a transversal, the interior angles on either side of the transversal are supplementary.

Given : line $l \parallel$ line m and line n is their transversal. Hence as shown in the figure $\angle a$, $\angle b$ are interior angles formed on one side and $\angle c$, $\angle d$ are interior angles formed on other side of the transversal.

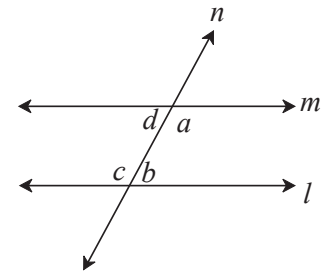


Fig. 2.2

To prove : $\angle a + \angle b = 180^\circ$
 $\angle d + \angle c = 180^\circ$

Proof : Three possibilities arise regarding the sum of measures of $\angle a$ and $\angle b$.

(i) $\angle a + \angle b < 180^\circ$ (ii) $\angle a + \angle b > 180^\circ$ (iii) $\angle a + \angle b = 180^\circ$

Let us assume that the possibility (i) $\angle a + \angle b < 180^\circ$ is true.

Then according to Euclid's postulate, if the line l and line m are produced will intersect each other on the side of the transversal where $\angle a$ and $\angle b$ are formed.

But line l and line m are parallel lines.given

$\therefore \angle a + \angle b < 180^\circ$ impossible(I)

Now let us suppose that $\angle a + \angle b > 180^\circ$ is true.

$\therefore \angle a + \angle b > 180^\circ$

But $\angle a + \angle d = 180^\circ$

and $\angle c + \angle b = 180^\circ$ angles in linear pairs

$\therefore \angle a + \angle d + \angle b + \angle c = 180^\circ + 180^\circ = 360^\circ$

$\therefore \angle c + \angle d = 360^\circ - (\angle a + \angle b)$

If $\angle a + \angle b > 180^\circ$ then $[360^\circ - (\angle a + \angle b)] < 180^\circ$

$\therefore \angle c + \angle d < 180^\circ$

5. In figure 2.9, line $AB \parallel$ line CD and line PQ is transversal. Measure of one of the angles is given.

Hence find the measures of the following angles.

- (i) $\angle ART$ (ii) $\angle CTQ$
 (iii) $\angle DTQ$ (iv) $\angle PRB$

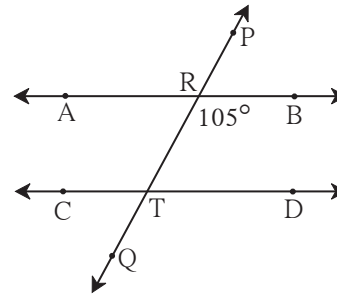


Fig. 2.9



Let's learn.

Use of properties of parallel lines

Let us prove a property of a triangle using the properties of angles made by a transversal of parallel lines.

Theorem : The sum of measures of all angles of a triangle is 180° .

Given : $\triangle ABC$ is any triangle.

To prove : $\angle ABC + \angle ACB + \angle BAC = 180^\circ$.

Construction : Draw a line parallel to seg BC and passing through A . On the line take points P and Q such that, $P - A - Q$.

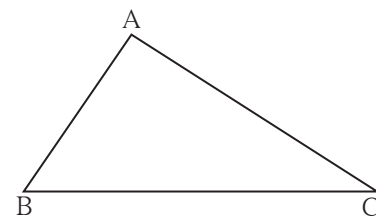


Fig. 2.10

Proof : Line $PQ \parallel$ line BC and seg AB is a transversal.

$$\therefore \angle ABC = \angle PAB \dots \text{alternate angles} \dots \text{(I)}$$

line $PQ \parallel$ line BC and seg AC is a transversal.

$$\therefore \angle ACB = \angle QAC \dots \text{alternate angles} \dots \text{(II)}$$

\therefore From I and II ,

$$\angle ABC + \angle ACB = \angle PAB + \angle QAC \dots \text{(III)}$$

Adding $\angle BAC$ to both sides of (III).

$$\begin{aligned} \angle ABC + \angle ACB + \angle BAC &= \angle PAB + \angle QAC + \angle BAC \\ &= \angle PAB + \angle BAC + \angle QAC \\ &= \angle PAC + \angle QAC \dots (\because \angle PAB + \angle BAC = \angle PAC) \\ &= 180^\circ \dots \text{Angles in linear pair} \end{aligned}$$

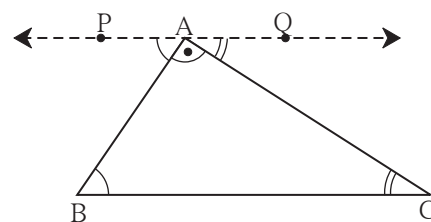


Fig. 2.11

That is, sum of measures of all three angles of a triangle is 180° .



In fig. 2.12, How will you decide whether line l and line m are parallel or not ?

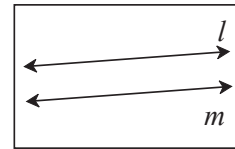


Fig. 2.12



Tests for parallel lines

Whether given two lines are parallel or not can be decided by examining the angles formed by a transversal of the lines.

- (1) If the interior angles on the same side of a transversal are supplementary then the lines are parallel.
- (2) If one of the pairs of alternate angles is congruent then the lines are parallel.
- (3) If one of the pairs of corresponding angles is congruent then the lines are parallel.

Interior angles test

Theorem : If the interior angles formed by a transversal of two distinct lines are supplementary, then the two lines are parallel.

Given : Line XY is a transversal of line AB and line CD.
 $\angle BPQ + \angle P Q D = 180^\circ$

To prove : line AB \parallel line CD

Proof : We are going to give an indirect proof.
 Let us suppose that the statement to be proved is wrong. That is, we assume, line AB and line CD are not parallel, means line AB and CD intersect at point T.
 So ΔPQT is formed.

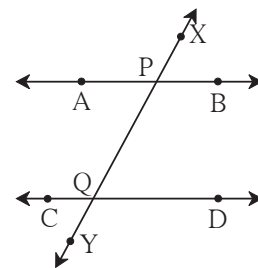


Fig. 2.13

$\therefore \angle TPQ + \angle PQT + \angle PTQ = 180^\circ$ sum of angles of a triangle
 but $\angle TPQ + \angle PQT = 180^\circ$ given
 That is the sum of two angles of the triangle is 180° .
 But sum of three angles of a triangle is 180° .
 $\therefore \angle PTQ = 0^\circ$.

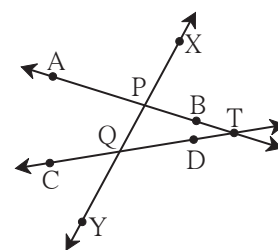


Fig. 2.14

∴ line PT and line QT means line AB and line CD are not distinct lines.

But, we are given that line AB and line CD are distinct lines.

∴ we arrive at a contradiction.

∴ our assumption is wrong. Hence line AB and line CD are parallel.

Thus it is proved that if the interior angles formed by a transversal are supplementary, then the lines are parallel.

This property is called **interior angles test** of parallel lines.

Alternate angles test

Theorem : If a pair of alternate angles formed by a transversal of two lines is congruent then the two lines are parallel.

Given : Line n is a transversal of line l and line m .

$\angle a$ and $\angle b$ is a congruent pair of alternate angles.

That is, $\angle a = \angle b$

To prove : line $l \parallel$ line m

Proof : $\angle a + \angle c = 180^\circ$ angles in linear pair

$\angle a = \angle b$ given

∴ $\angle b + \angle c = 180^\circ$

But $\angle b$ and $\angle c$ are interior angles on the same side of the transversal.

∴ line $l \parallel$ line m interior angles test

This property is called the **alternate angles test** of parallel lines.

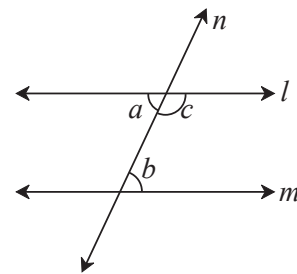


Fig. 2.15

Corresponding angles Test

Theorem : If a pair of corresponding angles formed by a transversal of two lines is congruent then the two lines are parallel.

Given : Line n is a transversal of line l and line m .

$\angle a$ and $\angle b$ is a congruent pair of corresponding angles.

That is, $\angle a = \angle b$

To prove : line $l \parallel$ line m

Proof : $\angle a + \angle c = 180^\circ$ angles in linear pair

$\angle a = \angle b$ given

∴ $\angle b + \angle c = 180^\circ$

That is a pair of interior angles on the same side of the transversal is congruent.

∴ line $l \parallel$ line m interior angles test

This property is called the **corresponding angles test** of parallel lines.

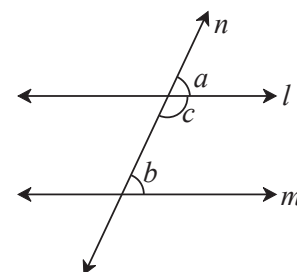


Fig. 2.16

5.

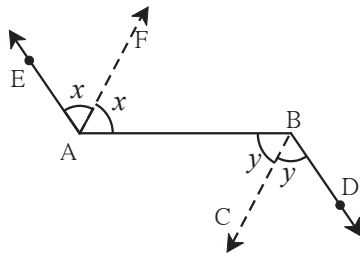


Fig. 2.22

In figure 2.22, ray $AE \parallel$ ray BD , ray AF is the bisector of $\angle EAB$ and ray BC is the bisector of $\angle ABD$. Prove that line $AF \parallel$ line BC .

6. A transversal EF of line AB and line CD intersects the lines at point P and Q respectively. Ray PR and ray QS are parallel and bisectors of $\angle BPQ$ and $\angle PQC$ respectively.

Prove that line $AB \parallel$ line CD .

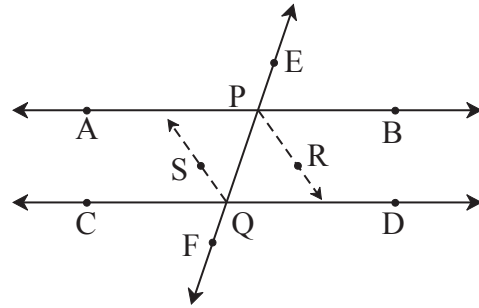


Fig. 2.23

Problem set 2

1. Select the correct alternative and fill in the blanks in the following statements.
 - (i) If a transversal intersects two parallel lines then the sum of interior angles on the same side of the transversal is
 (A) 0° (B) 90° (C) 180° (D) 360°
 - (ii) The number of angles formed by a transversal of two lines is
 (A) 2 (B) 4 (C) 8 (D) 16
 - (iii) A transversal intersects two parallel lines. If the measure of one of the angles is 40° then the measure of its corresponding angle is
 (A) 40° (B) 140° (C) 50° (D) 180°
 - (iv) In ΔABC , $\angle A = 76^\circ$, $\angle B = 48^\circ$, $\therefore \angle C =$
 (A) 66° (B) 56° (C) 124° (D) 28°
 - (v) Two parallel lines are intersected by a transversal. If measure of one of the alternate interior angles is 75° then the measure of the other angle is
 (A) 105° (B) 15° (C) 75° (D) 45°
- 2*. Ray PQ and ray PR are perpendicular to each other. Points B and A are in the interior and exterior of $\angle QPR$ respectively. Ray PB and ray PA are perpendicular to each other. Draw a figure showing all these rays and write -
 - (i) A pair of complementary angles (ii) A pair of supplementary angles.
 - (iii) A pair of congruent angles.

3. Prove that, if a line is perpendicular to one of the two parallel lines, then it is perpendicular to the other line also.

4. In figure 2.24, measures of some angles are shown. Using the measures find the measures of $\angle x$ and $\angle y$ and hence show that line $l \parallel$ line m .

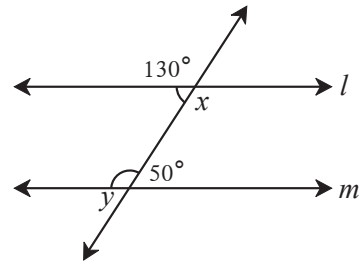


Fig. 2.24

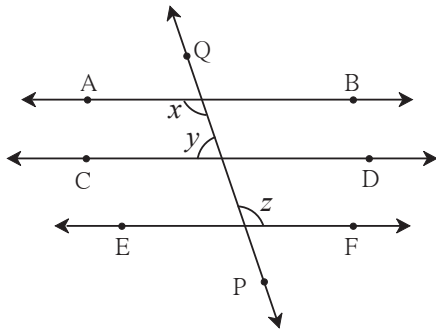


Fig. 2.25

5. Line $AB \parallel$ line $CD \parallel$ line EF and line QP is their transversal. If $y : z = 3 : 7$ then find the measure of $\angle x$. (See figure 2.25.)

6. In figure 2.26, if line $q \parallel$ line r , line p is their transversal and if $a = 80^\circ$ find the values of f and g .

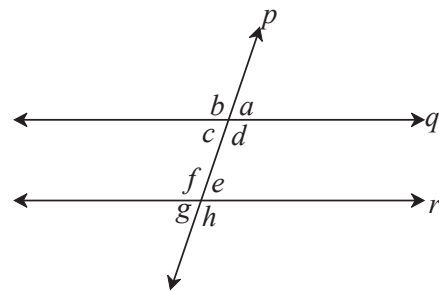


Fig. 2.26

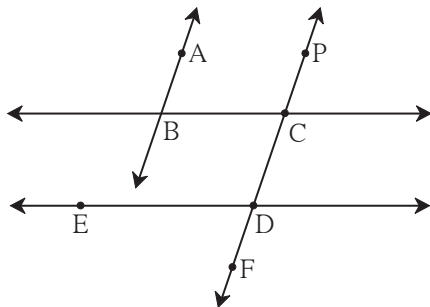


Fig. 2.27

7. In figure 2.27, if line $AB \parallel$ line CF and line $BC \parallel$ line ED then prove that $\angle ABC = \angle FDE$.

8. In figure 2.28, line PS is a transversal of parallel line AB and line CD . If Ray QX , ray QY , ray RX , ray RY are angle bisectors, then prove that $\square QXRY$ is a rectangle.

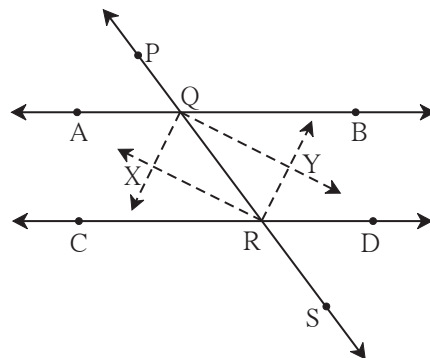


Fig. 2.28



Ex (3) Prove that the sum of exterior angles of a triangle, obtained by extending its sides in the same direction is 360° .

Given : $\angle PAB, \angle QBC$ and $\angle ACR$
are exterior angles of ΔABC

To prove : $\angle PAB + \angle QBC + \angle ACR = 360^\circ$

Proof : **Method I**

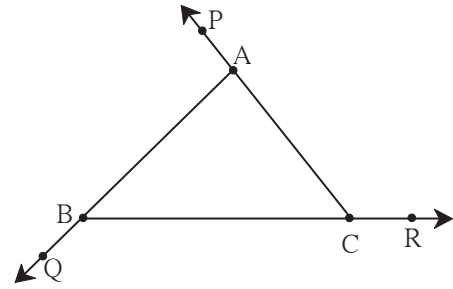


Fig. 3.5

Considering exterior $\angle PAB$ of ΔABC ,
 $\angle ABC$ and $\angle ACB$ are its remote interior angles.

$$\angle PAB = \angle ABC + \angle ACB \text{ ----(I)}$$

Similarly, $\angle ACR = \angle ABC + \angle BAC$ ----(II)..theorem of remote interior angles
and $\angle CBQ = \angle BAC + \angle ACB$ ---- (III)

Adding (I), (II) and (III),

$$\begin{aligned} \angle PAB + \angle ACR + \angle CBQ &= \angle ABC + \angle ACB + \angle ABC + \angle BAC + \angle BAC + \angle ACB \\ &= 2\angle ABC + 2\angle ACB + 2\angle BAC \\ &= 2(\angle ABC + \angle ACB + \angle BAC) \\ &= 2 \times 180^\circ \dots\dots \text{sum of interior angles of a triangle} \\ &= 360^\circ \end{aligned}$$

Method II

$\angle c + \angle f = 180^\circ \dots\dots$ (angles in linear pair)

Also, $\angle a + \angle d = 180^\circ$

and $\angle b + \angle e = 180^\circ$

$\therefore \angle c + \angle f + \angle a + \angle d + \angle b + \angle e = 180^\circ \times 3 = 540^\circ$

$\angle f + \angle d + \angle e + (\angle a + \angle b + \angle c) = 540^\circ$

$\therefore \angle f + \angle d + \angle e + 180^\circ = 540^\circ$

$\therefore f + d + e = 540^\circ - 180^\circ$

$= 360^\circ$

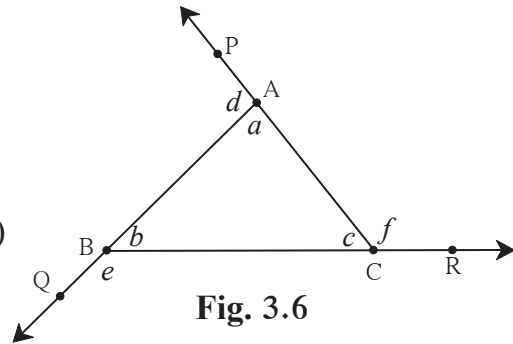


Fig. 3.6

5. In figure 3.9, measures of some angles are given. Using the measures find the values of x, y, z .

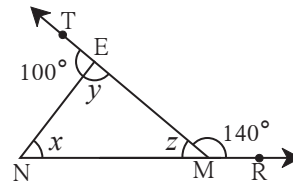


Fig. 3.9

6. In figure 3.10, line $AB \parallel$ line DE . Find the measures of $\angle DRE$ and $\angle ARE$ using given measures of some angles.

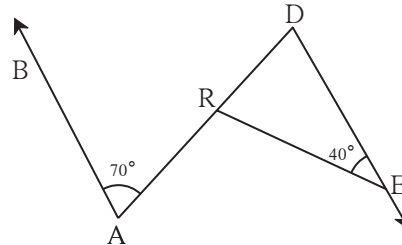


Fig. 3.10

7. In $\triangle ABC$, bisectors of $\angle A$ and $\angle B$ intersect at point O . If $\angle C = 70^\circ$. Find measure of $\angle AOB$.

8. In Figure 3.11, line $AB \parallel$ line CD and line PQ is the transversal. Ray PT and ray QT are bisectors of $\angle BPQ$ and $\angle P Q D$ respectively. Prove that $m\angle PTQ = 90^\circ$.

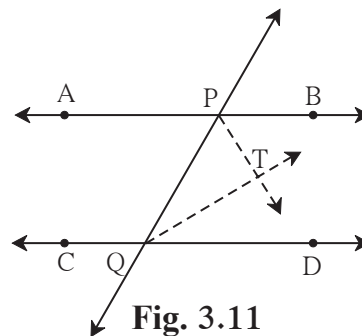


Fig. 3.11

9. Using the information in figure 3.12, find the measures of $\angle a, \angle b$ and $\angle c$.

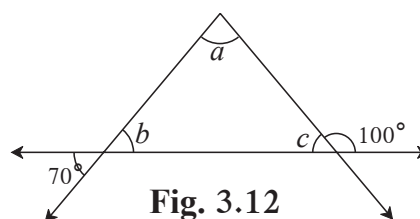


Fig. 3.12

10. In figure 3.13, line $DE \parallel$ line GF ray EG and ray FG are bisectors of $\angle DEF$ and $\angle DFM$ respectively. Prove that,
 (i) $\angle DEG = \frac{1}{2} \angle EDF$ (ii) $EF = FG$.

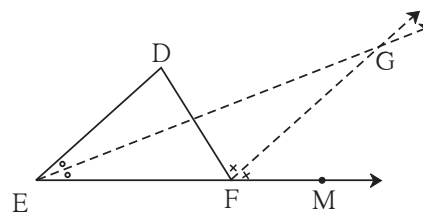


Fig. 3.13

Given six equations above are true for congruent triangles. For this let us see three specific equations are true then all six equations become true and hence two triangles congruent.

- (1) In a correspondence, if two angles of $\triangle ABC$ are equal to two angles of $\triangle PQR$ and the sides included by the respective pairs of angles are also equal, then the two triangles are congruent.

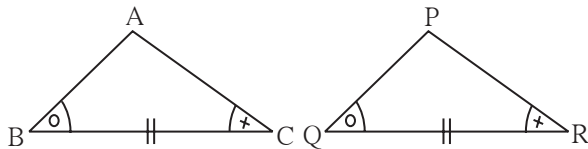


Fig. 3.15

This property is called as angle-side-angle test, which in short we write A-S-A test.

- (2) In a correspondence, if two sides of $\triangle ABC$ are equal to two sides of $\triangle PQR$ and the angles included by the respective pairs of sides are also equal, then the two triangles are congruent.

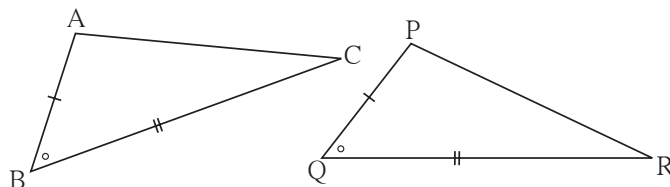


Fig. 3.16

This property is called as side-angle-side test, which in short we write S-A-S test.

- (3) In a correspondence, if three sides of $\triangle ABC$ are equal to three sides of $\triangle PQR$, then the two triangles are congruent.

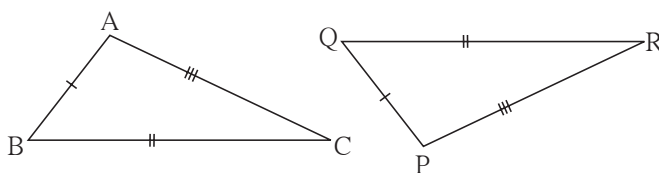


Fig. 3.17

This property is called as side-side-side test, which in short we write S-S-S test.

- (4) If in $\triangle ABC$ and $\triangle PQR$, $\angle B$ and $\angle Q$ are right angles, hypotenuses are equal and $AB = PQ$, then the two triangles are congruent.

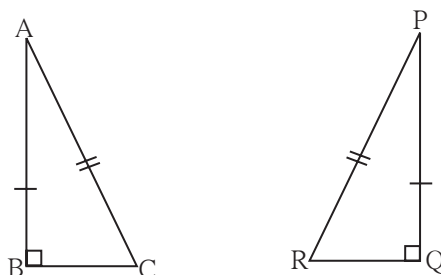


Fig. 3.18

This property is called the hypotenuse side test.



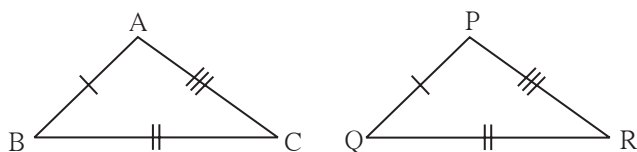
Remember this !

We have constructed triangles using the given information about parts of triangles. (For example, two angles and the included side, three sides, two sides and an included angle). We have experienced that the triangle constructed with any of these information is unique. So if by some one-to-one correspondence between two triangles, these three parts of one triangle are congruent with corresponding three parts of the other triangle then the two triangles are congruent. Then we come to know that in that correspondence their three angles and three sides are congruent. If two triangles are congruent then their respective angles and respective sides are congruent. This property is useful to solve many problems in Geometry.

Practice set 3.2

1. In each of the examples given below, a pair of triangles is shown. Equal parts of triangles in each pair are marked with the same signs. Observe the figures and state the test by which the triangles in each pair are congruent.

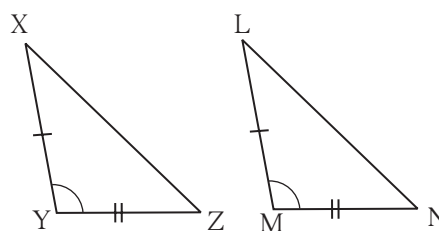
(i)



By test

$$\Delta ABC \cong \Delta PQR$$

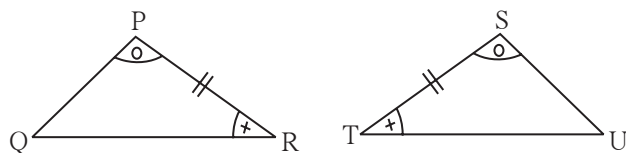
(ii)



By test

$$\Delta XYZ \cong \Delta LMN$$

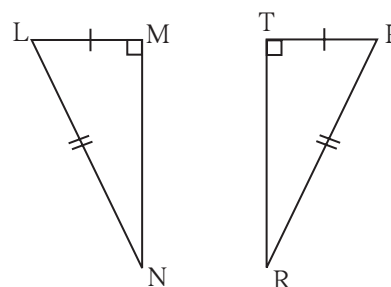
(iii)



By test

$$\Delta PRQ \cong \Delta STU$$

(iv)



By test

$$\Delta LMN \cong \Delta PTR$$

Fig. 3.19

2. Observe the information shown in pairs of triangles given below. State the test by which the two triangles are congruent. Write the remaining congruent parts of the triangles.

(i)

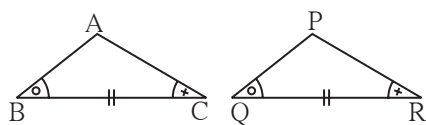


Fig. 3.20

From the information shown in the figure,
in $\triangle ABC$ and $\triangle PQR$

$$\angle ABC \cong \angle PQR$$

$$\text{seg } BC \cong \text{seg } QR$$

$$\angle ACB \cong \angle PRQ$$

$$\therefore \triangle ABC \cong \triangle PQR \dots\dots \boxed{} \text{ test}$$

$$\therefore \angle BAC \cong \boxed{} \dots\dots \text{corresponding angles of congruent triangles.}$$

$$\left. \begin{array}{l} \text{seg } AB \cong \boxed{\phantom{\text{seg}}} \\ \text{and } \boxed{\phantom{\text{seg}}} \cong \text{seg } PR \end{array} \right\} \dots\dots \text{corresponding sides of congruent triangles}$$

(ii)

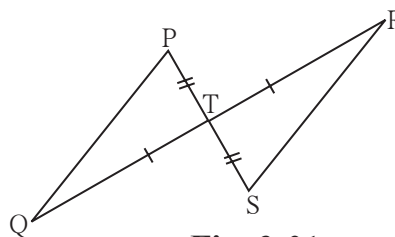


Fig. 3.21

From the information shown in the figure,,
In $\triangle PTQ$ and $\triangle STR$

$$\text{seg } PT \cong \text{seg } ST$$

$$\angle PTQ \cong \angle STR \dots\dots \text{vertically opposite angles}$$

$$\text{seg } TQ \cong \text{seg } TR$$

$$\therefore \triangle PTQ \cong \triangle STR \dots\dots \boxed{} \text{ test}$$

$$\left. \begin{array}{l} \therefore \angle TPQ \cong \boxed{} \\ \text{and } \boxed{} \cong \angle TRS \end{array} \right\} \dots\dots \text{corresponding angles of congruent triangles.}$$

$$\text{seg } PQ \cong \boxed{\phantom{\text{seg}}} \text{ corresponding sides of congruent triangles.}$$

3. From the information shown in the figure, state the test assuring the congruence of $\triangle ABC$ and $\triangle PQR$. Write the remaining congruent parts of the triangles.



Fig. 3.22

4. As shown in the following figure, in $\triangle LMN$ and $\triangle PNM$, $LM = PN$, $LN = PM$. Write the test which assures the congruence of the two triangles. Write their remaining congruent parts.

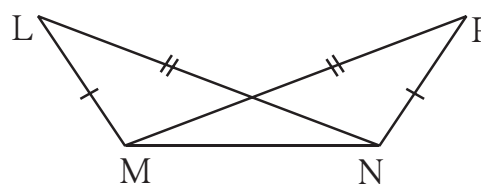


Fig. 3.23

5. In figure 3.24, $\text{seg } AB \cong \text{seg } CB$

and $\text{seg } AD \cong \text{seg } CD$.

Prove that

$$\triangle ABD \cong \triangle CBD$$

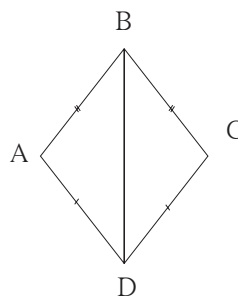


Fig. 3.24

Please note : corresponding sides of congruent triangles in short we write c.s.c.t. and corresponding angles of congruent triangles in short we write c.a.c.t.

Theorem : If the acute angles of a right angled triangle have measures 30° and 60° , then the length of the side opposite to 30° angle is half the length of the hypotenuse.

(Fill in the blanks and complete the proof.)

Given : In $\triangle ABC$
 $\angle B = 90^\circ, \angle C = 30^\circ, \angle A = 60^\circ$

To prove : $AB = \frac{1}{2} AC$

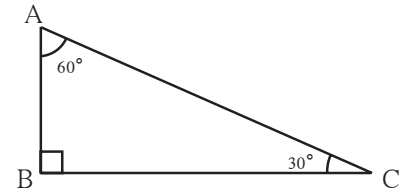


Fig. 3.29

Construction : Take a point D on the extended seg AB such that $AB = BD$. Draw seg DC.

Proof : $\triangle ABC$ and $\triangle DBC$

seg AB \cong seg DB

$\angle ABC \cong \angle DBC$

seg BC \cong seg BC

$\therefore \triangle ABC \cong \triangle DBC$

$\therefore \angle BAC \cong \angle BDC$ (c.a.c.t.)

In $\triangle ABC$, $\angle BAC = 60^\circ \therefore \angle BDC = 60^\circ$

$\angle DAC = \angle ADC = \angle ACD = 60^\circ \dots \therefore$ sum of angles of $\triangle ADC$ is 180°

$\therefore \triangle ADC$ is an equilateral triangle.

$\therefore AC = AD = DC$ corollary of converse of isosceles triangle theorem

But $AB = \frac{1}{2} AD$ construction

$\therefore AB = \frac{1}{2} AC$ $\because AD = AC$

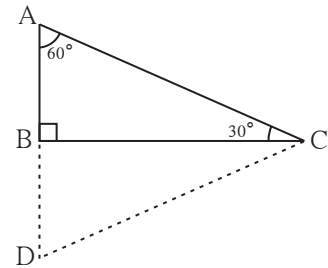


Fig. 3.30

Activity

With the help of the Figure 3.29 above fill in the blanks and complete the proof of the following theorem.

Theorem : If the acute angles of a right angled triangle have measures 30° and 60° then the length of the side opposite to 60° angle is $\frac{\sqrt{3}}{2} \times$ hypotenuse

Proof : In the above theorem we have proved $AB = \frac{1}{2} AC$

$AB^2 + BC^2 =$ Pythagoras theorem

$\frac{1}{4} AC^2 + BC^2 =$

$\therefore BC^2 = AC^2 - \frac{1}{4} AC^2$

$\therefore BC^2 =$

$\therefore BC = \frac{\sqrt{3}}{2} AC$

Activity : Complete the proof of the theorem.

Theorem : If measures of angles of a triangle are $45^\circ, 45^\circ, 90^\circ$ then the length of each side containing the right angle is $\frac{1}{\sqrt{2}} \times$ hypotenuse.

Proof : In ΔABC , $\angle B = 90^\circ$ and $\angle A = \angle C = 45^\circ$

$$\therefore BC = AB$$

By Pythagoras theorem

$$AB^2 + BC^2 = \square$$

$$AB^2 + \square = AC^2 \dots \because (BC = AB)$$

$$\therefore 2AB^2 = \square$$

$$\therefore AB^2 = \square$$

$$\therefore AB = \frac{1}{\sqrt{2}} AC$$

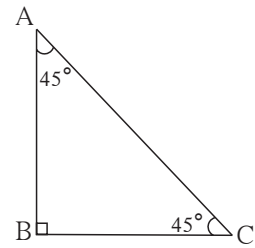


Fig. 3.31

This property is called $45^\circ - 45^\circ - 90^\circ$ theorem.



Remember this !

- (1) If the acute angles of a right angled triangle are $30^\circ, 60^\circ$ then the length of side opposite to 30° angle is half of hypotenuse and the length of side opposite to 60° angle is $\frac{\sqrt{3}}{2}$ hypotenuse . This property is called $30^\circ - 60^\circ - 90^\circ$ theorem.
- (2) If acute angles of a right angled triangle are $45^\circ, 45^\circ$ then the length of each side containing the right angle is $\frac{\text{hypotenuse}}{\sqrt{2}}$.
This property is called $45^\circ - 45^\circ - 90^\circ$ theorem.



Let's recall.

Median of a triangle

The segment joining a vertex and the mid-point of the side opposite to it is called a **Median** of the triangle.

In Figure 3.32, point D is the mid point of side BC.

\therefore seg AD is a median of ΔABC .

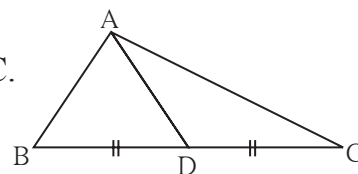


Fig. 3.32

Activity I : Draw a triangle ABC. Draw medians AD, BE and CF of the triangle. Let their point of concurrence be G, which is called the centroid of the triangle. Compare the lengths of AG and GD with a divider. Verify that the length of AG is twice the length of GD. Similarly, verify that the length of BG is twice the length of GE and the length of CG is twice the length of GF. Hence note the following property of medians of a triangle.

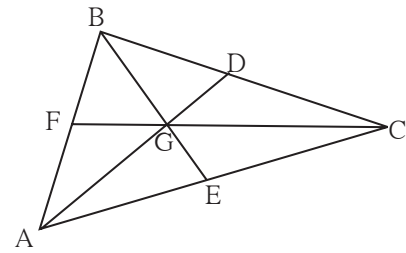


Fig. 3.33

The point of concurrence of medians of a triangle divides each median in the ratio 2 : 1.

Activity II : Draw a triangle ABC on a cardboard. Draw its medians and denote their point of concurrence as G. Cut out the triangle.

Now take a pencil. Try to balance the triangle on the flat tip of the pencil. The triangle is balanced only when the point G is on the flat tip of the pencil.

This activity shows an important property of the **centroid** (point of concurrence of the medians) of the triangle.

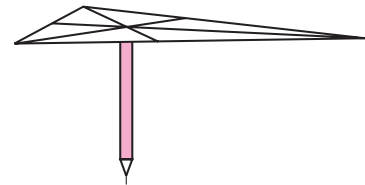


Fig. 3.34



Let's learn.

Property of median drawn on the hypotenuse of right triangle

Activity : In the figure 3.35, ΔABC is a right angled triangle. seg BD is the median on hypotenuse.

Measure the lengths of the following segments.

AD = DC = BD =

From the measurements verify that $BD = \frac{1}{2} AC$.

Now let us prove the property, the length of the median is half the length of the hypotenuse.

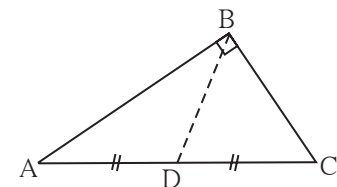


Fig. 3.35

Theorem : In a right angled triangle, the length of the median of the hypotenuse is half the length of the hypotenuse.

Given : In $\triangle ABC$, $\angle B = 90^\circ$, seg BD is the median.

To prove : $BD = \frac{1}{2} AC$

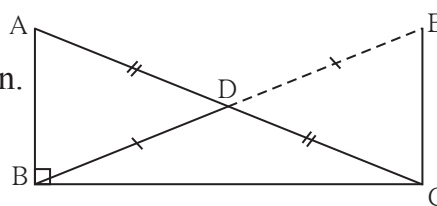


Fig. 3.36

Construction : Take point E on the ray BD such that B - D - E and $l(BD) = l(DE)$. Draw seg EC.

Proof : (Main steps are given. Write the steps in between with reasons and complete the proof.)

$\triangle ADB \cong \triangle CDE$ by S-A-S test

line AB \parallel line ECby test of alternate angles

$\triangle ABC \cong \triangle ECB$ by S-A-S test

$$BD = \frac{1}{2} AC$$



Remember this !

In a right angled triangle, the length of the median on its hypotenuse is half the length of the hypotenuse.

Practice set 3.3

- Find the values of x and y using the information shown in figure 3.37.
Find the measure of $\angle ABD$ and $m\angle ACD$.

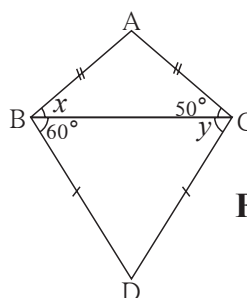


Fig. 3.37

- The length of hypotenuse of a right angled triangle is 15. Find the length of median of its hypotenuse.
- In $\triangle PQR$, $\angle Q = 90^\circ$, $PQ = 12$, $QR = 5$ and QS is a median. Find $l(QS)$.
- In figure 3.38, point G is the point of concurrence of the medians of $\triangle PQR$. If $GT = 2.5$, find the lengths of PG and PT.

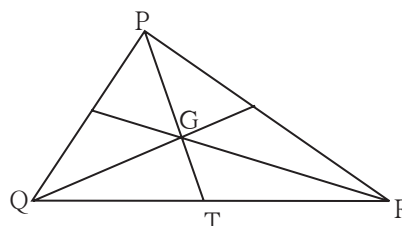


Fig. 3.38

$\therefore \triangle PMA \cong \triangle PMB$ S-A-S test
 $\therefore \text{seg } PA \cong \text{seg } PB$ c.s.c.t.
 $\therefore l(PA) = l(PB)$

Hence every point on the perpendicular bisector of a segment is equidistant from the end points of the segment.

Part II : Any point equidistant from the end points of a segment lies on the perpendicular bisector of the segment.

Given : Point P is any point equidistant from the end points of seg AB. That is, $PA = PB$.

To prove: Point P is on the perpendicular bisector of seg AB.

Construction : Take mid-point M of seg AB and draw line PM.

Proof : In $\triangle PAM$ and $\triangle PBM$

seg PA \cong seg PB

seg AM \cong seg BM

seg PM \cong common side

$\therefore \triangle PAM \cong \triangle PBM$ test.

$\therefore \angle PMA \cong \angle PMB$c.a.c.t.

But $\angle PMA + \text{} = 180^\circ$

$\angle PMA + \angle PMA = 180^\circ$ ($\because \angle PMB = \angle PMA$)

$2 \angle PMA = \text{}$

$\therefore \angle PMA = 90^\circ$

$\therefore \text{seg } PM \perp \text{seg } AB$ (1)

But Point M is the midpoint of seg AB.construction (2)

\therefore line PM is the perpendicular bisector of seg AB. So point P is on the perpendicular bisector of seg AB.

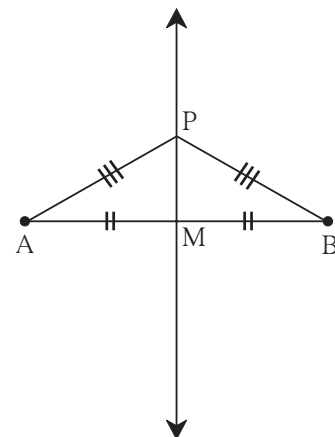


Fig. 3.41

Angle bisector theorem

Part I : Every point on the bisector of an angle is equidistant from the sides of the angle.

Given : Ray QS is the bisector of $\angle PQR$.
 Point A is any point on ray QS
 $\text{seg } AB \perp \text{ray } QP$ $\text{seg } AC \perp \text{ray } QR$

To prove : $\text{seg } AB \cong \text{seg } AC$

Proof : Write the proof using test of congruence of triangles.

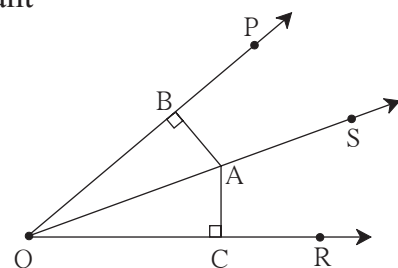


Fig. 3.42

Part II : Any point equidistant from sides of an angle is on the bisector of the angle.

Given : A is a point in the interior of $\angle PQR$.
 $\text{seg } AC \perp \text{ray } QR$ $\text{seg } AB \perp \text{ray } QP$
 and $AB = AC$

To prove : Ray QA is the bisector of $\angle PQR$.
 That is $\angle BQA = \angle CQA$

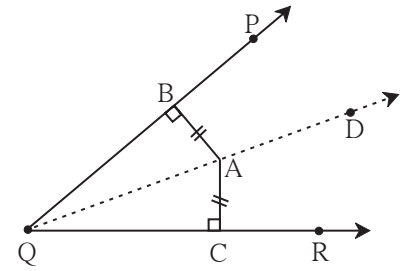


Fig. 3.43

Proof : Write the proof using proper test of congruence of triangles.



Activity

As shown in the figure, draw $\triangle XYZ$
 such that $XZ > \text{side } XY$
 Find which of $\angle Z$ and $\angle Y$ is greater.

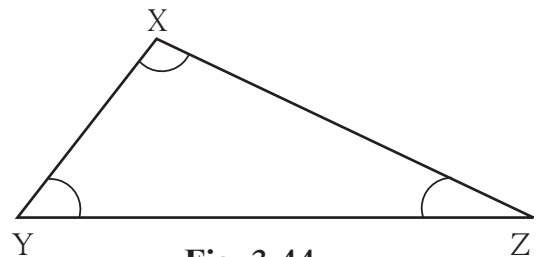


Fig. 3.44



Properties of inequalities of sides and angles of a triangle

Theorem : If two sides of a triangle are unequal, then the angle opposite to the greater side is greater than angle opposite to the smaller side.

Given : In $\triangle XYZ$, side $XZ > \text{side } XY$

To prove : $\angle XYZ > \angle XZY$

Construction : Take point P on side XZ such that
 $XY = XP$, Draw seg YP.

Proof : In $\triangle XYP$
 $XY = XP$ construction

$\therefore \angle XYP = \angle XPY$isosceles triangle theorem(I)

$\angle XPY$ is an exterior angle of $\triangle YPZ$.

$\therefore \angle XPY > \angle PZY$ exterior angle theorem

$\therefore \angle XYP > \angle PZY$ from (I)

$\therefore \angle XYP + \angle PYZ > \angle PZY$ If $a > b$ and $c > 0$ then $a + c > b$

$\therefore \angle XYZ > \angle PZY$, that is $\angle XYZ > \angle XZY$

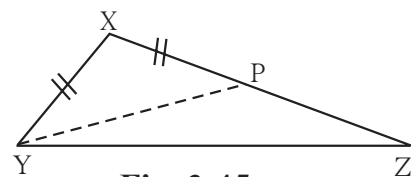


Fig. 3.45

Theorem : The sum of any two sides of a triangle is greater than the third side.

Given : $\triangle ABC$ is any triangle.

To prove : $AB + AC > BC$
 $AB + BC > AC$
 $AC + BC > AB$

Construction : Take a point D on ray BA such that $AD = AC$.

Proof : In $\triangle ACD$, $AC = AD$ construction

$\therefore \angle ACD = \angle ADC$ c.a.c.t.

$\therefore \angle ACD + \angle ACB > \angle ADC$

$\therefore \angle BCD > \angle ADC$

\therefore side $BD >$ side BC the side opposite to greater angle is greater

$\therefore BA + AD > BC$ $\because BD = BA + AD$

$BA + AC > BC$ $\because AD = AC$

Similarly we can prove that $AB + BC > AC$

and $BC + AC > AB$.

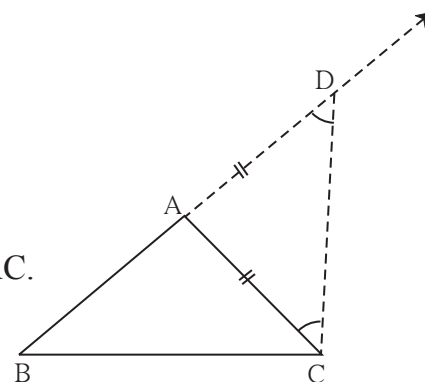


Fig. 3.47

Practice set 3.4

1. In figure 3.48, point A is on the bisector of $\angle XYZ$.

If $AX = 2$ cm then find AZ .

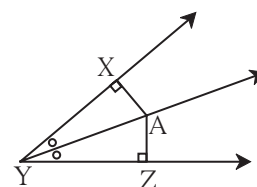


Fig. 3.48

2.

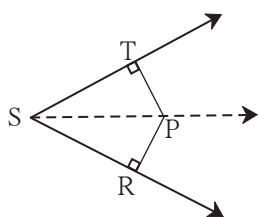


Fig. 3.49

In figure 3.49, $\angle RST = 56^\circ$, seg $PT \perp$ ray ST ,

seg $PR \perp$ ray SR and seg $PR \cong$ seg PT

Find the measure of $\angle RSP$.

State the reason for your answer.

3. In $\triangle PQR$, $PQ = 10$ cm, $QR = 12$ cm, $PR = 8$ cm. Find out the greatest and the smallest angle of the triangle.

4. In $\triangle FAN$, $\angle F = 80^\circ$, $\angle A = 40^\circ$. Find out the greatest and the smallest side of the triangle. State the reason.

5. Prove that an equilateral triangle is equiangular.

6. Prove that, if the bisector of $\angle BAC$ of ΔABC is perpendicular to side BC , then ΔABC is an isosceles triangle.

7. In figure 3.50, if $\text{seg } PR \cong \text{seg } PQ$, show that $\text{seg } PS > \text{seg } PQ$.

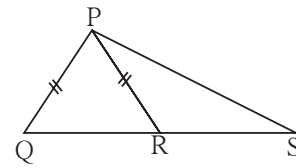


Fig. 3.50

8. In figure 3.51, in ΔABC , $\text{seg } AD$ and $\text{seg } BE$ are altitudes and $AE = BD$.

Prove that $\text{seg } AD \cong \text{seg } BE$

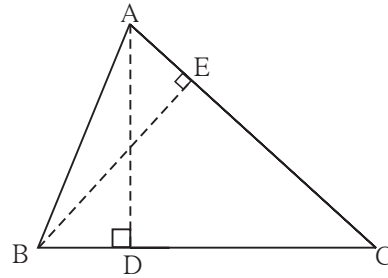


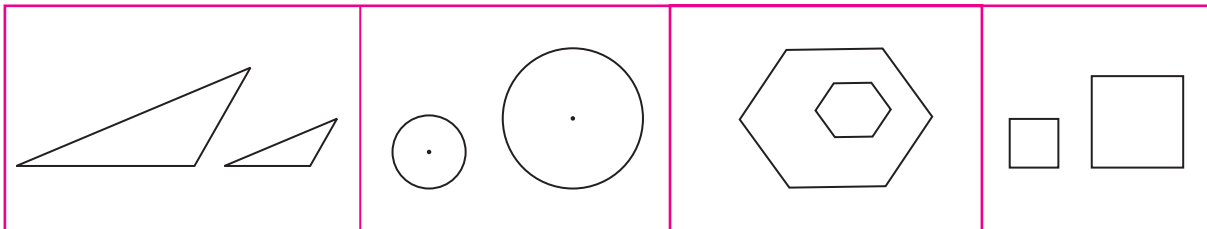
Fig. 3.51



Let's learn.



Similar triangles

Observe the following figures.



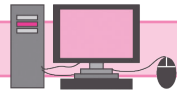
The pairs of figures shown in each part have the same shape but their sizes are different. It means that they are not congruent.

Such like looking figures are called similar figures.



We find similarity in a photo and its enlargement, also we find similarity between a road-map and the roads.

The proportionality of all sides is an important property of similarity of two figures. But the angles in the figures have to be of the same measure. If the angle between this roads is not the same in its map, then the map will be misleading.



ICT Tools or Links

Take a photograph on a mobile or a computer. Recall what you do to reduce it or to enlarge it. Also recall what you do to see a part of the photograph in detail.

Now we shall learn properties of similar triangles through an activity.

Activity : On a card-sheet, draw a triangle of sides 4 cm, 3 cm and 2 cm. Cut it out. Make 13 more copies of the triangle and cut them out from the card sheet. Note that all these triangular pieces are congruent. Arrange them as shown in the following figure and make three triangles out of them.

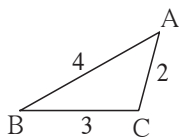


Fig. 3.52

1 triangle

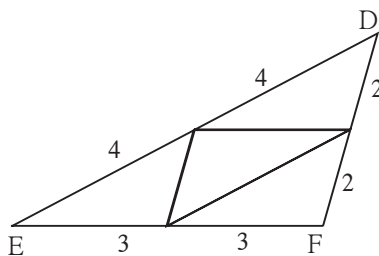


Fig. 3.53

4 triangles

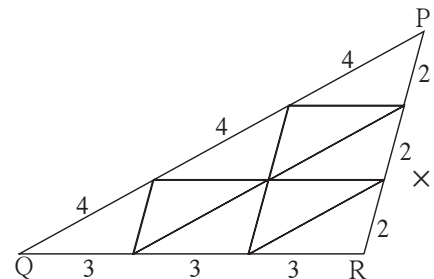


Fig. 3.54

9 triangles

ΔABC and ΔDEF are similar in the correspondence $ABC \leftrightarrow DEF$.

$$\angle A \cong \angle D, \angle B \cong \angle E, \angle C \cong \angle F$$

$$\text{and } \frac{AB}{DE} = \frac{4}{8} = \frac{1}{2}; \quad \frac{BC}{EF} = \frac{3}{6} = \frac{1}{2}; \quad \frac{AC}{DF} = \frac{2}{4} = \frac{1}{2},$$

.....the corresponding sides are in proportion.

Similarly, consider ΔDEF and ΔPQR . Are their angles congruent and sides proportional in the correspondence $DEF \leftrightarrow PQR$?



Let's learn.

Similarity of triangles

In ΔABC and ΔPQR , If (i) $\angle A = \angle P$, $\angle B = \angle Q$, $\angle C = \angle R$ and

(ii) $\frac{AB}{PQ} = \frac{BC}{QR} = \frac{AC}{PR}$; then ΔABC and ΔPQR are called similar triangles.

' ΔABC and ΔPQR are similar' is written as ' $\Delta ABC \sim \Delta PQR$ '.

Let us learn the relation between the corresponding angles and corresponding sides of similar triangles through an activity.

Activity : Draw a triangle $\Delta A_1B_1C_1$ on a card-sheet and cut it out. Measure $\angle A_1, \angle B_1, \angle C_1$.

Draw two more triangles $\Delta A_2B_2C_2$ and $\Delta A_3B_3C_3$ such that

$\angle A_1 = \angle A_2 = \angle A_3$, $\angle B_1 = \angle B_2 = \angle B_3$, $\angle C_1 = \angle C_2 = \angle C_3$

and $B_1C_1 > B_2C_2 > B_3C_3$. Now cut these two triangles also. Measure the lengths of the three triangles. Arrange the triangles in two ways as shown in the figure.

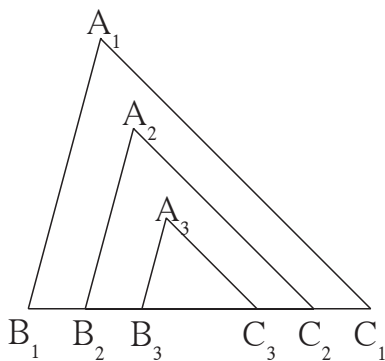


Fig. 3.55

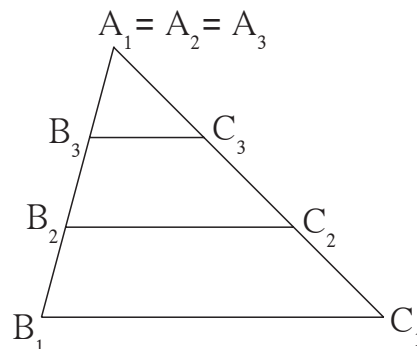


Fig. 3.56

Check the ratios $\frac{A_1B_1}{A_2B_2}$, $\frac{B_1C_1}{B_2C_2}$, $\frac{A_1C_1}{A_2C_2}$. You will notice that the ratios are equal.

Similarly, see whether the ratios $\frac{A_1C_1}{A_3C_3}$, $\frac{B_1C_1}{B_3C_3}$, $\frac{A_1B_1}{A_3B_3}$ are equal.

From this activity note that, when corresponding angles of two triangles are equal, the ratios of their corresponding sides are also equal. That is, their corresponding sides are in the same proportion.

We have seen that, in ΔABC and ΔPQR if

(i) $\angle A = \angle P$, $\angle B = \angle Q$, $\angle C = \angle R$, then (ii) $\frac{AB}{PQ} = \frac{BC}{QR} = \frac{AC}{PR}$

This means, if corresponding angles of two triangles are equal then the corresponding sides are in the same proportion.

This rule can be proved elaborately. We shall use it to solve problems.



Let's recall.

While preparing a map of a locality, you have to show the distances between different spots on roads with a proper scale. For example, 1 cm = 100 m, 1 cm = 50 m etc. Did you think of the properties of triangle ? Keep in mind that side opposite to greater angle is greater.

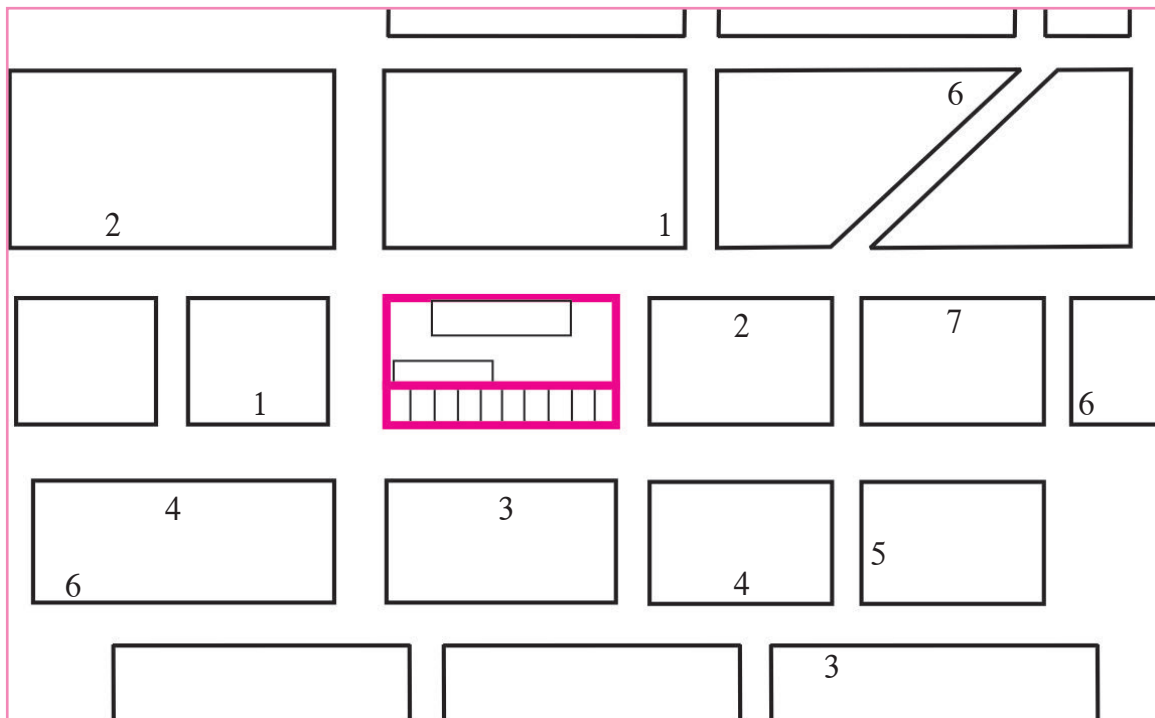
Project :

Prepare a map of road surrounding your school or home, upto a distance of about 500 metre.

How will you measure the distance between two spots on a road ?

While walking, count how many steps cover a distance of about two metre. Suppose, your three steps cover a distance of 2 metre. Considering this proportion 90 steps means 60 metre. In this way you can judge the distances between different spots on roads and also the lengths of roads. You have to judge the measures of angles also where two roads meet each other. Choosing a proper scale for lengths of roads, prepare a map. Try to show shops, buildings, bus stops, rickshaw stand etc. in the map.

A sample map with legend is given below.



Legend: 1. Book store 2. Bus stop 3. Stationery shop 4. Bank
 5. Medical store 6. Restaurant 7. Cycle shop

Problem set 3

1. Choose the correct alternative answer for the following questions.
 - (i) If two sides of a triangle are 5 cm and 1.5 cm, the length of its third side cannot be
 (A) 3.7 cm (B) 4.1 cm (C) 3.8 cm (D) 3.4 cm
 - (ii) In ΔPQR , If $\angle R > \angle Q$ then
 (A) $QR > PR$ (B) $PQ > PR$ (C) $PQ < PR$ (D) $QR < PR$
 - (iii) In ΔTPQ , $\angle T = 65^\circ$, $\angle P = 95^\circ$ which of the following is a true statement ?
 (A) $PQ < TP$ (B) $PQ < TQ$ (C) $TQ < TP < PQ$ (D) $PQ < TP < TQ$
2. ΔABC is isosceles in which $AB = AC$. Seg BD and seg CE are medians. Show that $BD = CE$.

3. In ΔPQR , If $PQ > PR$ and bisectors of $\angle Q$ and $\angle R$ intersect at S . Show that $SQ > SR$.

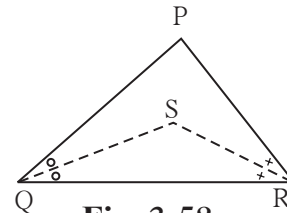


Fig. 3.58

4. In figure 3.59, point D and E are on side BC of ΔABC , such that $BD = CE$ and $AD = AE$. Show that $\Delta ABD \cong \Delta ACE$.

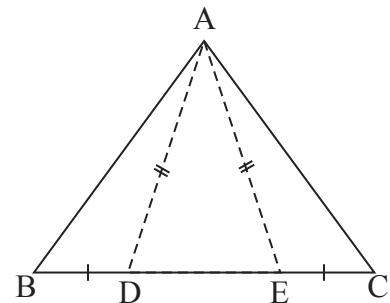


Fig. 3.59

5. In figure 3.60, point S is any point on side QR of ΔPQR . Prove that : $PQ + QR + RP > 2PS$

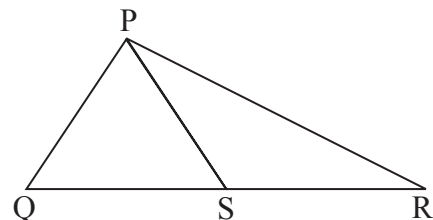


Fig. 3.60

6. In figure 3.61, bisector of $\angle BAC$ intersects side BC at point D .
Prove that $AB > BD$

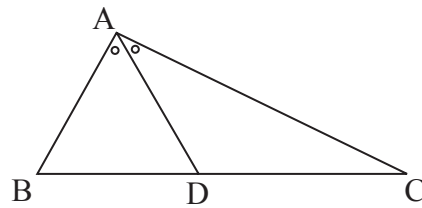


Fig. 3.61

7.

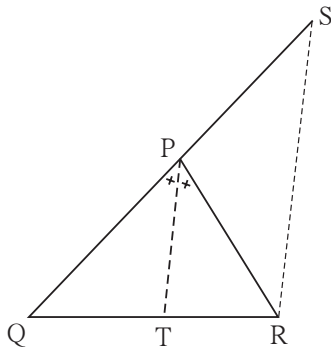


Fig. 3.62

In figure 3.62, seg PT is the bisector of $\angle QPR$.
A line parallel to seg PT and passing through R intersects ray QP at point S . Prove that $PS = PR$.

8. In figure 3.63, seg $AD \perp$ seg BC .
seg AE is the bisector of $\angle CAB$ and
 $C - E - D$.
Prove that

$$\angle DAE = \frac{1}{2} (\angle C - \angle B)$$

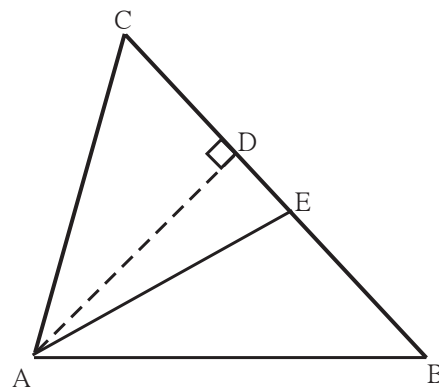


Fig. 3.63



Use your brain power!

We have learnt that if two triangles are equiangular then their sides are in proportion. What do you think if two quadrilaterals are equiangular? Are their sides in proportion? Draw different figures and verify.

Verify the same for other polygons.





Let's study.

To construct a triangle, if following information is given.

- Base, an angle adjacent to the base and sum of lengths of two remaining sides.
- Base, an angle adjacent to the base and difference of lengths of remaining two sides.
- Perimeter and angles adjacent to the base.



Let's recall.

In previous standard we have learnt the following triangle constructions.

- * To construct a triangle when its three sides are given.
- * To construct a triangle when its base and two adjacent angles are given.
- * To construct a triangle when two sides and the included angle are given.
- * To construct a right angled triangle when its hypotenuse and one side is given.

Perpendicular bisector Theorem

- Every point on the perpendicular bisector of a segment is equidistant from its end points.
- Every point equidistant from the end points of a segment is on the perpendicular bisector of the segment.

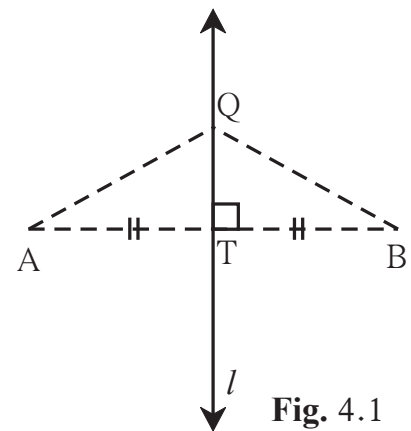


Fig. 4.1



Let's learn.

Constructions of triangles

To construct a triangle, three conditions are required. Out of three sides and three angles of a triangle two parts and some additional information about them is given, then we can construct a triangle using them.

We frequently use the following property in constructions.

If a point is on two different lines then it is the intersection of the two lines.

Construction I

To construct a triangle when its base, an angle adjacent to the base and the sum of the lengths of remaining sides is given.

Ex. Construct $\triangle ABC$ in which $BC = 6.3$ cm, $\angle B = 75^\circ$ and $AB + AC = 9$ cm.

Solution : Let us first draw a rough figure of expected triangle.

Explanation : As shown in the rough figure, first we draw seg $BC = 6.3$ cm of length. On the ray making an angle of 75° with seg BC , mark point D such that

$$BD = AB + AC = 9 \text{ cm}$$

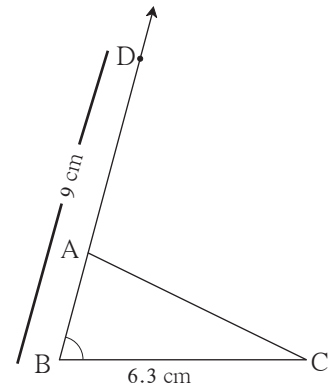
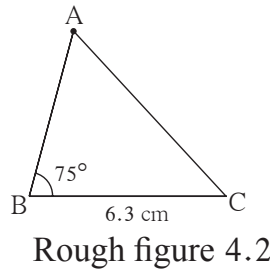
Now we have to locate point A on ray BD .

$$BA + AD = BA + AC = 9$$

$$\therefore AD = AC$$

\therefore point A is on the perpendicular bisector of seg CD .

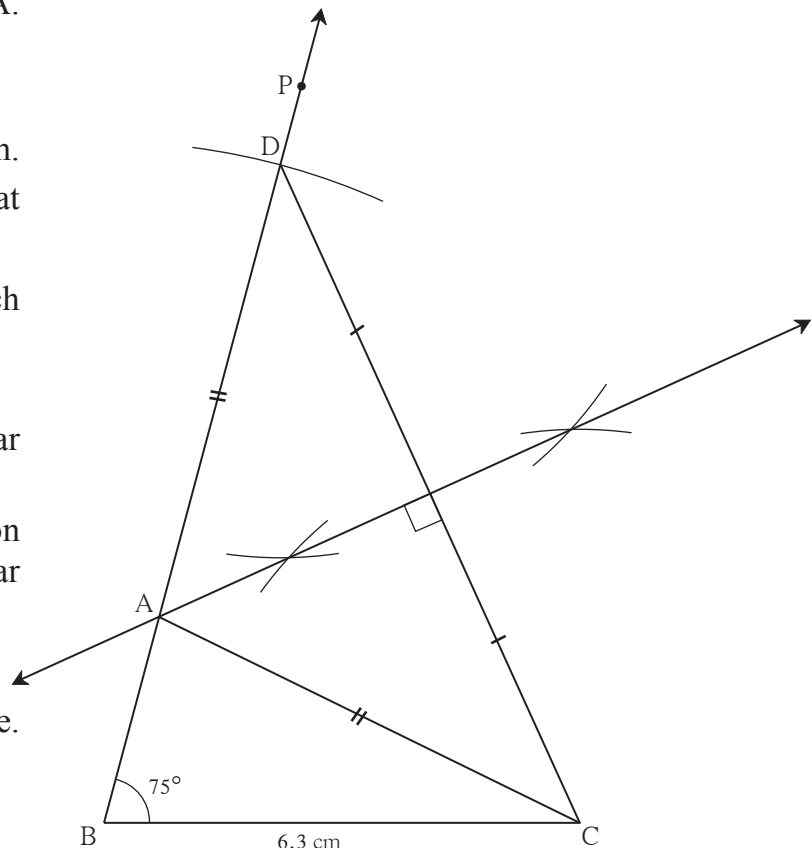
\therefore the point of intersection of ray BD and the perpendicular bisector of seg CD is point A .



Steps of construction

- (1) Draw seg BC of length 6.3 cm.
- (2) Draw ray BP such that $m\angle PBC = 75^\circ$.
- (3) Mark point D on ray BP such that $d(B,D) = 9$ cm
- (4) Draw seg DC .
- (5) Construct the perpendicular bisector of seg DC .
- (6) Name the point of intersection of ray BP and the perpendicular bisector of CD as A .
- (7) Draw seg AC .

$\triangle ABC$ is the required triangle.



Practice set 4.1

1. Construct ΔPQR , in which $QR = 4.2$ cm, $m\angle Q = 40^\circ$ and $PQ + PR = 8.5$ cm
2. Construct ΔXYZ , in which $YZ = 6$ cm, $XY + XZ = 9$ cm. $\angle XYZ = 50^\circ$
3. Construct ΔABC , in which $BC = 6.2$ cm, $\angle ACB = 50^\circ$, $AB + AC = 9.8$ cm
4. Construct ΔABC , in which $BC = 3.2$ cm, $\angle ACB = 45^\circ$ and perimeter of ΔABC is 10 cm

Construction II

To construct a triangle when its base, angle adjacent to the base and difference between the remaining sides is given.

Ex (1) Construct ΔABC , such that $BC = 7.5$ cm, $\angle ABC = 40^\circ$, $AB - AC = 3$ cm.

Solution : Let us draw a rough figure.

Explanation : $AB - AC = 3$ cm $\therefore AB > AC$

Draw seg BC . We can draw the ray BL such that $\angle LBC = 40^\circ$. We have to locate point A on ray BL . Take point D on ray BL such that $BD = 3$ cm.

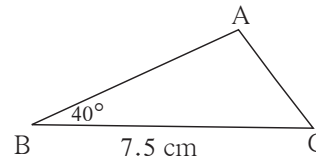
Now, $B-D-A$ and $BD = AB - AD = 3$.

It is given that $AB - AC = 3$

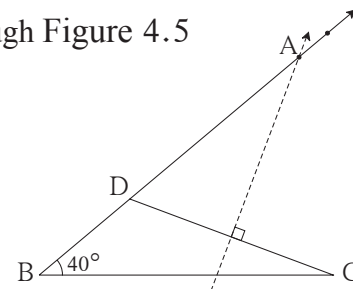
$\therefore AD = AC$

\therefore point A is on the perpendicular bisector of seg DC .

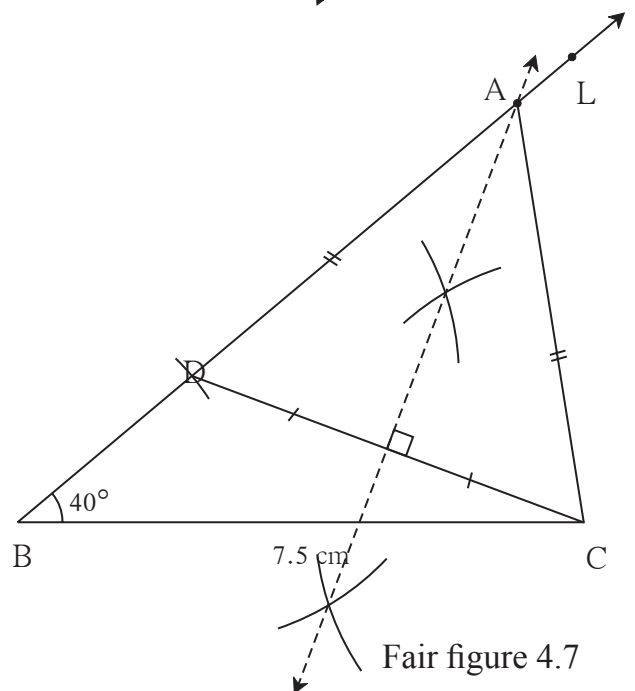
\therefore point A is the intersection of ray BL and the perpendicular bisector of seg DC .



Rough Figure 4.5



Rough figure 4.6



Fair figure 4.7

Steps of construction

- (1) Draw seg BC of length 7.5 cm.
- (2) Draw ray BL such that $\angle LBC = 40^\circ$
- (3) Take point D on ray BL such that $BD = 3$ cm.
- (4) Construct the perpendicular bisector of seg CD .
- (5) Name the point of intersection of ray BL and the perpendicular bisector of seg CD as A .
- (6) Draw seg AC .
 ΔABC is required triangle.

Ex. 2 Construct $\triangle ABC$, in which side $BC = 7$ cm, $\angle B = 40^\circ$ and $AC - AB = 3$ cm.

Solution : Let us draw a rough figure.

seg $BC = 7$ cm. $AC > AB$.

We can draw ray BT such that

$\angle TBC = 40^\circ$

Point A is on ray BT . Take point D on opposite ray of ray BT such that

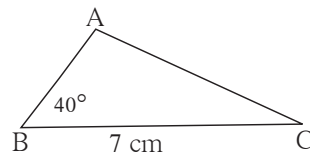
$BD = 3$ cm.

Now $AD = AB + BD = AB + 3 = AC$

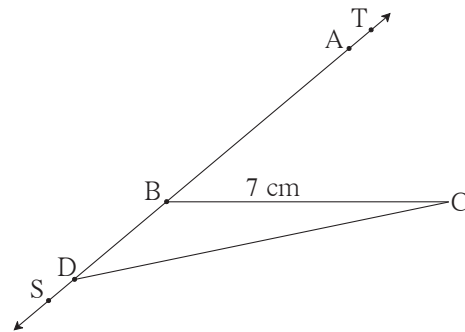
($\because AC - AB = 3$ cm.)

$\therefore AD = AC$

\therefore point A is on the perpendicular bisector of seg CD .



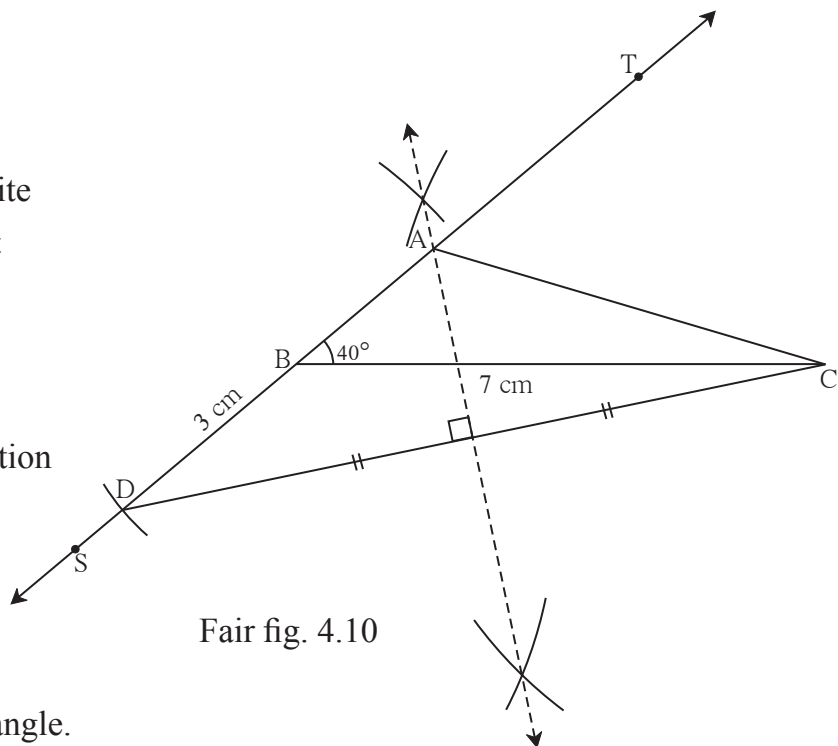
Rough figure 4.8



Rough figure 4.9

Steps of construction

- (1) Draw BC of length 7 cm.
- (2) Draw ray BT such that $\angle TBC = 40^\circ$
- (3) Take point D on the opposite ray BS of ray BT such that $BD = 3$ cm.
- (4) Construct perpendicular bisector of seg DC .
- (5) Name the point of intersection of ray BT and the perpendicular bisector of DC as A .
- (6) Draw seg AC .
 $\triangle ABC$ is the required triangle.



Fair fig. 4.10

Practice set 4.2

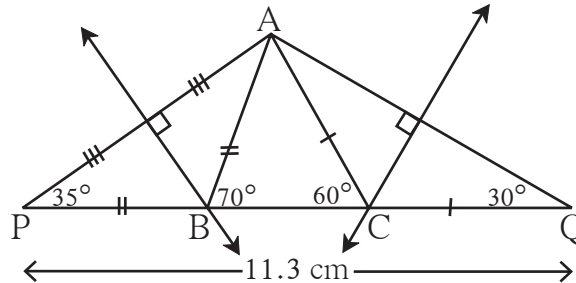
1. Construct $\triangle XYZ$, such that $YZ = 7.4$ cm, $\angle XYZ = 45^\circ$ and $XY - XZ = 2.7$ cm.
2. Construct $\triangle PQR$, such that $QR = 6.5$ cm, $\angle PQR = 40^\circ$ and $PQ - PR = 2.5$ cm.
3. Construct $\triangle ABC$, such that $BC = 6$ cm, $\angle ABC = 100^\circ$ and $AC - AB = 2.5$ cm.

Construction III

To construct a triangle, if its perimeter, base and the angles which include the base are given.

Ex. Construct $\triangle ABC$ such that $AB + BC + CA = 11.3$ cm, $\angle B = 70^\circ$, $\angle C = 60^\circ$.

Solution : Let us draw a rough figure.



Rough Fig. 4.11

Explanation : As shown in the figure, points P and Q are taken on line BC such that,

$$PB = AB, \quad CQ = AC$$

$$\therefore PQ = PB + BC + CQ = AB + BC + AC = 11.3 \text{ cm.}$$

Now in $\triangle PBA$, $PB = BA$

$$\therefore \angle APB = \angle PAB \text{ and } \angle APB + \angle PAB = \text{exterior angle } ABC = 70^\circ$$

.....theorem of remote interior angles

$$\therefore \angle APB = \angle PAB = 35^\circ \quad \text{Similarly, } \angle CQA = \angle CAQ = 30^\circ$$

Now we can draw $\triangle PAQ$, as its two angles and the included side is known.

Since $BA = BP$, point B lies on the perpendicular bisector of seg AP.

Similarly, $CA = CQ$, therefore point C lies on the perpendicular bisector of seg AQ

\therefore by constructing the perpendicular bisectors of seg AP and AQ we can get points

B and C, where the perpendicular bisectors intersect line PQ.

Steps of construction

- (1) Draw seg PQ of 11.3 cm length.
- (2) Draw a ray making angle of 35° at point P.
- (3) Draw another ray making an angle of 30° at point Q.
- (4) Name the point of intersection of the two rays as A.
- (5) Draw the perpendicular bisector of seg AP and seg AQ. Name the points as B and C respectively where the perpendicular bisectors intersect line PQ.
- (6) Draw seg AB and seg AC.

$\triangle ABC$ is the required triangle.



Let's study.

- Parallelogram**
- Rectangles**
- Mid point theorem**
- Tests of parallelogram**
- Square**
- Trapezium**
- Rhombus**



Let's recall.

1.

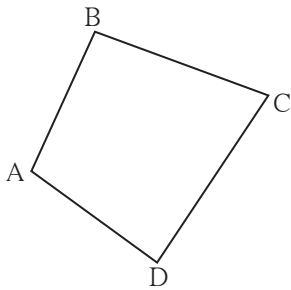


Fig. 5.1

Write the following pairs considering $\square ABCD$

Pairs of adjacent sides: Pairs of adjacent angles :

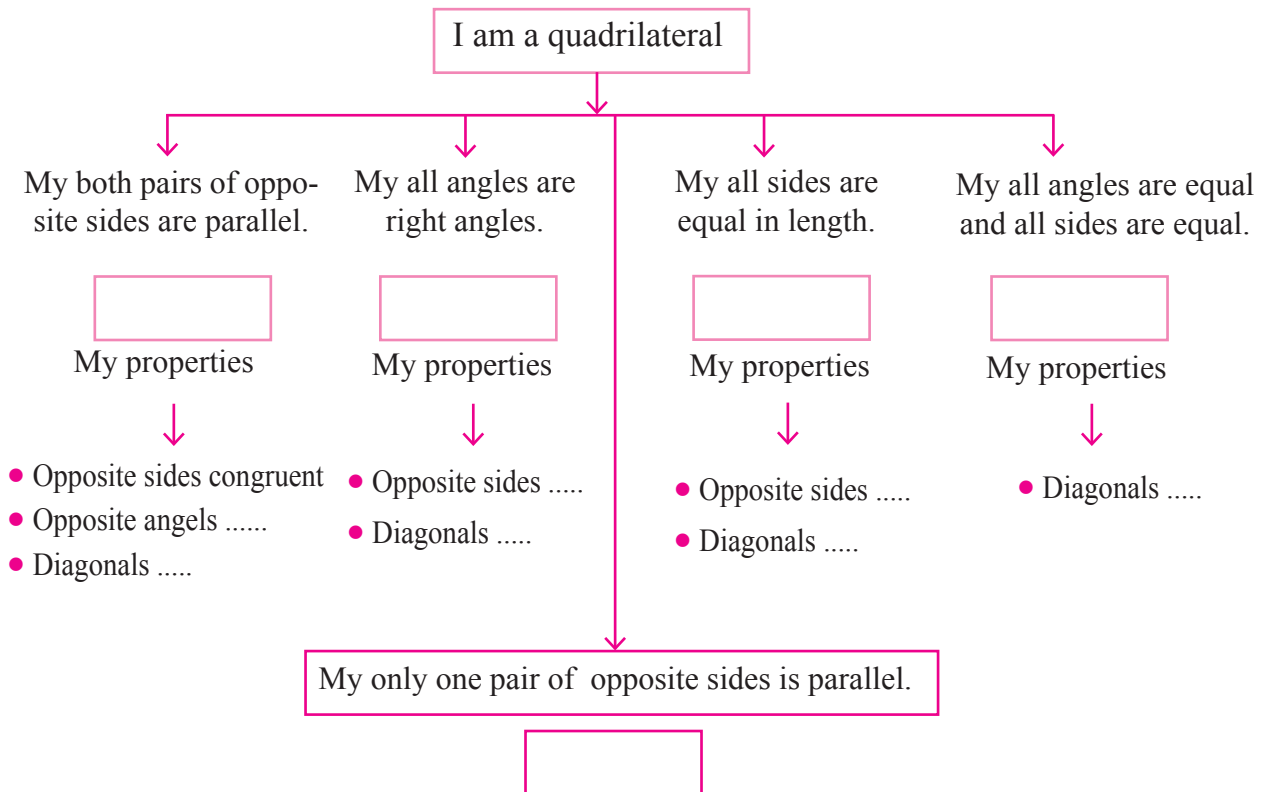
(1) ... , ... (2) ... , ... (1) ... , ... (2) ... , ...

(3) ... , ... (4) ... , ... (3) ... , ... (4) ... , ...

Pairs of opposite sides (1) , (2) ,

Pairs of opposite angles (1) , (2) ,

Let's recall types of quadrilaterals and their properties .



You know different types of quadrilaterals and their properties. You have learned them through different activities like measuring sides and angles, by paper folding method etc. Now we will study these properties by giving their logical proofs.

A property proved logically is called a proof.

In this chapter you will learn that how a rectangle, a rhombus and a square are parallelograms. Let us start our study from parallelogram.



Parallelogram

A quadrilateral having both pairs of opposite sides parallel is called a parallelogram.

For proving the theorems or for solving the problems we need to draw figure of a parallelogram frequently. Let us see how to draw a parallelogram.

Suppose we have to draw a parallelogram $\square ABCD$.

Method I :

- Let us draw seg AB and seg BC of any length and making an angle of any measure with each other.
- Now we want seg AD and seg BC parallel to each other. So draw a line parallel to seg BC through the point A.
- Similarly we will draw line parallel to AB through the point C. These lines will intersect in point D.




Fig. 5.2

So constructed quadrilateral ABCD will be a parallelogram.

Method II :

- Let us draw seg AB and seg BC of any length and making angle of any measure between them.
- Draw an arc with compass with centre A and radius BC.
- Similarly draw an arc with centre C and radius AB intersecting the arc previously drawn.
- Name the point of intersection of two arcs as D.




Fig. 5.3

Draw seg AD and seg CD.

Quadrilateral so formed is a parallelogram ABCD

Theorem 1. Opposite sides and opposite angles of a parallelogram are congruent.

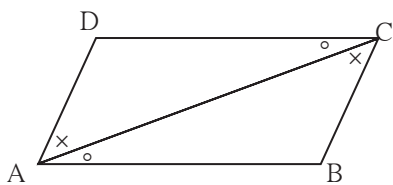


Fig. 5.7

Given : □ABCD is a parallelogram.

It means side AB \parallel side DC,
side AD \parallel side BC.

To prove : seg AD \cong seg BC ; seg DC \cong seg AB
 \angle ADC \cong \angle CBA, and \angle DAB \cong \angle BCD.

Construction : Draw diagonal AC.

Proof : seg DC \parallel seg AB and diagonal AC is a transversal.

$\therefore \angle$ DCA \cong \angle BAC(1)
and \angle DAC \cong \angle BCA(2) }..... alternate angles

Now , in \triangle ADC and \triangle CBA,

\angle DAC \cong \angle BCA from (2)
 \angle DCA \cong \angle BAC from (1)
seg AC \cong seg CA common side

$\therefore \triangle$ ADC \cong \triangle CBA ASA test

\therefore side AD \cong side CB c.s.c.t.

and side DC \cong side AB c.s.c.t.,

Also, \angle ADC \cong \angle CBA c.a.c.t.

Similarly we can prove \angle DAB \cong \angle BCD.



Use your brain power!

In the above theorem, to prove \angle DAB \cong \angle BCD, is any change in the construction needed ? If so, how will you write the proof making the change ?

To know one more property of a parallelogram let us do the following activity.

Activity : Draw a parallelogram PQRS. Draw diagonals PR and QS. Denote the intersection of diagonals by letter O. Compare the two parts of each diagonal with a divider. What do you find ?

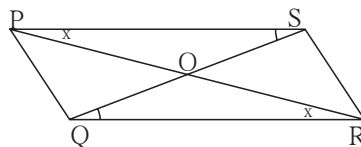


Fig. 5.8

Theorem : Diagonals of a parallelogram bisect each other.

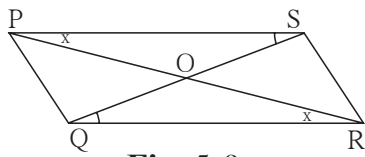


Fig. 5.9

Given : $\square PQRS$ is a parallelogram. Diagonals PR and QS intersect in point O.

To prove : $\text{seg } PO \cong \text{seg } RO$,
 $\text{seg } SO \cong \text{seg } QO$.

Proof : In $\triangle POS$ and $\triangle ROQ$

$\angle OPS \cong \angle ORQ$ alternate angles

side PS \cong side RQ opposite sides of parallelogram

$\angle PSO \cong \angle RQO$ alternate angles

$\therefore \triangle POS \cong \triangle ROQ$ ASA test

$\therefore \text{seg } PO \cong \text{seg } RO$

and $\text{seg } SO \cong \text{seg } QO$ } corresponding sides of congruent triangles



Remember this !

- Adjacent angles of a parallelogram are supplementary.
- Opposite sides of a parallelogram are congruent.
- Opposite angles of a parallelogram are congruent.
- Diagonals of a parallelogram bisect each other.

Solved Examples

Ex (1) $\square PQRS$ is a parallelogram. $PQ = 3.5$, $PS = 5.3$ $\angle Q = 50^\circ$ then find the lengths of remaining sides and measures of remaining angles.

Solution : $\square PQRS$ is a parallelogram.

$\therefore \angle Q + \angle P = 180^\circ$ interior angles are supplementary.

$\therefore 50^\circ + \angle P = 180^\circ$

$\therefore \angle P = 180^\circ - 50^\circ = 130^\circ$

Now , $\angle P = \angle R$ and $\angle Q = \angle S$ opposite angles of a parallelogram.

$\therefore \angle R = 130^\circ$ and $\angle S = 50^\circ$

Similarly, $PS = QR$ and $PQ = SR$ opposite sides of a parallelogram.

$\therefore QR = 5.3$ and $SR = 3.5$

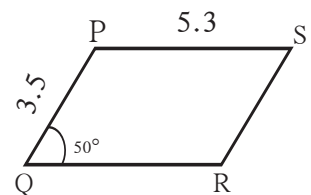


Fig. 5.10

Ex (2) $\square ABCD$ is a parallelogram. If $\angle A = (4x + 13)^\circ$ and $\angle D = (5x - 22)^\circ$ then find the measures of $\angle B$ and $\angle C$.

Solution : Adjacent angles of a parallelogram are supplementary.

$\angle A$ and $\angle D$ are adjacent angles.

$$\therefore (4x + 13)^\circ + (5x - 22)^\circ = 180$$

$$\therefore 9x - 9 = 180$$

$$\therefore 9x = 189$$

$$\therefore x = 21$$

$$\therefore \angle A = 4x + 13 = 4 \times 21 + 13 = 84 + 13 = 97^\circ$$

$$\angle D = 5x - 22 = 5 \times 21 - 22 = 105 - 22 = 83^\circ$$

$$\therefore \angle C = 97^\circ$$

$$\therefore \angle B = 83^\circ$$

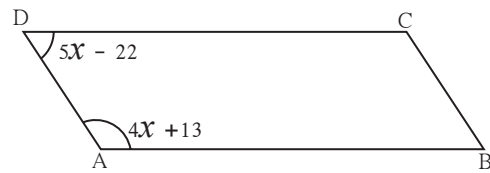


Fig. 5.11

Practice set 5.1

- Diagonals of a parallelogram WXYZ intersect each other at point O. If $\angle XYZ = 135^\circ$ then what is the measure of $\angle XWZ$ and $\angle YZW$?
If $l(OY) = 5$ cm then $l(WY) = ?$
- In a parallelogram ABCD, If $\angle A = (3x + 12)^\circ$, $\angle B = (2x - 32)^\circ$ then find the value of x and then find the measures of $\angle C$ and $\angle D$.
- Perimeter of a parallelogram is 150 cm. One of its sides is greater than the other side by 25 cm. Find the lengths of all sides.
- If the ratio of measures of two adjacent angles of a parallelogram is 1 : 2, find the measures of all angles of the parallelogram.
- * Diagonals of a parallelogram intersect each other at point O. If $AO = 5$, $BO = 12$ and $AB = 13$ then show that $\square ABCD$ is a rhombus.

- In the figure 5.12, $\square PQRS$ and $\square ABCR$ are two parallelograms.
If $\angle P = 110^\circ$ then find the measures of all angles of $\square ABCR$.

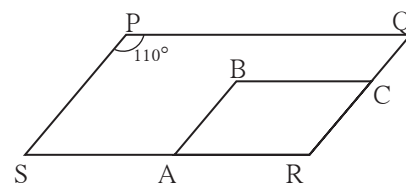


Fig. 5.12

- In figure 5.13 $\square ABCD$ is a parallelogram. Point E is on the ray AB such that $BE = AB$ then prove that line ED bisects seg BC at point F.

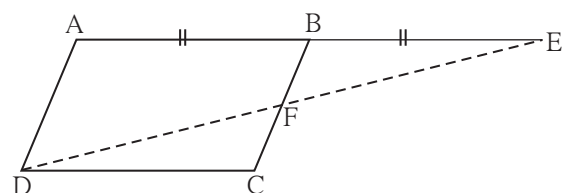


Fig. 5.13



Let's recall.

Tests for parallel lines

1. If a transversal intersects two lines and a pair of corresponding angles is congruent then those lines are parallel.
2. If a transversal intersects two lines and a pair of alternate angles is congruent then those two lines are parallel.
3. If a transversal intersects two lines and a pair of interior angles is supplementary then those two lines are parallel.



Let's learn.

Tests for parallelogram

Suppose, in $\square PQRS$, $PS = QR$ and $PQ = SR$ and we have to prove that $\square PQRS$ is a parallelogram. To prove it, which pairs of sides of $\square PQRS$ should be shown parallel ?

Which test can we use to show the sides parallel ? Which line will be convenient as a transversal to obtain the angles necessary to apply the test ?




Fig. 5.14

Theorem : If pairs of opposite sides of a quadrilateral are congruent then that quadrilateral is a parallelogram.

Given : In $\square PQRS$
 side $PS \cong$ side QR
 side $PQ \cong$ side SR

To prove : $\square PQRS$ is a parallelogram.

Construction : Draw diagonal PR .

Proof : In $\triangle SPR$ and $\triangle QRP$
 side $PS \cong$ side QR given
 side $SR \cong$ side QP given
 side $PR \cong$ side RP common side
 $\therefore \triangle SPR \cong \triangle QRP$ sss test
 $\therefore \angle SPR \cong \angle QRP$ c.a.c.t.
 Similarly, $\angle PRS \cong \angle RPQ$ c.a.c.t.
 $\angle SPR$ and $\angle QRP$ are alternate angles formed by the transversal PR of seg PS and seg QR .

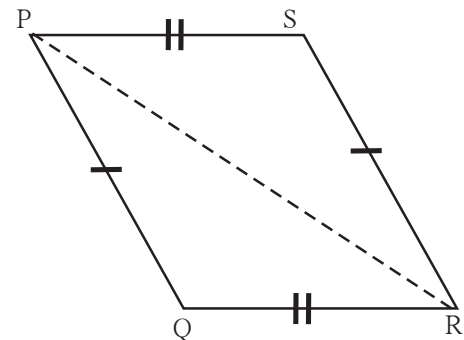


Fig. 5.15

Solved examples -

Ex (1) □PQRS is parallelogram. M is the midpoint of side PQ and N is the mid point of side RS. Prove that □PMNS and □MQRN are parallelograms.

Given : □ PQRS is a parallelogram.
M and N are the midpoints of side PQ and side RS respectively.

To prove : □PMNS is a parallelogram.
□MQRN is a parallelogram.

Proof : side PQ \parallel side SR
 \therefore side PM \parallel side SN (\because P-M-Q; S-N-R)(I)
 side PQ \cong side SR.
 $\therefore \frac{1}{2}$ side PQ = $\frac{1}{2}$ side SR
 \therefore side PM \cong side SN (\because M and N are midpoints.).....(II)
 \therefore From (I) and (II), □PMNQ is a parallelogram,
 Similarly, we can prove that □MQRN is parallelogram.

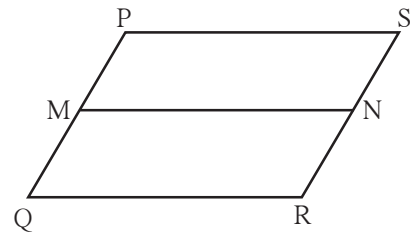


Fig. 5.19

Ex (2) Points D and E are the midpoints of side AB and side AC of Δ ABC respectively. Point F is on ray ED such that ED = DF. Prove that □AFBE is a parallelogram. For this example write ‘given’ and ‘to prove’ and complete the proof given below.

Given : -----
To prove : -----

Proof : seg AB and seg EF are of □AFBE.
 seg AD \cong seg DB.....
 seg \cong seg construction.
 \therefore Diagonals of □AFBE each other
 \therefore □AFBE is a parallelogram ...by test.

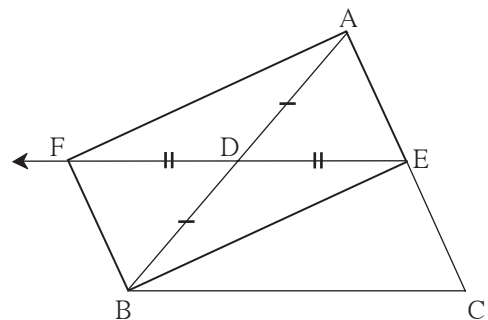


Fig. 5.20

Ex (3) Prove that every rhombus is a parallelogram.

Given : □ABCD is a rhombus.

To prove : □ABCD is parallelogram.

Proof : seg AB \cong seg BC \cong seg CD \cong seg DA (given)
 \therefore side AB \cong side CD and side BC \cong side AD
 \therefore □ABCD is a parallelogram..... opposite side test for parallelogram

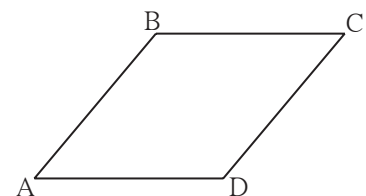


Fig. 5.21

Theorem : Diagonals of a rectangle are congruent.

Given : $\square ABCD$ is a rectangle.

To prove : Diagonal $AC \cong$ diagonal BD

Proof : Complete the proof by giving suitable reasons.

$\triangle ADC \cong \triangle DAB$ SAS test

\therefore diagonal $AC \cong$ diagonal BD c.s.c.t.

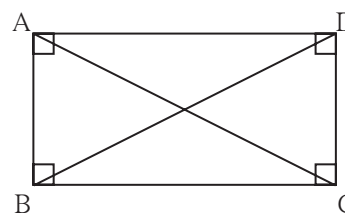


Fig. 5.26

Theorem : Diagonals of a square are congruent.

Write 'Given', 'To prove' and 'proof' of the theorem.

Theorem : Diagonals of a rhombus are perpendicular bisectors of each other.

Given : $\square EFGH$ is a rhombus

To prove : (i) Diagonal EG is the perpendicular bisector of diagonal HF .

(ii) Diagonal HF is the perpendicular bisector of diagonal EG .

Proof : (i) $\left. \begin{array}{l} \text{seg } EF \cong \text{seg } EH \\ \text{seg } GF \cong \text{seg } GH \end{array} \right\} \text{ given}$

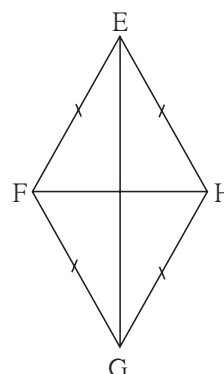


Fig. 5.27

Every point which is equidistant from end points of a segment is on the perpendicular bisector of the segment.

\therefore point E and point G are on the perpendicular bisector of seg HF .

One and only one line passes through two distinct points.

\therefore line EG is the perpendicular bisector of diagonal HF .

\therefore diagonal EG is the perpendicular bisector of diagonal HF .

(ii) Similarly, we can prove that diagonal HF is the perpendicular bisector of EG .

Write the proofs of the following statements.

- Diagonals of a square are perpendicular bisectors of each other.
- Diagonals of a rhombus bisect its opposite angles.
- Diagonals of a square bisect its opposite angles.



Remember this !

- Diagonals of a rectangle are congruent.
- Diagonals of a square are congruent.
- Diagonals of a rhombus are perpendicular bisectors of each other.
- Diagonals of a rhombus bisect the pairs of opposite angles.
- Diagonals of a square are perpendicular bisectors of each other.
- Diagonals of a square bisect opposite angles.

Solved examples

Ex (1) Measures of angles of $\square ABCD$ are in the ratio 4 : 5 : 7 : 8. Show that $\square ABCD$ is a trapezium.

Solution : Let measures of $\angle A$, $\angle B$, $\angle C$ and $\angle D$ are $(4x)^\circ$, $(5x)^\circ$, $(7x)^\circ$, and $(8x)^\circ$ respectively.

Sum of all angles of a quadrilateral is 360° .

$$\therefore 4x + 5x + 7x + 8x = 360$$

$$\therefore 24x = 360 \quad \therefore x = 15$$

$$\angle A = 4 \times 15 = 60^\circ, \quad \angle B = 5 \times 15 = 75^\circ, \quad \angle C = 7 \times 15 = 105^\circ,$$

$$\text{and } \angle D = 8 \times 15 = 120^\circ$$

$$\text{Now, } \angle B + \angle C = 75^\circ + 105^\circ = 180^\circ$$

$$\therefore \text{side } CD \parallel \text{side } BA \dots\dots (I)$$

$$\text{But } \angle B + \angle A = 75^\circ + 60^\circ = 135^\circ \neq 180^\circ$$

$$\therefore \text{side } BC \text{ and side } AD \text{ are not parallel } \dots\dots (II)$$

$$\therefore \square ABCD \text{ is a trapezium. } \dots\dots [\text{from (I) and (II)}]$$

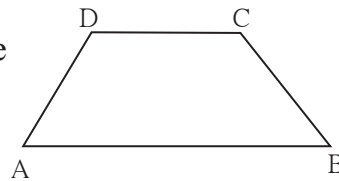


Fig. 5.30

Ex (2) In $\square PQRS$, side $PS \parallel$ side QR and side $PQ \cong$ side SR , side $QR >$ side PS then prove that $\angle PQR \cong \angle SRQ$

Given : In $\square PQRS$, side $PS \parallel$ side QR ,
side $PQ \cong$ side SR and side $QR >$ side PS .

To prove : $\angle PQR \cong \angle SRQ$

Construction : Draw the segment parallel to side PQ through the point S which intersects side QR in T .

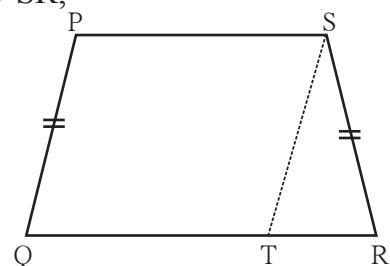


Fig. 5.31

Proof : In $\square PQRS$,

seg $PS \parallel$ seg QT given

seg $PQ \parallel$ seg ST construction

$\therefore \square PQTS$ is a parallelogram

$\therefore \angle PQT \cong \angle STR$ corresponding angles (I)

and seg $PQ \cong$ seg ST opposite sides of parallelogram

But seg $PQ \cong$ seg SR given

\therefore seg $ST \cong$ seg SR

$\therefore \angle STR \cong \angle SRT$isosceles triangle theorem (II)

$\therefore \angle PQT \cong \angle SRT$ [from (I) and (II)]

$\therefore \angle PQR \cong \angle SRQ$

Hence, it is proved that base angles of an isosceles trapezium are congruent.

$$PQ = \frac{1}{2} PR \quad \dots\dots \text{(construction)}$$

$$\therefore PQ = \frac{1}{2} BC \quad \because PR = BC$$

Converse of midpoint theorem

Theorem : If a line drawn through the midpoint of one side of a triangle and parallel to the other side then it bisects the third side.

For this theorem ‘Given’, ‘To prove’, ‘construction’ is given below. Try to write the proof.

Given : Point D is the midpoint of side AB of $\triangle ABC$. Line l passing through the point D and parallel to side BC intersects side AC in point E.

To prove : $AE = EC$

Construction : Draw a line parallel to seg AB passing through the point C. Name the point of intersection where this line and line l will intersect as F.

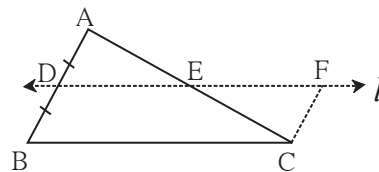


Fig. 5.35

Proof : Use the construction and line $l \parallel$ seg BC which is given. Prove $\triangle ADE \cong \triangle CFE$ and complete the proof.

Ex (1) Points E and F are mid points of seg AB and seg AC of $\triangle ABC$ respectively. If $EF = 5.6$ then find the length of BC.

Solution : In $\triangle ABC$, point E and F are midpoints of side AB and side AC respectively.

$$EF = \frac{1}{2} BC \quad \dots\dots\text{midpoint theorem}$$

$$5.6 = \frac{1}{2} BC \quad \therefore BC = 5.6 \times 2 = 11.2$$

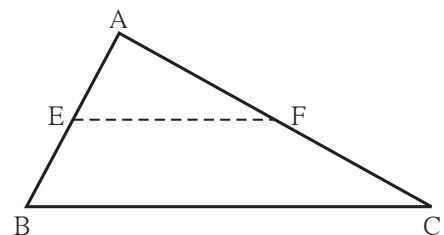


Fig. 5.36

Ex (2) Prove that the quadrilateral formed by joining the midpoints of sides of a quadrilateral in order is a parallelogram.

Given : $\square ABCD$ is a quadrilateral.
P, Q, R, S are midpoints of the sides AB, BC, CD and AD respectively.

To prove : $\square PQRS$ is a parallelogram.

Construction : Draw diagonal BD

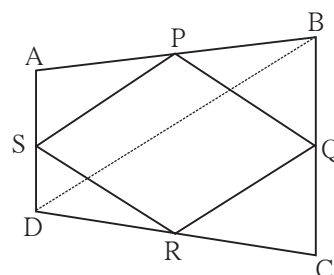


Fig. 5.37

Proof : In $\triangle ABD$, the midpoint of side AD is S and the midpoint of side AB is P.
 \therefore by midpoint theorem, $PS \parallel DB$ and $PS = \frac{1}{2} BD$ (1)
 In $\triangle DBC$ point Q and R are midpoints of side BC and side DC respectively.
 $\therefore QR \parallel BD$ and $QR = \frac{1}{2} BD$ by midpoint theorem (2)
 $\therefore PS \parallel QR$ and $PS = QR$ from (1) and (2)
 $\therefore \square PQRS$ is a parallelogram.

Practice set 5.5

1. In figure 5.38, points X, Y, Z are the midpoints of side AB, side BC and side AC of $\triangle ABC$ respectively. $AB = 5$ cm, $AC = 9$ cm and $BC = 11$ cm. Find the length of XY, YZ, XZ.

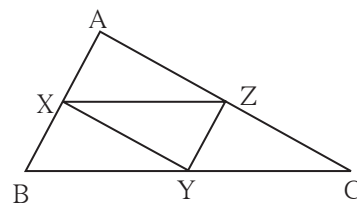


Fig. 5.38

2. In figure 5.39, $\square PQRS$ and $\square MNRL$ are rectangles. If point M is the midpoint of side PR then prove that, (i) $SL = LR$, (ii) $LN = \frac{1}{2} SQ$.

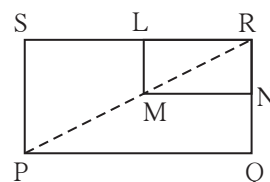


Fig. 5.39

3. In figure 5.40, $\triangle ABC$ is an equilateral triangle. Points F, D and E are midpoints of side AB, side BC, side AC respectively. Show that $\triangle FED$ is an equilateral triangle.

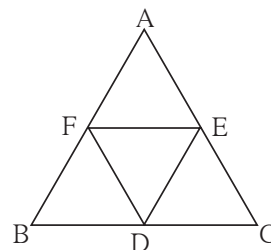


Fig. 5.40

4. In figure 5.41, seg PD is a median of $\triangle PQR$. Point T is the mid point of seg PD. Produced QT intersects PR at M. Show that $\frac{PM}{PR} = \frac{1}{3}$.
 [Hint : draw $DN \parallel QM$.]

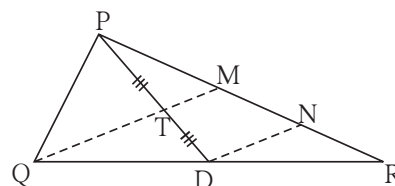


Fig. 5.41

Problem set 5

1. Choose the correct alternative answer and fill in the blanks.
 (i) If all pairs of adjacent sides of a quadrilateral are congruent then it is called
 (A) rectangle (B) parallelogram (C) trapezium, (D) rhombus

- (ii) If the diagonal of a square is $12\sqrt{2}$ cm then the perimeter of square is
- (A) 24 cm (B) $24\sqrt{2}$ cm (C) 48 cm (D) $48\sqrt{2}$ cm
- (iii) If opposite angles of a rhombus are $(2x)^\circ$ and $(3x - 40)^\circ$ then value of x is ...
- (A) 100° (B) 80° (C) 160° (D) 40°

- Adjacent sides of a rectangle are 7 cm and 24 cm. Find the length of its diagonal.
- If diagonal of a square is 13 cm then find its side.
- Ratio of two adjacent sides of a parallelogram is 3:4, and its perimeter is 112 cm. Find the length of its each side.
- Diagonals PR and QS of a rhombus PQRS are 20 cm and 48 cm respectively. Find the length of side PQ.
- Diagonals of a rectangle PQRS are intersecting in point M. If $\angle QMR = 50^\circ$ then find the measure of $\angle MPS$.
- In the adjacent Figure 5.42, if

seg AB \parallel seg PQ, seg AB \cong seg PQ,
 seg AC \parallel seg PR, seg AC \cong seg PR
 then prove that,
 seg BC \parallel seg QR and seg BC \cong seg QR.

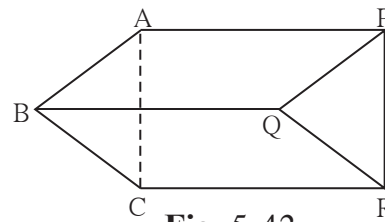


Fig. 5.42

- In the Figure 5.43, $\square ABCD$ is a trapezium. AB \parallel DC. Points P and Q are midpoints of seg AD and seg BC respectively. Then prove that, PQ \parallel AB and

$$PQ = \frac{1}{2}(AB + DC).$$

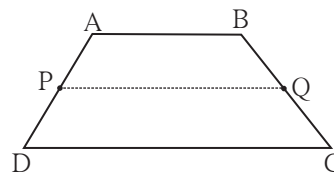


Fig. 5.43

- In the adjacent figure 5.44, $\square ABCD$ is a trapezium. AB \parallel DC. Points M and N are midpoints of diagonal AC and DB respectively then prove that MN \parallel AB.

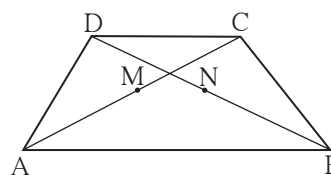


Fig. 5.44

Activity

To verify the different properties of quadrilaterals

Material : A piece of plywood measuring about 15 cm × 10 cm, 15 thin screws, twine, scissors.

Note : On the plywood sheet, fix five screws in a horizontal row keeping a distance of 2cm between any two adjacent screws. Similarly make two more rows of screws exactly below the first one. Take care that the vertical distance between any two adjacent screws is also 2cm.

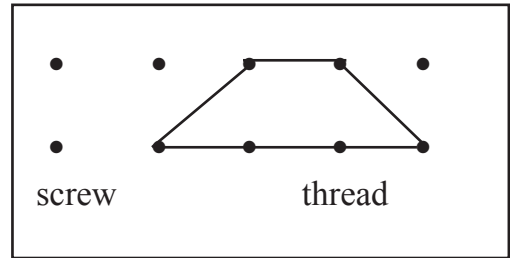


Fig. 5.45

With the help of the screws, make different types of quadrilaterals of twine. Verify the properties of sides and angles of the quadrilaterals.

Additional information

You know the property that the point of concurrence of medians of a triangle divides the medians in the ratio 2 : 1. Proof of this property is given below.

Given : seg AD and seg BE are the medians of ΔABC which intersect at point G.

To prove: $AG : GD = 2 : 1$

Construction : Take point F on ray AD such that G-D-F and $GD = DF$

Proof : Diagonals of $\square BGCF$ bisect each other
..... given and construction

$\therefore \square BGCF$ is a parallelogram.

$\therefore \text{seg } BE \parallel \text{seg } FC$

Now point E is the midpoint of side AC of ΔAFC given

$\text{seg } EB \parallel \text{seg } FC$

Line passing through midpoint of one side and parallel to the other side bisects the third side.

\therefore point G is the midpoint of side AF.

$\therefore AG = GF$

But $GF = 2GD$ construction

$\therefore AG = 2GD$

$\therefore \frac{AG}{GD} = \frac{2}{1}$ i.e. $AG : GD = 2 : 1$

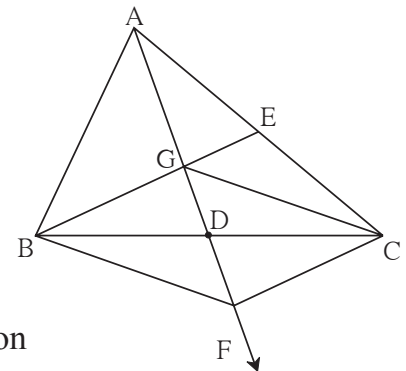


Fig. 5.46



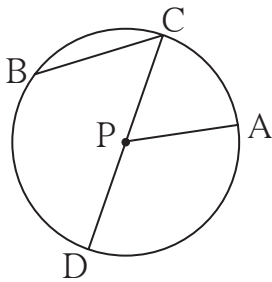


Let's study.

- Circle
- Incircle
- Property of chord of the circle
- Circumcircle



Let's recall.



In adjoining figure, observe the circle with center P. With reference to this figure, complete the following table.

---	seg PA	---	---	---	---	$\angle CPA$
chord	---	diameter	radius	centre	central angle	---

Fig. 6.1



Let's learn.

Circle

Let us describe this circle in terms of a set of points.

- The set of points in a plane which are equidistant from a fixed point in the plane is called a circle.

Some terms related with a circle.

- The fixed point is called the centre of the circle.
- The segment joining the centre of the circle and a point on the circle is called a radius of the circle.
- The distance of a point on the circle from the centre of the circle is also called the radius of the circle.
- The segment joining any two points of the circle is called a chord of the circle.
- A chord passing through the centre of a circle is called a diameter of the circle.

A diameter is a largest chord of the circle.

Circles in a plane

<p style="text-align: center;">Congruent circles</p> <ul style="list-style-type: none"> • the same radii 	<p style="text-align: center;">Concentric circles</p> <ul style="list-style-type: none"> • the same centre, different radii 	<p style="text-align: center;">Circles intersecting in a point</p> <ul style="list-style-type: none"> • different centres, different radii, only one common point 	<p style="text-align: center;">Circles intersecting in two points</p> <ul style="list-style-type: none"> • different centres, different radii, two common points
---	--	--	---

Fig. 6.2



Let's learn.

Properties of chord

Activity I : Every student in the group will do this activity. Draw a circle in your notebook. Draw any chord of that circle. Draw perpendicular to the chord through the centre of the circle. Measure the lengths of the two parts of the chord. Group leader will prepare a table and other students will write their observations in it.

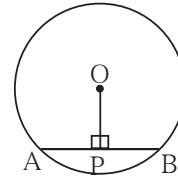


Fig. 6.3

Student Length	1	2	3	4	5	6
l (AP) cm					
l (PB) cm					

Write the property which you have observed.

Let us write the proof of this property.

Theorem : A perpendicular drawn from the centre of a circle on its chord bisects the chord.

Given : seg AB is a chord of a circle with centre O.

seg OP \perp chord AB

To prove : seg AP \cong seg BP

Proof : Draw seg OA and seg OB

In Δ OPA and Δ OPB

\angle OPA \cong \angle OPB seg OP \perp chord AB

seg OP \cong seg OP common side

hypotenuse OA \cong hypotenuse OB radii of the same circle

$\therefore \Delta$ OPA \cong Δ OPB hypotenuse side theorem

seg PA \cong seg PB c.s.c.t.

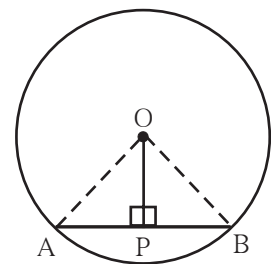


Fig. 6.4

Activity II : Every student from the group will do this activity. Draw a circle in your notebook. Draw a chord of the circle. Join the midpoint of the chord and centre of the circle. Measure the angles made by the segment with the chord. Discuss about the measures of the angles with your friends.

Which property do the observations suggest ?

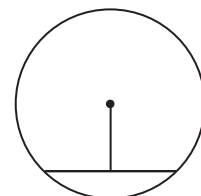


Fig. 6.5

Theorem : The segment joining the centre of a circle and the midpoint of its chord is perpendicular to the chord.

Given : seg AB is a chord of a circle with centre O and P is the midpoint of chord AB of the circle. That means seg AP \cong seg PB.

To prove : seg OP \perp chord AB

Proof : Draw seg OA and seg OB.

In $\triangle AOP$ and $\triangle BOP$

seg OA \cong seg OB radii of the same circle

seg OP \cong seg OP common sides

seg AP \cong seg BP given

$\therefore \triangle AOP \cong \triangle BOP$ SSS test

$\therefore \angle OPA \cong \angle OPB$ c.a.c.t. . . .(I)

Now $\angle OPA + \angle OPB = 180^\circ$. . . angles in linear pair

$\therefore \angle OPB + \angle OPB = 180^\circ$ from (I)

$\therefore 2 \angle OPB = 180^\circ$

$\therefore \angle OPB = 90^\circ$

\therefore seg OP \perp chord AB

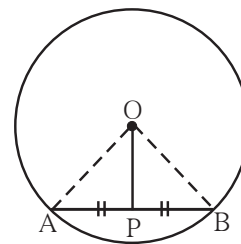


Fig. 6.6

Solved examples

Ex (1) Radius of a circle is 5 cm. The length of a chord of the circle is 8 cm. Find the distance of the chord from the centre.

Solution :

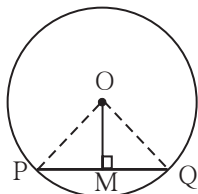


Fig. 6.7

Let us draw a figure from the given information.

O is the centre of the circle.

Length of the chord is 8 cm.

seg OM \perp chord PQ.

We know that a perpendicular drawn from the centre of a circle on its chord bisects the chord.

\therefore PM = MQ = 4 cm

Radius of the circle is 5 cm, means OQ = 5 cm given

In the right angled $\triangle OMQ$ using Pythagoras' theorem,

$$OM^2 + MQ^2 = OQ^2$$

$$\therefore OM^2 + 4^2 = 5^2$$

$$\therefore OM^2 = 5^2 - 4^2 = 25 - 16 = 9 = 3^2$$

$$\therefore OM = 3$$

Hence distance of the chord from the centre of the circle is 3 cm.

Ex (2) Radius of a circle is 20 cm. Distance of a chord from the centre of the circle is 12 cm. Find the length of the chord.

Solution : Let the centre of the circle be O. Radius = OD = 20 cm.

Distance of the chord CD from O is 12 cm. $\text{seg } OP \perp \text{seg } CD$

$\therefore OP = 12 \text{ cm}$

Now $CP = PD$ perpendicular drawn from the centre bisects the chord

In the right angled $\triangle OPD$, using Pythagoras' theorem

$$OP^2 + PD^2 = OD^2$$

$$(12)^2 + PD^2 = 20^2$$

$$PD^2 = 20^2 - 12^2$$

$$PD^2 = (20+12)(20-12)$$

$$= 32 \times 8 = 256$$

$$\therefore PD = 16 \quad \therefore CP = 16$$

$$CD = CP + PD = 16 + 16 = 32$$

\therefore the length of the chord is 32 cm.

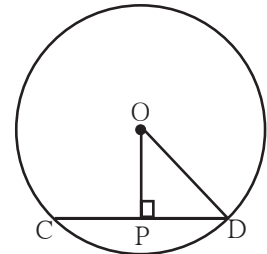


Fig. 6.8

Practice set 6.1

- Distance of chord AB from the centre of a circle is 8 cm. Length of the chord AB is 12 cm. Find the diameter of the circle.
- Diameter of a circle is 26 cm and length of a chord of the circle is 24 cm. Find the distance of the chord from the centre.
- Radius of a circle is 34 cm and the distance of the chord from the centre is 30 cm, find the length of the chord.
- Radius of a circle with centre O is 41 units. Length of a chord PQ is 80 units, find the distance of the chord from the centre of the circle.
- In figure 6.9, centre of two circles is O. Chord AB of bigger circle intersects the smaller circle in points P and Q. Show that $AP = BQ$
- Prove that, if a diameter of a circle bisects two chords of the circle then those two chords are parallel to each other.

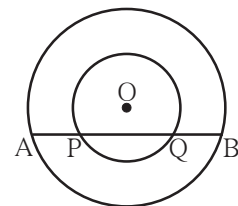


Fig. 6.9

Activity I

- Draw circles of convenient radii.
- Draw two equal chords in each circle.
- Draw perpendicular to each chord from the centre.
- Measure the distance of each chord from the centre.



Let's learn.

Relation between congruent chords of a circle and their distances from the centre

Activity II : Measure the lengths of the perpendiculars on chords in the following figures.

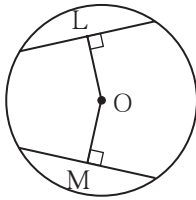


Figure (i)

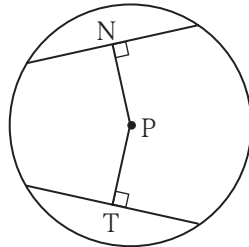


Figure (ii)

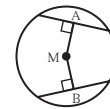


Figure (iii)

Did you find $OL = OM$ in fig (i), $PN = PT$ in fig (ii) and $MA = MB$ in fig (iii) ?
Write the property which you have noticed from this activity.



Let's learn.

Properties of congruent chords

Theorem : Congruent chords of a circle are equidistant from the centre of the circle.

Given : In a circle with centre O

chord $AB \cong$ chord CD

$OP \perp AB, OQ \perp CD$

To prove : $OP = OQ$

Construction : Join seg OA and seg OD.

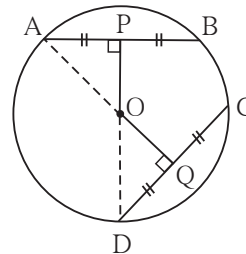


Fig. 6.10

Proof : $AP = \frac{1}{2} AB, DQ = \frac{1}{2} CD \dots$ perpendicular drawn from the centre of a circle to its chord bisects the chord.

$AB = CD \dots \dots \dots$ given

$\therefore AP = DQ$

$\therefore \text{seg } AP \cong \text{seg } DQ \dots \dots \dots$ (I) \dots segments of equal lengths

In right angled ΔAPO and right angled ΔDQO

$\text{seg } AP \cong \text{seg } DQ \dots \dots \dots$ from (I)

hypotenuse $OA \cong$ hypotenuse $OD \dots \dots \dots$ radii of the same circle

$\therefore \Delta APO \cong \Delta DQO \dots \dots \dots$ hypotenuse side theorem

$\text{seg } OP \cong \text{seg } OQ \dots \dots \dots$ c.s.c.t.

$\therefore OP = OQ \dots \dots \dots$ Length of congruent segments.

Congruent chords in a circle are equidistant from the centre of the circle.

Theorem : The chords of a circle equidistant from the centre of a circle are congruent.

Given : In a circle with centre O
 seg OP \perp chord AB
 seg OQ \perp chord CD
 and OP = OQ

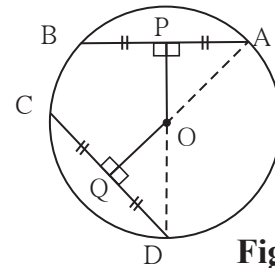


Fig. 6.11

To prove : chord AB \cong chord CD

Construction : Draw seg OA and seg OD.

Proof : (Complete the proof by filling in the gaps.)

In right angled Δ OPA and right Δ OQD

hypotenuse OA \cong hypotenuse OD

seg OP \cong seg OQ given

$\therefore \Delta$ OPA \cong Δ OQD

\therefore seg AP \cong seg QD c.s.c.t.

\therefore AP = QD (I)

But AP = $\frac{1}{2}$ AB, and DQ = $\frac{1}{2}$ CD

and AP = QD from (I)

\therefore AB = CD

\therefore seg AB \cong seg CD

Note that both the theorems are converses of each other.



Remember this !

Congruent chords of a circle are equidistant from the centre of the circle.
 The chords equidistant from the centre of a circle are congruent.

Activity : The above two theorems can be proved for two congruent circles also.

1. Congruent chords in congruent circles are equidistant from their respective centres.
2. Chords of congruent circles which are equidistant from their respective centres are congruent.

Write 'Given', 'To prove' and the proofs of these theorems.

Solved example

Ex. In the figure 6.12, O is the centre of the circle and AB = CD. If OP = 4 cm, find the length of OQ.

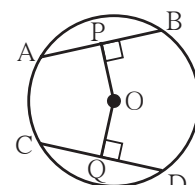


Fig. 6.12

Solution : O is the centre of the circle,

chord AB \cong chord CDgiven

OP \perp AB, OQ \perp CD

$OP = 4$ cm, means distance of AB from the centre O is 4 cm.

The congruent chords of a circle are equidistant from the centre of the circle.

$\therefore OQ = 4$ cm

Practice set 6.2

1. Radius of circle is 10 cm. There are two chords of length 16 cm each. What will be the distance of these chords from the centre of the circle ?
2. In a circle with radius 13 cm, two equal chords are at a distance of 5 cm from the centre. Find the lengths of the chords.
3. Seg PM and seg PN are congruent chords of a circle with centre C. Show that the ray PC is the bisector of $\angle NPM$.



Let's recall.

In previous standard we have verified the property that the angle bisectors of a triangle are concurrent. We denote the point of concurrence by letter I.



Let's learn.

Incircle of a triangle

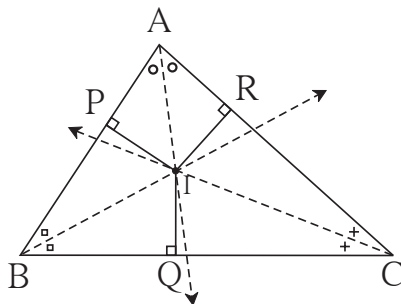


Fig. 6.13

In fig. 6.13, bisectors of all angles of a $\triangle ABC$ meet in the point I. Perpendiculars on three sides are drawn from the point of concurrence.

$$IP \perp AB, \quad IQ \perp BC, \quad IR \perp AC$$

We know that, every point on the angle bisector is equidistant from the sides of the angle.

Point I is on the bisector of $\angle B$. $\therefore IP = IQ$.

Point I is on the bisector of $\angle C$ $\therefore IQ = IR$

$$\therefore IP = IQ = IR$$

That is point I is equidistant from all the sides of $\triangle ABC$.

\therefore if we draw a circle with centre I and radius IP, it will touch the sides AB, AC, BC of $\triangle ABC$ internally.

This circle is called the Incircle of the triangle ABC.



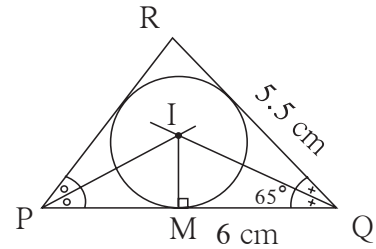
Let's learn.

To construct the incircle of a triangle

Ex. Construct ΔPQR such that $PQ = 6$ cm, $\angle Q = 35^\circ$, $QR = 5.5$ cm. Draw incircle of ΔPQR .

Draw a rough figure and show all measures in it.

- (1) Construct ΔPQR of given measures.
- (2) Draw bisectors of any two angles of the triangle.
- (3) Denote the point of intersection of angle bisectors as I.
- (4) Draw perpendicular IM from the point I to the side PQ.
- (5) Draw a circle with centre I and radius IM.



Rough fig. 6.14

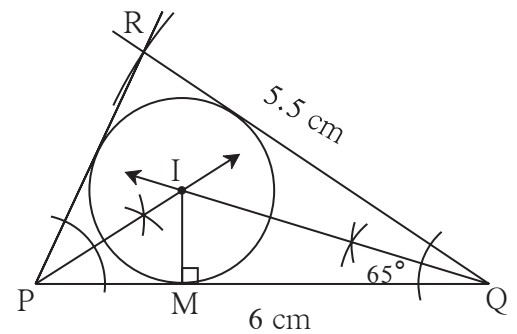


Fig. 6.15



Remember this !

The circle which touches all the sides of a triangle is called incircle of the triangle and the centre of the circle is called the incentre of the triangle.



Let's recall.

In previous standards we have verified the property that perpendicular bisectors of sides of a triangle are concurrent. That point of concurrence is denoted by the letter C.



Let's learn.

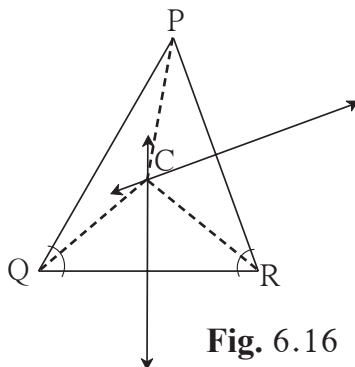


Fig. 6.16

In fig. 6.16, the perpendicular bisectors of sides of ΔPQR are intersecting at point C. So C is the point of concurrence of perpendicular bisectors.

Circumcircle

Point C is on the perpendicular bisectors of the sides of triangle PQR. Join PC, QC and RC. We know that, every point on the perpendicular bisector is equidistant from the end points of the segment.

Point C is on the perpendicular bisector of seg PQ. $\therefore PC = QC \dots\dots I$

Point C is on the perpendicular bisector of seg QR. $\therefore QC = RC \dots\dots II$

$\therefore PC = QC = RC \dots\dots$ From I and II

\therefore the circle with centre C and radius PC will pass through all the vertices of ΔPQR . This circle is called as the circumcircle.



Remember this !

Circle passing through all the vertices of a triangle is called circumcircle of the triangle and the centre of the circle is called the circumcentre of the triangle.



Let's learn.

To draw the circumcircle of a triangle

Ex. Construct ΔDEF such that $DE = 4.2$ cm, $\angle D = 60^\circ$, $\angle E = 70^\circ$ and draw circumcircle of it. Draw rough figure. Write the given measures.

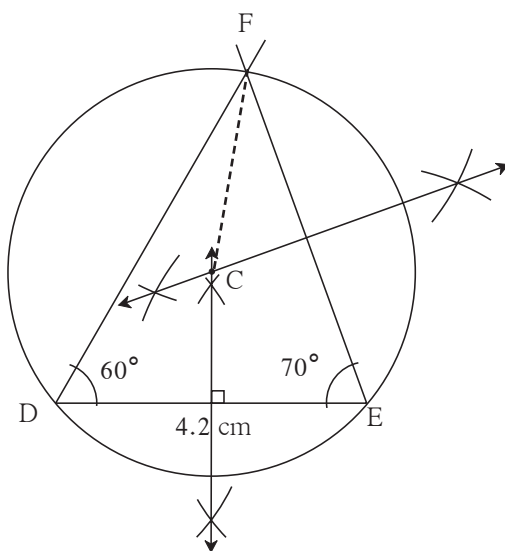


Fig. 6.18

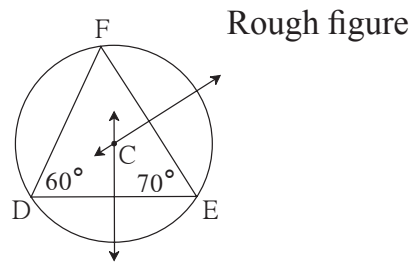


Fig. 6.17

Steps of construction :

- (1) Draw ΔDEF of given measures.
- (2) Draw perpendicular bisectors of any two sides of the triangle.
- (3) Name the point of intersection of perpendicular bisectors as C.
- (4) Join seg CF.
- (5) Draw circle with centre C and radius CF.



Remember this !

- The perpendicular bisectors and angle bisectors of an equilateral triangle are coincident.
- The incentre and the circumcentre of an equilateral triangle are coincident.
- Ratio of radius of circumcircle to the radius of incircle of an equilateral triangle is 2 : 1

Practice set 6.3

1. Construct ΔABC such that $\angle B = 100^\circ$, $BC = 6.4$ cm, $\angle C = 50^\circ$ and construct its incircle.
2. Construct ΔPQR such that $\angle P = 70^\circ$, $\angle R = 50^\circ$, $QR = 7.3$ cm. and construct its circumcircle.
3. Construct ΔXYZ such that $XY = 6.7$ cm, $YZ = 5.8$ cm, $XZ = 6.9$ cm. Construct its incircle.
4. In ΔLMN , $LM = 7.2$ cm, $\angle M = 105^\circ$, $MN = 6.4$ cm, then draw ΔLMN and construct its circumcircle.
5. Construct ΔDEF such that $DE = EF = 6$ cm, $\angle F = 45^\circ$ and construct its circumcircle.

Problem set 6

1. Choose correct alternative answer and fill in the blanks.
 - (i) Radius of a circle is 10 cm and distance of a chord from the centre is 6 cm. Hence the length of the chord is
(A) 16 cm (B) 8 cm (C) 12 cm (D) 32 cm
 - (ii) The point of concurrence of all angle bisectors of a triangle is called the
(A) centroid (B) circumcentre (C) incentre (D) orthocentre
 - (iii) The circle which passes through all the vertices of a triangle is called
(A) circumcircle (B) incircle (C) congruent circle (D) concentric circle
 - (iv) Length of a chord of a circle is 24 cm. If distance of the chord from the centre is 5 cm, then the radius of that circle is
(A) 12 cm (B) 13 cm (C) 14 cm (D) 15 cm
 - (v) The length of the longest chord of the circle with radius 2.9 cm is
(A) 3.5 cm (B) 7 cm (C) 10 cm (D) 5.8 cm
 - (vi) Radius of a circle with centre O is 4 cm. If $l(OP) = 4.2$ cm, say where point P will lie.
(A) on the centre (B) Inside the circle (C) outside the circle (D) on the circle
 - (vii) The lengths of parallel chords which are on opposite sides of the centre of a circle are 6 cm and 8 cm. If radius of the circle is 5 cm, then the distance between these chords is
(A) 2 cm (B) 1 cm (C) 8 cm (D) 7 cm

- Construct incircle and circumcircle of an equilateral $\triangle DSP$ with side 7.5 cm. Measure the radii of both the circles and find the ratio of radius of circumcircle to the radius of incircle.
- Construct $\triangle NTS$ where $NT = 5.7$ cm, $TS = 7.5$ cm and $\angle NTS = 110^\circ$ and draw incircle and circumcircle of it.

- In the figure 6.19, C is the centre of the circle.
seg QT is a diameter
 $CT = 13$, $CP = 5$, find the length of chord RS .

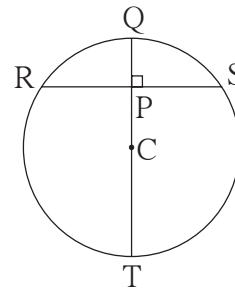


Fig. 6.19

- In the figure 6.20, P is the centre of the circle.
Chord AB and chord CD intersect on the diameter at the point E .
If $\angle AEP \cong \angle DEP$
then prove that $AB = CD$.

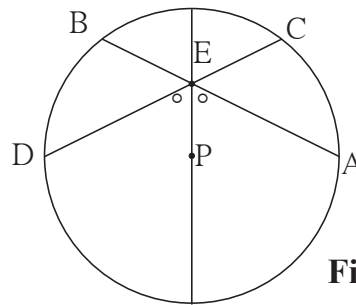


Fig. 6.20

- In the figure 6.21, CD is a diameter of the circle with centre O . Diameter CD is perpendicular to chord AB at point E . Show that $\triangle ABC$ is an isosceles triangle.

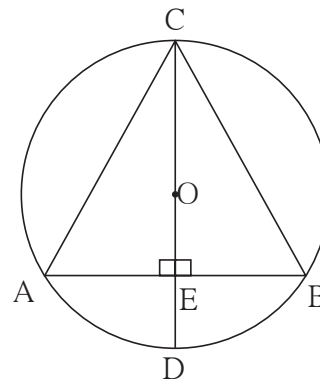


Fig. 6.21




ICT Tools or Links

Draw different circles with Geogebra software. Verify and experience the properties of chords. Draw circumcircle and incircle of different triangles. Using 'Move Option' experience how the incentre and circumcentre changes if the size of a triangle is changed.



Rene Descartes (1596-1650)

Rene Descartes, a French mathematician of the 17th Century, proposed the co-ordinate system to describe the position of a point in a plane accurately. It is called the Cartesian co-ordinate system. Obviously the word Cartesian is derived from his name. He brought about a revolution in the field of mathematics by establishing the relationship between Algebra and Geometry.



The Cartesian co-ordinate system is the foundation of Analytical Geometry. La Geometric was Descartes' first book on mathematics. In it, he used algebra for the study of geometry and proposed that a point in a plane can be represented by an ordered pair of real numbers. This ordered pair is the 'Cartesian Co-ordinates' of a point.

Co-ordinate geometry has used in a variety of fields such as Physics, Engineering, Nautical Science, Siesmology and Art. It plays an important role in the development of technology in Geogebra. We see the inter-relationship between Algebra and Geometry quite clearly in the software Geogebra; the very name being a combination of the words 'Geometry' and 'Algebra'.

Another number line intersecting the X-axis at point marked O and perpendicular to the X-axis, is the Y-axis. Generally, the number 0 is represented by the same point on both the number lines. This point is called the origin and is shown by the letter O.

On the X-axis, positive numbers are shown on the right of O and negative numbers on the left.

On the Y-axis, positive numbers are shown above O and negative numbers below it.

The X and Y axes divide the plane into four parts, each of which is called a **Quadrant**. As shown in the figure, the quadrants are numbered in the anti-clockwise direction.

The points on the axes are not included in the quadrants.

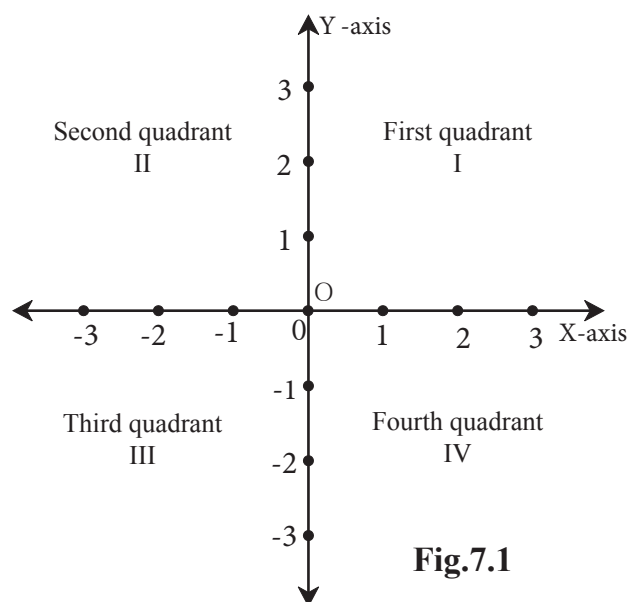


Fig.7.1

The Co-ordinates of a point in a plane

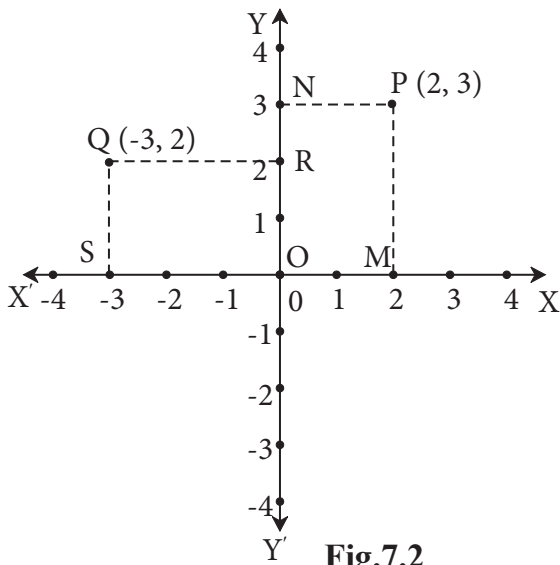


Fig.7.2

The point P is shown in the plane determined by the X-axis and the Y-axis. Its position can be determined by its distance from the two axes. To find these distances, we draw seg $PM \perp X$ -axis and seg $PN \perp Y$ -axis.

Co-ordinate of point M on X-axis is 2 and co-ordinate of point N on Y-axis is 3.

Therefore x co-ordinate of point P is 2 and y co-ordinate of point P is 3.

The convention for describing the position of a point is to mention

x co-ordinate first. According to this convention the order of co-ordinates of point P is decided as 2, 3. The position of the point P in brief, is described by the pair (2, 3)

The order of the numbers in the pair (2, 3) is important. Such a pair of numbers is called an ordered pair.

To describe the position of point Q, we draw seg $QS \perp X$ -axis and seg $QR \perp Y$ -axis. The co-ordinate of point Q on the X-axis is -3 and the co-ordinate on the Y-axis is 2. Hence the co-ordinates of point Q are $(-3, 2)$.

Ex. Write the co-ordinates of points E, F, G, T in the figure alongside.

Solution :

- The co-ordinates of point E are (2, 1)
- The co-ordinates of point F are $(-3, 3)$
- The co-ordinates of point G are $(-4, -2)$.
- The co-ordinates of point T are $(3, -1)$

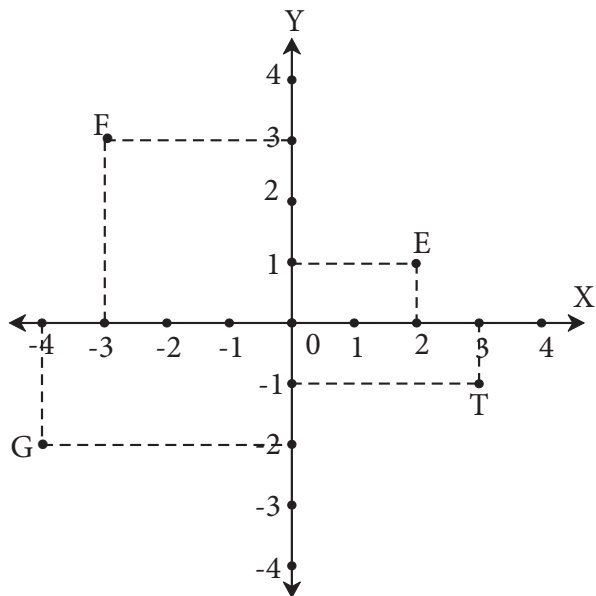


Fig.7.3



Let's learn.

Co-ordinates of points on the axes

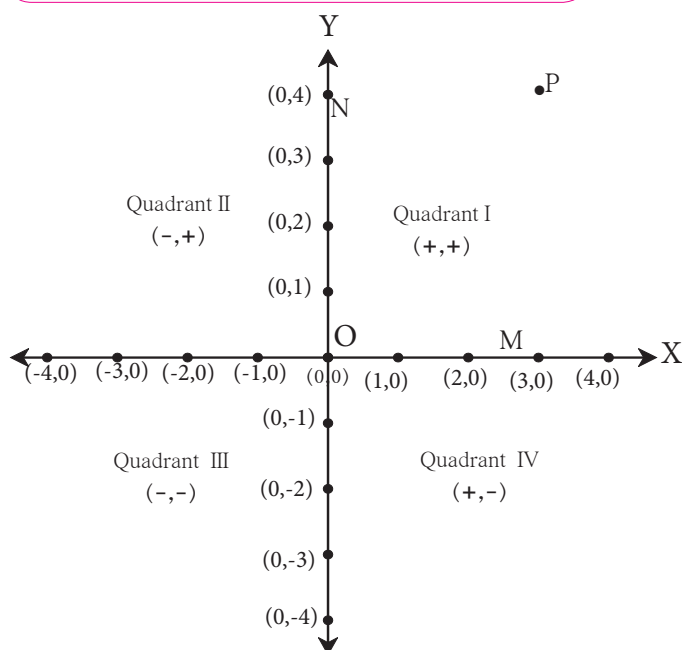


Fig.7.4

The x co-ordinate of point M is its distance from the Y-axis. The distance of point M from the X-axis is zero. Hence, the y co-ordinate of M is 0.

Thus, the co-ordinates of point M on the X-axis are (3,0).

The y co-ordinate of point N on the Y-axis is 4 units from the X-axis because N is at a distance of 4. Its x co-ordinate is 0 because its distance from the Y-axis is zero.

Hence, the co-ordinates of point N on the Y-axis are (0, 4).

Now the origin 'O' is on X-axis as well as on Y-axis. Hence, its distance from X-axis and Y-axis is zero. Therefore, the co-ordinates of O are (0, 0).

One and only one pair of co-ordinates (ordered pair) is associated with every point in a plane.



Let's Remember

- The y co-ordinate of every point on the X-axis is zero.
- The x co-ordinate of every point on the Y-axis is zero.
- The coordinates of the origin are (0, 0).

Ex. In which quadrant or on which axis are the points given below ?

A(5,7), B(-6,4), C(4,-7), D(-8,-9), P(-3,0), Q(0,8)

Solution : The x co-ordinate of A (5, 7) is positive and its y co-ordinate is positive..

∴ point A is in the first quadrant.

The x co-ordinate of B (-6, 4) is negative and y co-ordinate is positive.

∴ point B is in the second quadrant.

The x co-ordinate of C (4, -7) is positive and y co-ordinate is negative.

∴ point C is in the fourth quadrant.

The x co-ordinate of D (-8, -7) is negative and y co-ordinate is negative.

∴ point D is in the third quadrant.

The y co-ordinate of $P(-3,0)$ is zero \therefore point P is on the X -axis.

The x co-ordinate of $Q(0,8)$ is zero \therefore point Q is on the Y -axis.

Activity As shown in fig. 7.5, ask girls to sit in lines so as to form the X -axis and Y -axis.

- Ask some boys to sit at the positions marked by the coloured dots in the four quadrants.
- Now, call the students turn by turn using the initial letter of each student's name. As his or her initial is called, the student stands and gives his or her own co-ordinates. For example Rajendra (2, 2) and Kirti (-1, 0)
- Even as they have fun during this field activity, the students will learn how to state the position of a point in a plane.

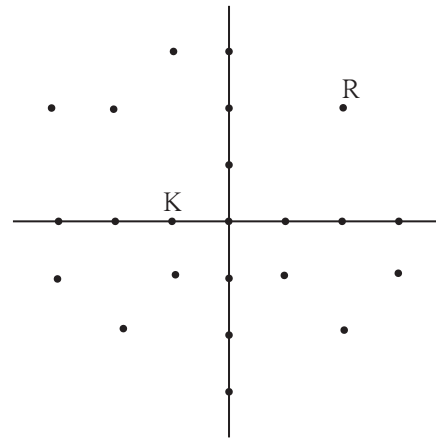


Fig. 7.5



Let's learn.

To plot the points of given co-ordinates

Suppose we have to plot the points $P(4,3)$ and $Q(-2,2)$

Steps for plotting the points

- Draw X -axis and Y -axis on the plane. Show the origin.
- To find the point $P(4,3)$, draw a line parallel to the Y -axis through the point on X axis which represents the number 4.

Through the point on Y -axis which represents the number 3 draw a line parallel to the X -axis .

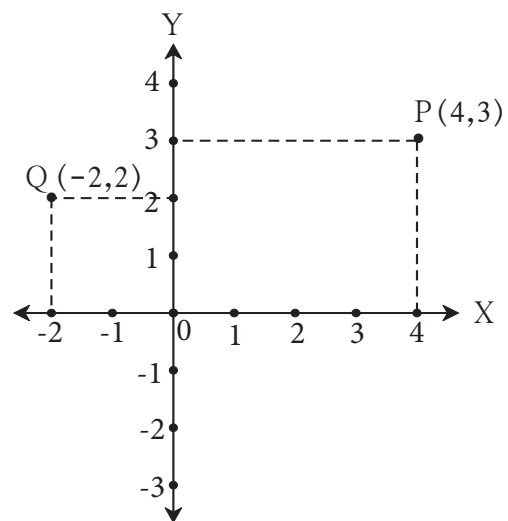


Fig. 7.6

(iii) The point of intersection of these two lines parallel to the Y and X-axis respectively, is the point P (4,3). In which quadrant does this point lie ?

(iv) In the same way, plot the point Q (-2, 2) . Is this point in the second quadrant ?

Using the same method, plot the points R(-3, -4), S(3, -1)

Ex. In which quadrants or on which axis are the points given below ?

(i) (5, 3)

(ii) (-2, 4)

(iii) (2, -5)

(iv) (0, 4)

(v) (-3, 0)

(vi) (-2, 2.5)

(vii) (5, 3.5)

(viii) (-3.5, 1.5)

(ix) (0, -4)

(x) (2, -4)

Solution :

	co-ordinates	Quadrant / axis
(i)	(5,3)	Quadrant I
(ii)	(-2,4)	Quadrant II
(iii)	(2,-5)	Quadrant IV
(iv)	(0,4)	Y-axis
(v)	(-3,0)	X-axis

	co-ordinates	Quadrant / axis
(vi)	(-2, -2.5)	Quadrant III
(vii)	(5,3.5)	Quadrant I
(viii)	(-3.5,1.5)	Quadrant II
(ix)	(0, -4)	Y-axis
(x)	(2,-4)	Quadrant IV

Practice set 7.1

1. State in which quadrant or on which axis do the following points lie.

- A(-3, 2), • B(-5, -2), • K(3.5, 1.5), • D(2, 10),
- E(37, 35), • F(15, -18), • G(3, -7), • H(0, -5),
- M(12, 0), • N(0, 9), • P(0, 2.5), • Q(-7, -3)

2. In which quadrant are the following points ?

- (i) whose both co-ordinates are positive.
- (ii) whose both co-ordinates are negative.
- (iii) whose x co-ordinate is positive, and the y co-ordinate is negative.
- (iv) whose x co-ordinate is negative and y co-ordinate is positive.

3. Draw the co-ordinate system on a plane and plot the following points.

L(-2, 4), M(5, 6), N(-3, -4), P(2, -3), Q(6, -5), S(7, 0), T(0, -5)



Let's learn.

Lines parallel to the X-axis

- On a graph paper, plot the following points
A (5, 4), B (2, 4), C (-2, 4), D (-4, 4), E (0, 4), F (3, 4)
- Observe the co-ordinates of the given points.
- Did you notice that the y co-ordinates of all the points are equal ?
- All the points are collinear.
- To which axis is this line parallel ?
- The y co-ordinate of every point on the line DA is 4. It is constant. Therefore the line DA is described by the equation $y = 4$. If the y co-ordinate of any point is 4, will be on the line DA.

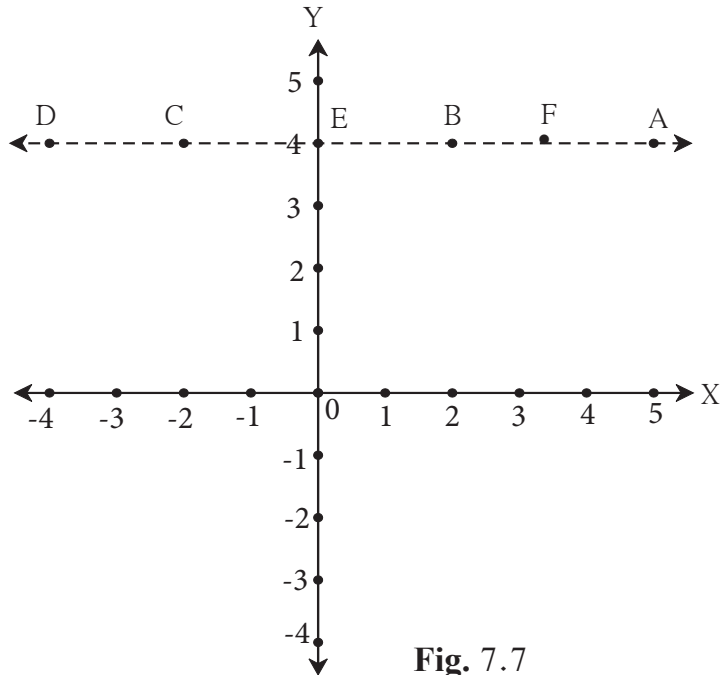


Fig. 7.7

The equation of the line parallel to the X axis at a distance of 4 units from the X-axis is $y = 4$.



Let's discuss.

- Can we draw a line parallel to the X-axis at a distance of 6 units from it and below the X-axis ?
- Will all of the points $(-3, -6)$, $(10, -6)$, $(\frac{1}{2}, -6)$ be on that line ?
- What would be the equation of this line ?



Remember this !

If $b > 0$, and we draw the line $y = b$ through the point $(0, b)$, it will be above the X-axis and parallel, to it. If $b < 0$, then the line $y = b$ will be below the X-axis and parallel to it.

The equation of a line parallel to the X-axis is in the form $y = b$.



Remember this !

- (1) The y co-ordinate of every point on the X -axis is zero. Conversely, every point whose y co-ordinate is zero is on the X -axis. Therefore, the equation of the X axis is $y = 0$.
- (2) The x co-ordinate of every point on the Y -axis is zero. Conversely, every point whose x co-ordinate is zero is on the Y -axis. Therefore, the equation of the Y -axis is $x = 0$.



Let's learn.

Graph of a linear equations

Ex. Draw the graphs of the equations
 $x = 2$ and $y = -3$.

Solution : (i) On a graph paper draw the X -axis and the Y -axis.

- (ii) Since it is given that $x = 2$, draw a line on the right of the Y -axis at a distance of 2 units from it and parallel to it.
- (iii) Since it is given that $y = -3$, draw a line below the X -axis at a distance of 3 units from it and parallel to it.
- (iv) These lines, parallel to the two axes, are the graphs of the given equations.
- (v) Write the co-ordinates of the point P , the point of intersection of these two lines.
- (vi) Verify that the co-ordinates of the point P are $(2, -3)$.

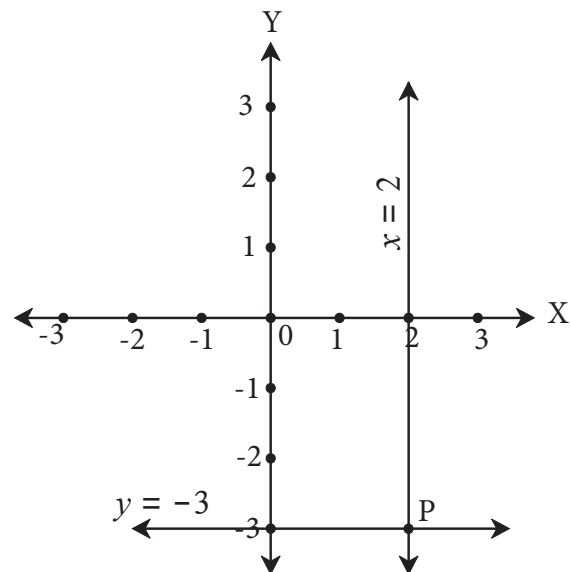


Fig. 7.9

The graph of a linear equation in the general form.

Activity : On a graph paper, plot the points $(0,1)$ $(1,3)$ $(2,5)$. Are they collinear? If so, draw the line that passes through them.

- Through which quadrants does this line pass ?
- Write the co-ordinates of the point at which it intersects the Y -axis.
- Show any point in the third quadrant which lies on this line. Write the co-ordinates of the point.

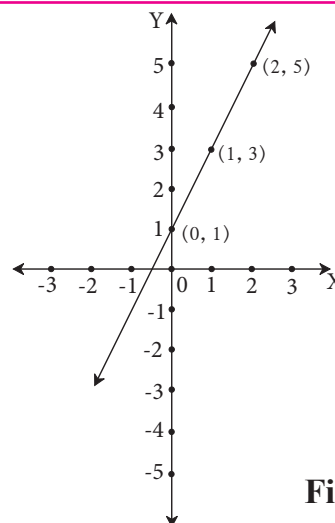


Fig. 7.10

5. X-axis and line $x = -4$ are parallel lines. What is the distance between them?
6. Which of the equations given below have graphs parallel to the X-axis, and which ones have graphs parallel to the Y-axis ?
- (i) $x = 3$ (ii) $y - 2 = 0$ (iii) $x + 6 = 0$ (iv) $y = -5$
7. On a graph paper, plot the points A(2, 3), B(6, -1) and C(0, 5). If those points are collinear then draw the line which includes them. Write the co-ordinates of the points at which the line intersects the X-axis and the Y-axis.
8. Draw the graphs of the following equations on the same system of co-ordinates. Write the co-ordinates of their points of intersection.
- $x + 4 = 0$, $y - 1 = 0$, $2x + 3 = 0$, $3y - 15 = 0$
9. Draw the graphs of the equations given below.
- (i) $x + y = 2$ (ii) $3x - y = 0$ (iii) $2x + y = 1$

Problem set 7

1. Choose the correct alternative answer for the following questions.
- (i) What is the form of co-ordinates of a point on the X-axis ?
 (A) (b, b) (B) $(0, b)$ (C) $(a, 0)$ (D) (a, a)
- (ii) Any point on the line $y = x$ is of the form
- (A) (a, a) (B) $(0, a)$ (C) $(a, 0)$ (D) $(a, -a)$
- (iii) What is the equation of the X-axis ?
 (A) $x = 0$ (B) $y = 0$ (C) $x + y = 0$ (D) $x = y$
- (iv) In which quadrant does the point $(-4, -3)$ lie ?
 (A) First (B) Second (C) Third (D) Fourth
- (v) What is the nature of the line which includes the points $(-5,5)$, $(6,5)$, $(-3,5)$, $(0,5)$?
 (A) Passes through the origin (B) Parallel to Y-axis
 (C) Parallel to X-axis (D) None of these
- (vi) Which of the points P $(-1,1)$, Q $(3,-4)$, R $(1,-1)$, S $(-2,-3)$, T $(-4,4)$ lie in the fourth quadrant ?
 (A) P and T (B) Q and R (C) only S (D) P and R

2. Some points are shown in the figure 7.11.

With the help of it answer the following questions :

- (i) Write the co-ordinates of the points Q and R.
- (ii) Write the co-ordinates of the points T and M.
- (iii) Which point lies in the third quadrant ?
- (iv) Which are the points whose x and y co-ordinates are equal ?

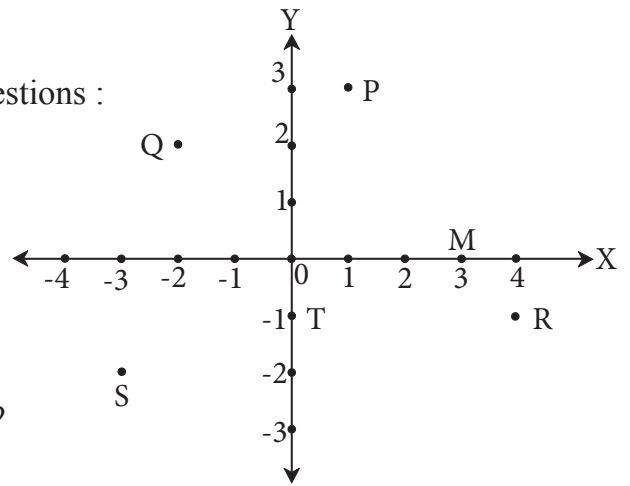


Fig.7.11

3. Without plotting the points on a graph, state in which quadrant or on which axis do the following point lie.

- (i) $(5, -3)$ (ii) $(-7, -12)$ (iii) $(-23, 4)$
- (iv) $(-9, 5)$ (v) $(0, -3)$ (vi) $(-6, 0)$

4. Plot the following points on the one and the same co-ordinate system.

$A(1, 3)$, $B(-3, -1)$, $C(1, -4)$,
 $D(-2, 3)$, $E(0, -8)$, $F(1, 0)$

5. In the graph alongside, line LM is parallel to the Y-axis. (Fig. 7.12)

- (i) What is the distance of line LM from the Y-axis ?
- (ii) Write the co-ordinates of the points P, Q and R.
- (iii) What is the difference between the x co-ordinates of the points L and M?

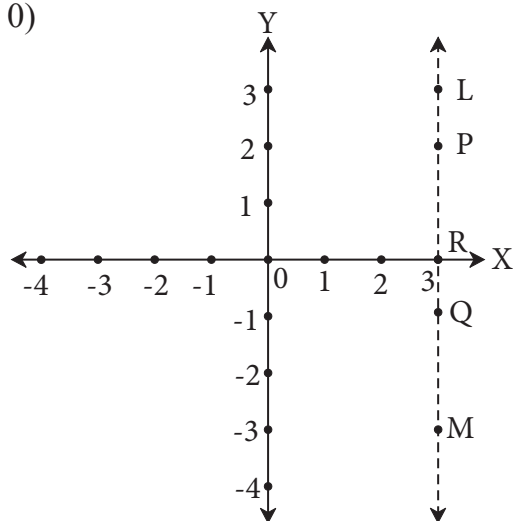


Fig.7.12

6. How many lines are there which are parallel to X-axis and having a distance 5 units?

7*. If ' a ' is a real number, what is the distance between the Y-axis and the line $x = a$?



- If $\triangle ABC \sim \triangle PQR$ then their corresponding sides are in the same proportions.

$$\text{So } \frac{AB}{PQ} = \frac{BC}{QR} = \frac{AC}{PR}$$

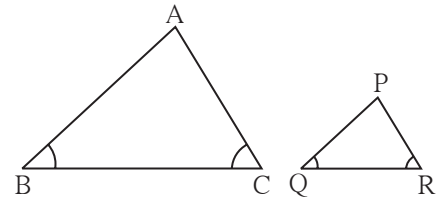


Fig. 8.2

Let us see how to find the height of a tall tree using properties of similar triangles.

Activity : This experiment can be conducted on a clear sunny day. Look at the figure given alongside.

Height of the tree is QR, height of the stick is BC.

Thrust a stick in the ground as shown in the figure. Measure its height and length of its shadow. Also measure the length of the shadow of the tree. Rays of sunlight are parallel. So $\triangle PQR$ and $\triangle ABC$ are equiangular, means similar triangles. Sides of similar triangles are proportional.

$$\text{So we get } \frac{QR}{PR} = \frac{BC}{AC}.$$

Therefore, we get an equation,

$$\text{height of the tree} = QR = \frac{BC}{AC} \times PR$$

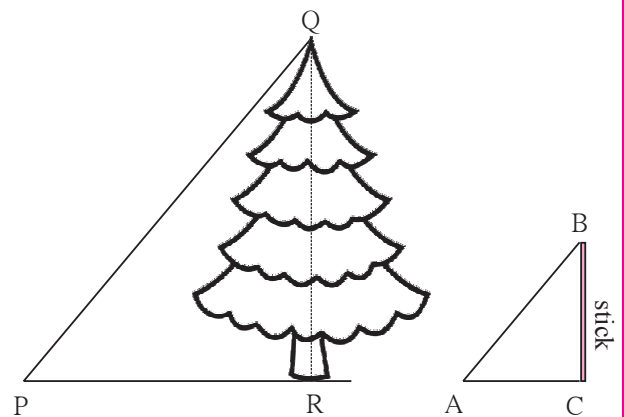


Fig.8.3

We know the values of PR, BC and AC. Substituting these values in this equation, we get length of QR, means height of the tree.



Use your brain power !

It is convenient to do this experiment between 11:30 am and 1:30 pm instead of doing it in the morning at 8'O clock. Can you tell why ?

Activity : You can conduct this activity and find the height of a tall tree in your surrounding. If there is no tree in the premises then find the height of a pole.




Fig. 8.4



Terms related to right angled triangle

In right angled ΔABC , $\angle B = 90^\circ$, $\angle A$ and $\angle C$ are acute angles.

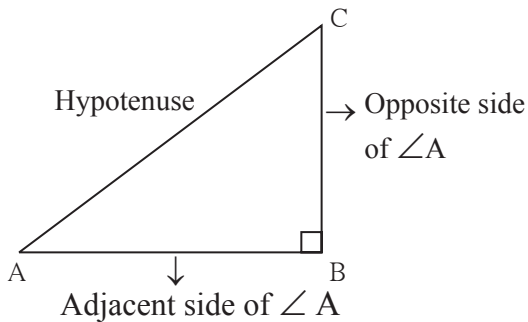


Fig. 8.5

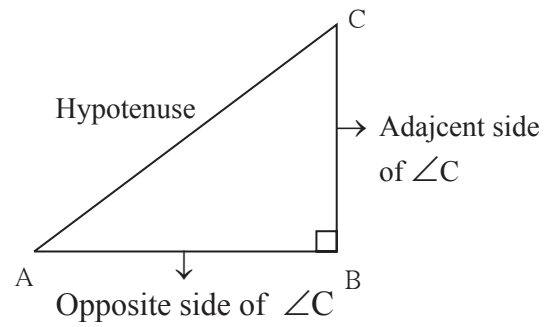


Fig. 8.6

Ex. In the figure 8.7, ΔPQR is a right angled triangle. Write-

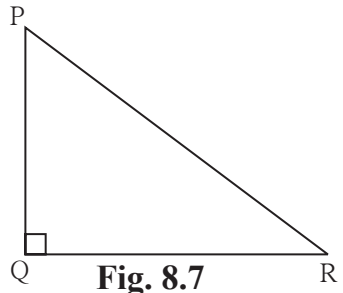


Fig. 8.7

- side opposite to $\angle P = \dots$
- side opposite to $\angle R = \dots$
- side adjacent to $\angle P = \dots$
- side adjacent to $\angle R = \dots$

Trigonometric ratios

In the adjacent Fig.8.8 some right angled triangles are shown. $\angle B$ is their common angle. So all right angled triangles are similar.

$\Delta PQB \sim \Delta ACB$

$\therefore \frac{PB}{AB} = \frac{PQ}{AC} = \frac{BQ}{BC}$

$\therefore \frac{PQ}{AC} = \frac{PB}{AB} \therefore \frac{PQ}{PB} = \frac{AC}{AB}$... alternando

$\frac{QB}{BC} = \frac{PB}{AB} \therefore \frac{QB}{PB} = \frac{BC}{AB}$... alternando

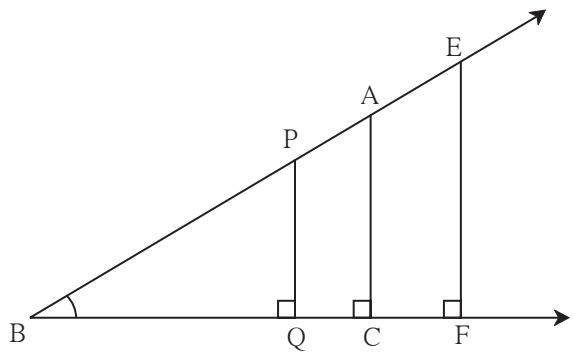


Fig. 8.8

$$\sin C = \sin \theta = \frac{AB}{AC}, \quad \cos C = \cos \theta = \frac{BC}{AC}, \quad \tan C = \tan \theta = \frac{AB}{BC}$$



Remember this !

- $\sin \text{ ratio} = \frac{\text{opposite side}}{\text{hypotenuse}}$
- $\cos \text{ ratio} = \frac{\text{adjacent side}}{\text{hypotenuse}}$
- $\tan \text{ ratio} = \frac{\text{opposite side}}{\text{adjacent side}}$
- $\sin \theta = \frac{\text{opposite side of } \angle \theta}{\text{hypotenuse}}$
- $\cos \theta = \frac{\text{adjacent side of } \angle \theta}{\text{hypotenuse}}$
- $\tan \theta = \frac{\text{opposite side of } \angle \theta}{\text{adjacent side of } \angle \theta}$

Practice set 8.1

1.

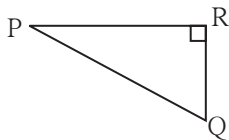


Fig. 8.12

In the Fig.8.12, $\angle R$ is the right angle of ΔPQR . Write the following ratios.
 (i) $\sin P$ (ii) $\cos Q$ (iii) $\tan P$ (iv) $\tan Q$

2.

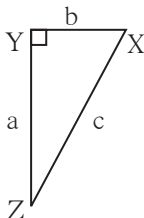


Fig. 8.13

In the right angled ΔXYZ , $\angle XYZ = 90^\circ$ and a, b, c are the lengths of the sides as shown in the figure. Write the following ratios,
 (i) $\sin X$ (ii) $\tan Z$ (iii) $\cos X$ (iv) $\tan X$.

3.

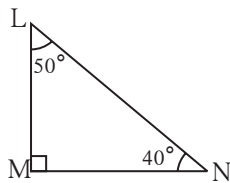


Fig. 8.14

In right angled ΔLMN , $\angle LMN = 90^\circ$
 $\angle L = 50^\circ$ and $\angle N = 40^\circ$,
 write the following ratios.
 (i) $\sin 50^\circ$ (ii) $\cos 50^\circ$
 (iii) $\tan 40^\circ$ (iv) $\cos 40^\circ$

4.

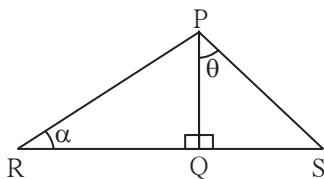


Fig. 8.15

In the figure 8.15, $\angle PQR = 90^\circ$,
 $\angle PQS = 90^\circ$, $\angle PRQ = \alpha$ and $\angle QPS = \theta$
 Write the following trigonometric ratios.
 (i) $\sin \alpha$, $\cos \alpha$, $\tan \alpha$
 (ii) $\sin \theta$, $\cos \theta$, $\tan \theta$

*** For more information**

$$\frac{1}{\sin \theta} = \operatorname{cosec} \theta, \quad \frac{1}{\cos \theta} = \sec \theta, \quad \frac{1}{\tan \theta} = \cot \theta$$

It means cosec θ , sec θ and cot θ are inverse ratios of sin θ , cos θ and tan θ respectively.

- sec $\theta = \operatorname{cosec} (90 - \theta)$
- cosec $\theta = \sec (90 - \theta)$
- tan $\theta = \cot (90 - \theta)$
- cot $\theta = \tan (90 - \theta)$



Let's recall.

Theorem of 30°- 60°-90° triangle :

We know that if the measures of angles of a triangle are 30°, 60°, 90° then side opposite to 30° angle is half of the hypotenuse and side opposite to 60° angle is $\frac{\sqrt{3}}{2}$ of hypotenuse.

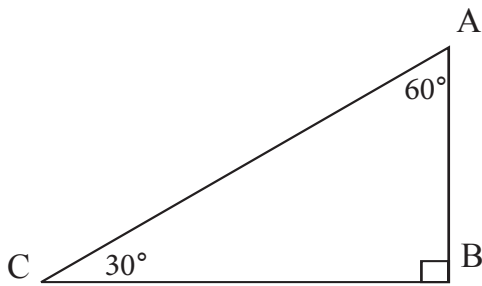


Fig. 8.17

In the Fig. 8.17, ΔABC is a right angled triangle. $\angle C = 30^\circ$, $\angle A = 60^\circ$, $\angle B = 90^\circ$.

$$\therefore AB = \frac{1}{2} AC \text{ and } BC = \frac{\sqrt{3}}{2} AC$$



Let's learn.

Trigonometric ratios of 30° and 60° angles

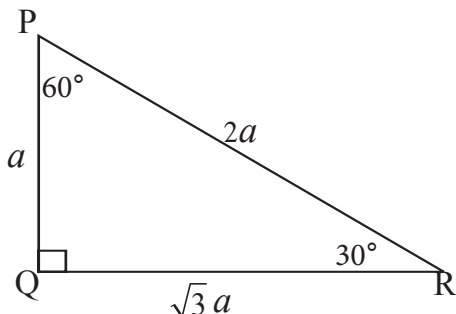


Fig. 8.18

In right angled ΔPQR if $\angle R = 30^\circ$, $\angle P = 60^\circ$, $\angle Q = 90^\circ$ and $PQ = a$

$$\text{then } PQ = \frac{1}{2} PR$$

$$a = \frac{1}{2} PR$$

$$\therefore PR = 2a$$

$$QR = \frac{\sqrt{3}}{2} PR$$

$$QR = \frac{\sqrt{3}}{2} \times 2a$$

$$QR = \sqrt{3} a$$

\therefore If $PQ = a$, then $PR = 2a$ and $QR = \sqrt{3} a$

(I) Trigonometric ratios of the 30° angle

$$\sin 30^\circ = \frac{PQ}{PR} = \frac{a}{2a} = \frac{1}{2}$$

$$\cos 30^\circ = \frac{QR}{PR} = \frac{\sqrt{3}a}{2a} = \frac{\sqrt{3}}{2}$$

$$\tan 30^\circ = \frac{PQ}{QR} = \frac{a}{\sqrt{3}a} = \frac{1}{\sqrt{3}}$$

(II) Trigonometric ratios of 60° angle

$$\sin 60^\circ = \frac{QR}{PR} = \frac{\sqrt{3}a}{2a} = \frac{\sqrt{3}}{2}$$

$$\cos 60^\circ = \frac{PQ}{PR} = \frac{a}{2a} = \frac{1}{2}$$

$$\tan 60^\circ = \frac{QR}{PQ} = \frac{\sqrt{3}a}{a} = \sqrt{3}$$

In right angled ΔPQR , $\angle Q = 90^\circ$. Therefore $\angle P$ and $\angle R$ are complimentary angles of each other. Verify the relation between sine and cosine ratios of complimentary angles here also.

$$\sin \theta = \cos (90 - \theta)$$

$$\sin 30^\circ = \cos (90^\circ - 30^\circ) = \cos 60^\circ$$

$$\sin 30^\circ = \cos 60^\circ$$

$$\cos \theta = \sin (90 - \theta)$$

$$\cos 30^\circ = \sin (90^\circ - 30^\circ) = \sin 60^\circ$$

$$\cos 30^\circ = \sin 60^\circ$$



Remember this !

$\sin 30^\circ = \frac{1}{2}$	$\cos 30^\circ = \frac{\sqrt{3}}{2}$	$\tan 30^\circ = \frac{1}{\sqrt{3}}$
$\sin 60^\circ = \frac{\sqrt{3}}{2}$	$\cos 60^\circ = \frac{1}{2}$	$\tan 60^\circ = \sqrt{3}$

(III) Trigonometric ratios of the 45° angle

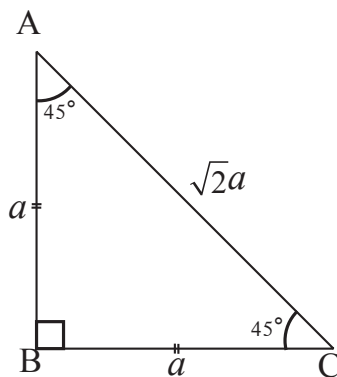


Fig.8.19

In right angled ΔABC , $\angle B = 90^\circ$, $\angle A = 45^\circ$, $\angle C = 45^\circ \therefore$ This is an isosceles triangle.

Suppose $AB = a$ then $BC = a$.

Using Pythagoras' theorem, let us find the length of AC .

$$AC^2 = AB^2 + BC^2$$

$$= a^2 + a^2$$

$$AC^2 = 2a^2$$

$$\therefore AC = \sqrt{2}a$$

In the Fig. 8.19, $\angle C = 45^\circ$

$$\sin 45^\circ = \frac{AB}{AC} = \frac{a}{\sqrt{2}a} = \frac{1}{\sqrt{2}}$$

$$\cos 45^\circ = \frac{BC}{AC} = \frac{a}{\sqrt{2}a} = \frac{1}{\sqrt{2}}$$

$$\tan 45^\circ = \frac{AB}{BC} = \frac{a}{a} = 1$$



Remember this !

$$\sin 45^\circ = \frac{1}{\sqrt{2}},$$

$$\cos 45^\circ = \frac{1}{\sqrt{2}},$$

$$\tan 45^\circ = 1$$

(IV) Trigonometric ratios of the angle 0° and 90°

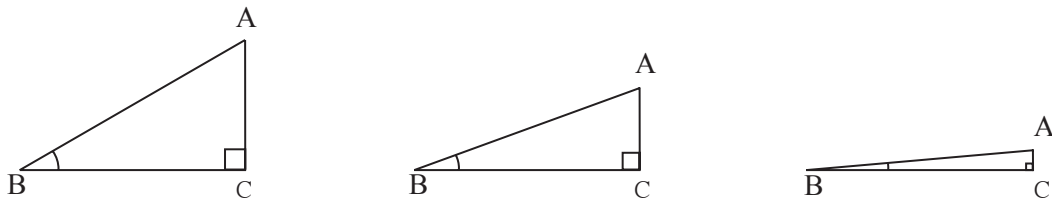


Fig.8.20

In the right angled ΔACB , $\angle C = 90^\circ$ and $\angle B = 30^\circ$. We know that $\sin 30^\circ = \frac{AC}{AB}$. Keeping the length of side AB constant, if the measure of $\angle B$ goes on decreasing the length of AC, which is opposite to $\angle B$ also goes on decreasing. So as the measure of $\angle B$ decreases, then value of $\sin \theta$ also decreases.

\therefore when measure of $\angle B$ becomes 0° , then length of AC becomes 0.

$$\therefore \sin 0^\circ = \frac{AC}{AB} = \frac{0}{AB} = 0 \quad \therefore \sin 0^\circ = 0$$

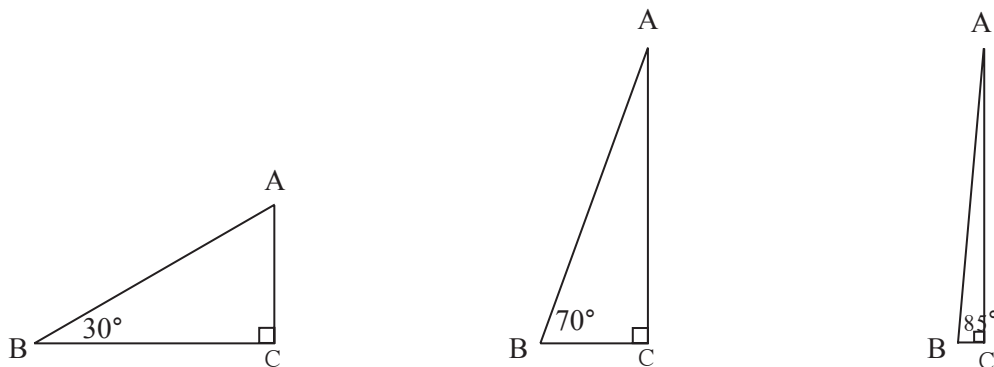


Fig.8.21

Solved Examples :

Ex. (1) Find the value of $2\tan 45^\circ + \cos 30^\circ - \sin 60^\circ$

Solution :

$$2\tan 45^\circ + \cos 30^\circ - \sin 60^\circ$$

$$= 2 \times 1 + \frac{\sqrt{3}}{2} - \frac{\sqrt{3}}{2}$$

$$= 2 + 0$$

$$= 2$$

Ex. (2) Find the value of $\frac{\cos 56^\circ}{\sin 34^\circ}$

Solution : $56^\circ + 34^\circ = 90^\circ$ means 56 and 34 are the measures of complimentary angles.

$$\sin \theta = \cos (90 - \theta)$$

$$\therefore \sin 34^\circ = \cos (90 - 34)^\circ = \cos 56^\circ$$

$$\therefore \frac{\cos 56^\circ}{\sin 34^\circ} = \frac{\cos 56^\circ}{\cos 56^\circ} = 1$$

Ex. 3 In right angled ΔACB , If $\angle C = 90^\circ$, $AC = 3$, $BC = 4$.

Find the ratios $\sin A$, $\sin B$, $\cos A$, $\tan B$

Solution : In right angled ΔACB , using Pythagoras' theorem,

$$AB^2 = AC^2 + BC^2$$

$$= 3^2 + 4^2 = 5^2$$

$$\therefore AB = 5$$

$$\sin A = \frac{BC}{AB} = \frac{4}{5}$$

$$\cos A = \frac{AC}{AB} = \frac{3}{5}$$

$$\text{and } \sin B = \frac{AC}{AB} = \frac{3}{5}$$

$$\tan B = \frac{AC}{BC} = \frac{3}{4}$$

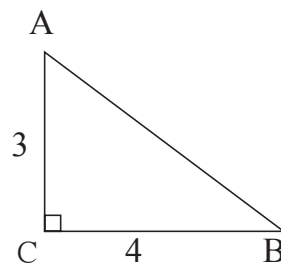


Fig. 8.22

Ex. 4 In right angled triangle ΔPQR , $\angle Q = 90^\circ$, $\angle R = \theta$ and if $\sin \theta = \frac{5}{13}$ then find $\cos \theta$ and $\tan \theta$.

Solution :

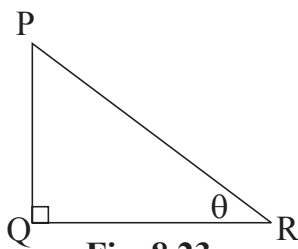


Fig. 8.23

In right angled ΔPQR , $\angle R = \theta$

$$\sin \theta = \frac{5}{13}$$

$$\therefore \frac{PQ}{PR} = \frac{5}{13}$$

∴ Let $PQ = 5k$ and $PR = 13k$

Let us find QR by using Pythagoras' theorem,

$$\begin{aligned} PQ^2 + QR^2 &= PR^2 \\ (5k)^2 + QR^2 &= (13k)^2 \\ 25k^2 + QR^2 &= 169k^2 \\ QR^2 &= 169k^2 - 25k^2 \\ QR^2 &= 144k^2 \\ QR &= 12k \end{aligned}$$

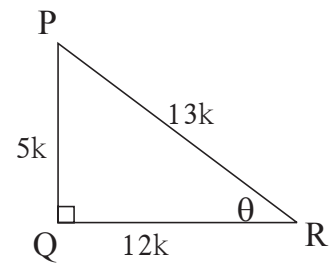


Fig. 8.24

Now, in right angled ΔPQR , $PQ = 5k$, $PR = 13k$ and $QR = 12k$

$$\therefore \cos \theta = \frac{QR}{PR} = \frac{12k}{13k} = \frac{12}{13}, \quad \tan \theta = \frac{PQ}{QR} = \frac{5k}{12k} = \frac{5}{12}$$



Use your brain power!

- (1) While solving above example, why the lengths of PQ and PR are taken $5k$ and $13k$?
- (2) Can we take the lengths of PQ and PR as 5 and 13 ? If so then what changes are needed in the writing of the solution.

Important Equation in Trigonometry

ΔPQR is a right angled triangle.

$$\angle PQR = 90^\circ, \angle R = \theta$$

$$\sin \theta = \frac{PQ}{PR} \dots\dots\dots(I)$$

$$\text{and } \cos \theta = \frac{QR}{PR} \dots\dots\dots(II)$$

Using Pythagoras' theorem,

$$PQ^2 + QR^2 = PR^2$$

$$\therefore \frac{PQ^2}{PR^2} + \frac{QR^2}{PR^2} = \frac{PR^2}{PR^2} \dots \text{dividing each term by } PR^2$$

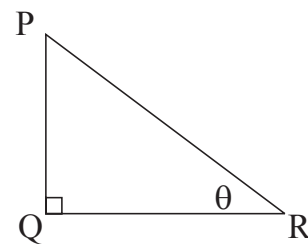


Fig.8.25

$$\therefore \left(\frac{PQ}{PR}\right)^2 + \left(\frac{QR}{PR}\right)^2 = 1$$

$$\therefore (\sin \theta)^2 + (\cos \theta)^2 = 1 \text{ ..from (I) \& (II)}$$

Problem set 8

1. Choose the correct alternative answer for following multiple choice questions.

(i) Which of the following statements is true ?

- (A) $\sin \theta = \cos (90 - \theta)$ (B) $\cos \theta = \tan (90 - \theta)$
 (C) $\sin \theta = \tan (90 - \theta)$ (D) $\tan \theta = \tan (90 - \theta)$

(ii) Which of the following is the value of $\sin 90^\circ$?

- (A) $\frac{\sqrt{3}}{2}$ (B) 0 (C) $\frac{1}{2}$ (D) 1

(iii) $2 \tan 45^\circ + \cos 45^\circ - \sin 45^\circ = ?$

- (A) 0 (B) 1 (C) 2 (D) 3

(iv) $\frac{\cos 28^\circ}{\sin 62^\circ} = ?$

- (A) 2 (B) -1 (C) 0 (D) 1

2. In right angled Δ TSU, $TS = 5$, $\angle S = 90^\circ$,
 $SU = 12$ then find $\sin T$, $\cos T$, $\tan T$.
 Similarly find $\sin U$, $\cos U$, $\tan U$.

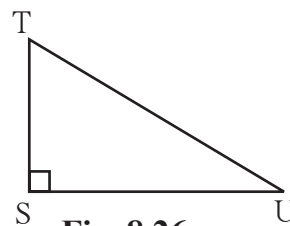


Fig. 8.26

3. In right angled Δ YXZ, $\angle X = 90^\circ$, $XZ = 8$ cm,
 $YZ = 17$ cm, find $\sin Y$, $\cos Y$, $\tan Y$,
 $\sin Z$, $\cos Z$, $\tan Z$.

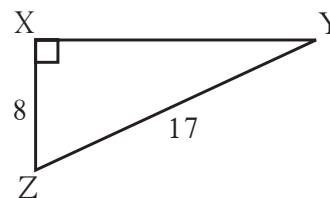


Fig. 8.27

4. In right angled Δ LMN, if $\angle N = \theta$, $\angle M = 90^\circ$,
 $\cos \theta = \frac{24}{25}$, find $\sin \theta$ and $\tan \theta$

Similarly, find $(\sin^2 \theta)$ and $(\cos^2 \theta)$.

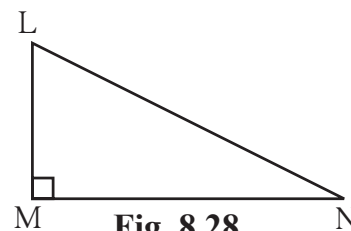


Fig. 8.28

5. Fill in the blanks.

(i) $\sin 20^\circ = \cos \square^\circ$

(ii) $\tan 30^\circ \times \tan \square^\circ = 1$

(iii) $\cos 40^\circ = \sin \square^\circ$





Let's study.

- Surface area of a cone
- Volume of a cone
- Surface area of a sphere
- Volume of a sphere



Let's recall.

We have learnt how to find the surface area and volume of a cuboid, a cube and a cylinder, in earlier standard.

Cuboid

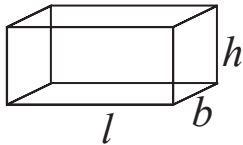


Fig.9.1

- Length, breadth and height of a cuboid are l , b , h respectively.
 - (i) Area of vertical surfaces of a cuboid $= 2(l + b) \times h$
Here we have considered only 4 surfaces into consideration.
 - (ii) Total surface area of a cuboid $= 2(lb + bh + lh)$
Here we have taken all 6 surfaces into consideration.
 - (iii) Volume of a cuboid $= l \times b \times h$

Cube

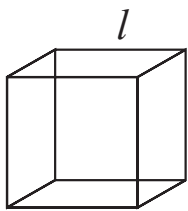


Fig.9.2

- If l is the edge of a cube,
 - (i) Total surface area of a cube $= 6l^2$
 - (ii) Area of vertical surfaces of a cube $= 4l^2$
 - (iii) Volume of a cube $= l^3$

Cylinder

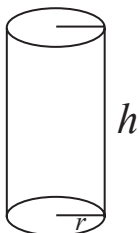


Fig.9.3

- Radius of cylinder is r and height is h .
 - (i) Curved surface area of a cylinder $= 2\pi rh$
 - (ii) Total surface area of a cylinder $= 2\pi r(r + h)$
 - (iii) Volume of a cylinder $= \pi r^2 h$

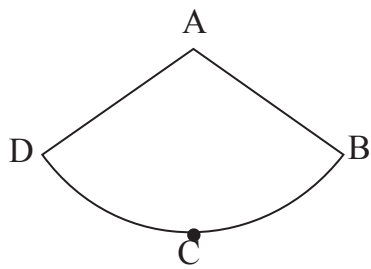


Fig.9.5

To find a formula for the curved surface area of a cone, let us see the net of the curved surface, which is a sector of a circle.

If a cone is cut along edge AB, we get its net as shown in fig.9.5.

Compare the figures 9.4 and 9.5

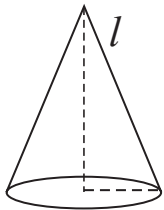
Have you noticed the following things ?

- (i) Radius AB of the sector is the same as the slant height of the cones.
- (ii) Arc BCD of the sector is the same as circumference of the base of the cone.
- (iii) Curved surface area of cone = Area of sector A-BCD.

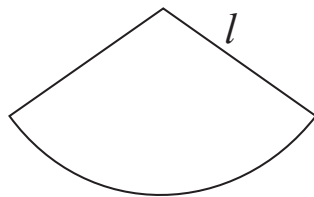
It means to find the curved surface area of a cone we have to find the area of its net that is the area of the sector.

Try to understand, how it is done from the following activity.

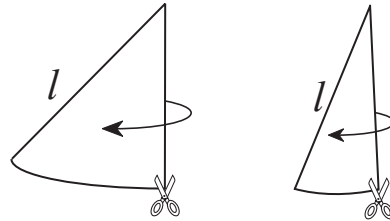
Activity : Look at the following figures.



Cone
Fig. 9.6



Net of curved surface
Fig. 9.7



Pieces of the net
Fig. 9.8

Circumference of base of the circle = $2\pi r$

As shown in the Fig.9.8, make pieces of the net as small as possible. Join them as shown in the Fig.9.9.

By Joining the small pieces of net of the cone, we get a rectangle ABCD approximately.

Total length of AB and CD is $2\pi r$.

\therefore length of side AB of rectangle ABCD is πr
and length of side CD is also πr .

Length of side BC of rectangle = slant height of cone = l .

Curved surface area of cone is equal to the area of the rectangle.

\therefore curved surface area of cone = Area of rectangle = $AB \times BC = \pi r \times l = \pi r l$

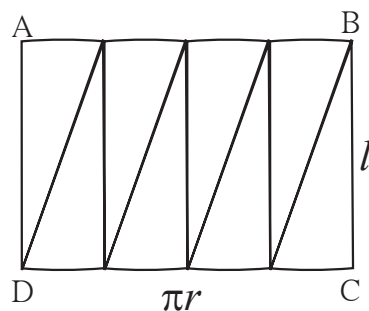


Fig. 9.9

Solved Examples :**Ex. (1)** Radius of base (r) and perpendicular height (h) of cone is given.Find its slant height (l)

(i) $r = 6$ cm, $h = 8$ cm, (ii) $r = 9$ cm, $h = 12$ cm

Solution :

(i) $r = 6$ cm, $h = 8$ cm

$$l^2 = r^2 + h^2$$

$$\therefore l^2 = (6)^2 + (8)^2$$

$$\therefore l^2 = 36 + 64$$

$$\therefore l^2 = 100$$

$$\therefore l = 10$$
 cm

(ii) $r = 9$ cm, $h = 12$ cm

$$l^2 = r^2 + h^2$$

$$\therefore l^2 = (9)^2 + (12)^2$$

$$\therefore l^2 = 81 + 144$$

$$\therefore l^2 = 225$$

$$\therefore l = 15$$
 cm

Ex. (2) Find (i) the slant height, (ii) the curved surface area and (iii) total surface area of a cone, if its base radius is 12 cm and height is 16 cm. ($\pi = 3.14$)**Solution :**

(i) $r = 12$ cm, $h = 16$ cm

$$l^2 = r^2 + h^2$$

$$\therefore l^2 = (12)^2 + (16)^2$$

$$\therefore l^2 = 144 + 256$$

$$\therefore l^2 = 400$$

$$\therefore l = 20$$
 cm

(ii) Curved surface area = $\pi r l$

$$= 3.14 \times 12 \times 20$$

$$= 753.6 \text{ cm}^2$$

(iii) Total surface area of cone

$$= \pi r (l + r)$$

$$= 3.14 \times 12(20+12)$$

$$= 3.14 \times 12 \times 32$$

$$= 1205.76 \text{ cm}^2$$

Ex. (3) The total surface area of a cone is 704 sq.cm and radius of its base is 7 cm, find the slant height of the cone. ($\pi = \frac{22}{7}$)**Solution :** Total surface area of cone = $\pi r (l + r)$

$$\therefore 704 = \frac{22}{7} \times 7 (l + 7)$$

$$\therefore \frac{704}{22} = l + 7$$

$$\therefore 32 = l + 7$$

$$\therefore 32 - 7 = l$$

$$\therefore l = 25$$
 cm

Ex. (4) Area of the base of a cone is 1386 sq.cm and its height is 28 cm.

Find its surface area. ($\pi = \frac{22}{7}$)

Solution :

$$\text{Area of base of cone} = \pi r^2$$

$$\therefore 1386 = \frac{22}{7} \times r^2$$

$$\therefore \frac{1386 \times 7}{22} = r^2$$

$$\therefore 63 \times 7 = r^2$$

$$\therefore 441 = r^2$$

$$\therefore r = 21 \text{ cm}$$

$$\therefore l^2 = (21)^2 + (28)^2$$

$$\therefore l^2 = 441 + 784$$

$$\therefore l^2 = 1225$$

$$\therefore l = 35 \text{ cm}$$

$$\text{Surface area of cone} = \pi r l$$

$$= \frac{22}{7} \times 21 \times 35$$

$$= 22 \times 21 \times 5$$

$$= 2310 \text{ sq. cm.}$$

Practice set 9.2

1. Perpendicular height of a cone is 12 cm and its slant height is 13 cm. Find the radius of the base of the cone.
2. Find the volume of a cone, if its total surface area is 7128 sq.cm and radius of base is 28 cm. ($\pi = \frac{22}{7}$)
3. Curved surface area of a cone is 251.2 cm² and radius of its base is 8cm. Find its slant height and perpendicular height. ($\pi = 3.14$)
4. What will be the cost of making a closed cone of tin sheet having radius of base 6 m and slant height 8 m if the rate of making is Rs.10 per sq.m ?
5. Volume of a cone is 6280 cubic cm and base radius of the cone is 30 cm. Find its perpendicular height. ($\pi = 3.14$)
6. Surface area of a cone is 188.4 sq.cm and its slant height is 10cm. Find its perpendicular height ($\pi = 3.14$).
7. Volume of a cone is 1212 cm³ and its height is 24cm. Find the surface area of the cone. ($\pi = \frac{22}{7}$)
8. The curved surface area of a cone is 2200 sq.cm and its slant height is 50 cm. Find the total surface area of cone. ($\pi = \frac{22}{7}$)
9. There are 25 persons in a tent which is conical in shape. Every person needs an area of 4 sq.m. of the ground inside the tent. If height of the tent is 18m, find the volume of the tent.

10. In a field, dry fodder for the cattle is heaped in a conical shape. The height of the cone is 2.1m. and diameter of base is 7.2 m. Find the volume of the fodder. if it is to be covered by polythin in rainy season then how much minimum polythin sheet is needed ?

$$\left(\pi = \frac{22}{7} \text{ and } \sqrt{17.37} = 4.17.\right)$$



Let's learn.

Surface area of a sphere

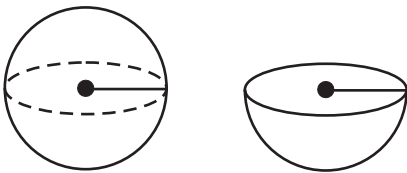


Fig. 9.11


Surface area of a sphere = $4\pi r^2$

\therefore Surface area of a hollow hemisphere = $2\pi r^2$

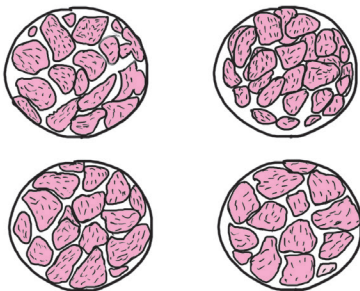
Total surface area of a solid hemisphere
 = Surface area of hemisphere + Area of circle
 = $2\pi r^2 + \pi r^2 = 3\pi r^2$



Take a sweet lime (Mosambe), Cut it into two equal parts.



Take one of the parts. Place its circular face on a paper. Draw its circular border. Copy three more such circles. Again, cut each half of the sweet lime into two equal parts.



Now you get 4 quarters of sweet lime. Separate the peel of a quarter part. Cut it into pieces as small as possible. Try to cover one of the circles drawn, by the small pieces.

Observe that the circle gets nearly covered.

The activity suggests that,

curved surface area of a sphere = $4\pi r^2$.

Practice set 9.3

1. Find the surface areas and volumes of spheres of the following radii.
(i) 4 cm (ii) 9 cm (iii) 3.5 cm. ($\pi = 3.14$)
2. If the radius of a solid hemisphere is 5cm, then find its curved surface area and total surface area. ($\pi = 3.14$)
3. If the surface area of a sphere is 2826 cm^2 then find its volume. ($\pi = 3.14$)
4. Find the surface area of a sphere, if its volume is 38808 cubic cm. ($\pi = \frac{22}{7}$)
5. Volume of a hemisphere is 18000π cubic cm. Find its diameter.

Problem set 9

1. If diameter of a road roller is 0.9 m and its length is 1.4 m, how much area of a field will be pressed in its 500 rotations ?
2. To make an open fish tank, a glass sheet of 2 mm gauge is used. The outer length, breadth and height of the tank are 60.4 cm, 40.4 cm and 40.2 cm respectively. How much maximum volume of water will be contained in it ?
3. If the ratio of radius of base and height of a cone is 5:12 and its volume is 314 cubic metre. Find its perpendicular height and slant height ($\pi = 3.14$).
4. Find the radius of a sphere if its volume is 904.32 cubic cm. ($\pi = 3.14$)
5. Total surface area of a cube is 864 sq.cm. Find its volume.
6. Find the volume of a sphere, if its surface area is 154 sq.cm.
7. Total surface area of a cone is 616 sq.cm. If the slant height of the cone is three times the radius of its base, find its slant height.
8. The inner diameter of a well is 4.20 metre and its depth is 10 metre. Find the inner surface area of the well. Find the cost of plastering it from inside at the rate Rs.52 per sq.m.
9. The length of a road roller is 2.1m and its diameter is 1.4m. For levelling a ground 500 rotations of the road roller were required. How much area of ground was levelled by the road roller? Find the cost of levelling at the rate of Rs. 7 per sq. m.



Answers

1. Basic Concepts in Geometry

Practice set 1.1

- (i) 3 (ii) 3 (iii) 7 (iv) 1
(v) 3 (vi) 5 (vii) 2 (viii) 7
- (i) 6 (ii) 8 (iii) 10 (iv) 1 (v) 3 (vi) 12
- (i) P-R-Q (ii) Non collinear (iii) A-C-B (iv) Non collinear
(v) X-Y-Z (vi) Non collinear
- 18 and 2 5. 25 and 9 6. (i) 4.5 (ii) 6.2 (iii) $2\sqrt{7}$ 7. Triangle

Practice set 1.2

- (i) No (ii) No (iii) Yes 2. 4 3. 5 4. $BP < AP < AB$
- (i) Ray RS or Ray RT (ii) Ray PQ (iii) Seg QR (iv) Ray QR and Ray RQ etc.
(v) Ray RQ and Ray RT etc.. (vi) Ray SR, Ray ST etc.. (vii) Point S
- (i) Point A & Point C, Point D & Point P (ii) Point L & Point U, Point P & Point R
(iii) $d(U,V) = 10$, $d(P,C) = 6$, $d(V,B) = 3$, $d(U,L) = 2$

Practice set 1.3

- (i) If a quadrilateral is a parallelogram then opposite angles of that quadrilateral are congruent.
(ii) If quadrilateral is a rectangle then diagonals are congruent.
(iii) If a triangle is an isosceles then segment joining vertex of a triangle and mid point of the base is perpendicular to the base.
- (i) If alternate angles made by two lines and its transversal are congruent then the lines are parallel.
(ii) If two parallel lines are intersected by a transversal the interior angles so formed are supplementary.
(iii) If the diagonals of a quadrilateral are congruent then that quadrilateral is rectangle.

Problem set 1

- (i) A (ii) C (iii) C (iv) C (v) B
- (i) False (ii) False (iii) True (iv) False
- (i) 3 (ii) 8 (iii) 9 (iv) 2 (v) 6 (vi) 22 (vii) 165
- 15 and 1 5. (i) 10.5 (ii) 9.1 6. -6 and 8

2. Parallel Lines

Practice set 2.1

- (i) 95° (ii) 95° (iii) 85° (iv) 85°
- $\angle a = 70^\circ, \angle b = 70^\circ, \angle c = 115^\circ, \angle d = 65^\circ$
- $\angle a = 135^\circ, \angle b = 135^\circ, \angle c = 135^\circ$
- (i) 75° (ii) 75° (iii) 105° (iv) 75°

Practice set 2.2

- No. 4. $\angle ABC = 130^\circ$

Problem set 2

- (i) C (ii) C (iii) A (iv) B (v) C 4. $x = 130^\circ$ $y = 50^\circ$
- $x = 126^\circ$ 6. $f = 100^\circ$ $g = 80^\circ$

3. Triangles

Practice set 3.1

1. 110° 2. 45° 3. $80^\circ, 60^\circ, 40^\circ$ 4. $30^\circ, 60^\circ, 90^\circ$
5. $60^\circ, 80^\circ, 40^\circ$ 6. $\angle DRE = 70^\circ, \angle ARE = 110^\circ$
7. $\angle AOB = 125^\circ$ 9. $30^\circ, 70^\circ, 80^\circ$

Practice set 3.2

- (i) SSC Test (ii) SAS Test (iii) ASA Test (iv) Hypotenuse Side Test.
- (i) ASA Test, $\angle BAC \cong \angle QPR$, side $AB \cong$ side PQ , side $AC \cong$ side PR
(ii) SAS Test, $\angle TPQ \cong \angle TSR$, $\angle TQP \cong \angle TRS$, side $PQ \cong$ side SR
- Hypotenuse Side Test, $\angle ACB \cong \angle QRP$, $\angle ABC \cong \angle QPR$, side $AC \cong$ side QR
- SSS Test, $\angle MLN \cong \angle MPN$, $\angle LMN \cong \angle MNP$, $\angle LNM \cong \angle PMN$

Practice set 3.3

1. $x = 50^\circ, y = 60^\circ, m\angle ABD = 110^\circ, m\angle ACD = 110^\circ$.
2. 7.5 Units 3. 6.5 Units 4. $l(PG) = 5$ cm, $l(PT) = 7.5$ cm

Practice set 3.4

1. 2 cm 2. 28° 3. $\angle QPR, \angle PQR$ 4. greatest side NA, smallest side FN

Practice set 3.5

1. $\frac{XY}{LM} = \frac{YZ}{MN} = \frac{XZ}{LN}$, $\angle X \cong \angle L$, $\angle Y \cong \angle M$, $\angle Z \cong \angle N$
2. $l(QR) = 12$ cm, $l(PR) = 10$ cm

Problem set 3

1. (i) D (ii) B (iii) B

5. Quadrilaterals

Practice set 5.1

- $m\angle XWZ = 135^\circ$, $m\angle YZW = 45^\circ$, $l(WY) = 10$ cm
- $x = 40^\circ$, $\angle C = 132^\circ$, $\angle D = 48^\circ$
- 25 cm, 50 cm, 25 cm, 50 cm
- 60° , 120° , 60° , 120°
- $\angle A = 70^\circ$, $\angle B = 110^\circ$, $\angle C = 70^\circ$, $\angle R = 110^\circ$

Practice set 5.3

- BO = 4 cm, $\angle ACB = 35^\circ$
- QR = 7.5 cm, $\angle PQR = 105^\circ$, $\angle SRQ = 75^\circ$
- $\angle IMJ = 90^\circ$, $\angle JIK = 45^\circ$, $\angle LJK = 45^\circ$
- side = 14.5 cm, Perimeter = 58 cm
- (i) False (ii) False (iii) True (iv) True (v) True (vi) False

Practice set 5.4

- $\angle J = 127^\circ$, $\angle L = 72^\circ$
- $\angle B = 108^\circ$, $\angle D = 72^\circ$

Practice set 5.5

- XY = 4.5 cm, YZ = 2.5 cm, XZ = 5.5 cm

Problem set 5

- (i) D (ii) C (iii) D
- 25 cm
- $6.5\sqrt{2}$ cm
- 24 cm, 32 cm, 24 cm, 32 cm
- PQ = 26 cm
- $\angle MPS = 65^\circ$

6. Circle

Practice set 6.1

- 20 cm
- 5 cm
- 32 unit
- 9 unit

Practice set 6.2

- 12 cm
- 24 cm

Problem set 6

- (i) A (ii) C (iii) A (iv) B (v) D (vi) C (vii) D or B
- 2:1
- 24 units

2. (i) $\frac{11}{2}$ (ii) $\frac{93}{20}$ (iii) 5 (iv) $\frac{2\sqrt{3}}{\sqrt{3}+1}$ (v) $\frac{3}{4}$ (vi) $\frac{\sqrt{3}}{2}$ 3. $\frac{3}{5}$ 4. $\frac{8}{17}$

Problem set 8

1. (i) A (ii) D (iii) C (iv) D
 2. $\sin T = \frac{12}{13}$, $\cos T = \frac{5}{13}$, $\tan T = \frac{12}{5}$, $\sin U = \frac{5}{13}$, $\cos U = \frac{12}{13}$, $\tan U = \frac{5}{12}$
 3. $\sin Y = \frac{8}{17}$, $\cos Y = \frac{15}{17}$, $\tan Y = \frac{8}{15}$, $\sin Z = \frac{15}{17}$, $\cos Z = \frac{8}{17}$, $\tan Z = \frac{15}{8}$
 4. $\sin \theta = \frac{7}{25}$, $\tan \theta = \frac{7}{24}$, $\sin^2 \theta = \frac{49}{625}$, $\cos^2 \theta = \frac{576}{625}$
 5. (i) 70 (ii) 60 (iii) 50

9. Surface Area and Volume

Practice set 9.1

1. 640 sq.cm, 1120 sq.cm. 2. 20 Unit 3. 81 sq.cm, 121.50 sq.cm.
 4. 3600 sq.cm. 5. 20 m 6. 421.88 cubic cm
 7. 1632.80 sq.cm, 4144.80 sq.cm. 8. 21 cm

Practice set 9.2

1. 5 cm 2. 36960 cubic cm. 3. 10 cm, 6 cm 4. ₹ 2640
 5. 15 cm 6. 8 cm 7. 550 sq.cm 8. 2816 sq.cm, 9856 cubic cm
 9. 600 cubic metre 10. 28.51 cubic metre, 47.18 sq.m.

Practice Set 9.3

1. (i) 200.96 sq.cm, 267.95 cubic cm. (ii) 1017.36 sq.cm, 3052.08 cubic cm.
 (iii) 153.86 sq.m, 179.50 cubic cm.
 2. 157 sq.cm, 235.5 sq.cm. 3. 14130 cubic cm. 4. 5544 sq.cm. 5. 60 cm

Problem set 9

1. 1980 sq.m. 2. 96801.6 cubic cm. 3. 12 m, 13 m
 4. 6 cm 5. 1728 cubic cm. 6. 179.67 cubic cm.
 7. 21 cm 8. 132 sq.m., ₹ 6864 9. 4620 sq.m, ₹ 32340




Practical Notebook for Standard IX

Practical Notebook Cum Journal - Mathematics

**English
Medium**

**Price
₹ 55.00**



- Based on Government approved syllabus and textbook
- Inclusion of practicals based on all chapters as per Evaluation scheme.
- With full of various activities, pictures, figures/ diagrams, etc.
- Inclusion of objective/multiple choice questions
- Inclusion of useful questions for oral examination
- More questions for practice and separate space for writing answers

Practical notebooks are available for sale in the regional depots of the Textbook Bureau.

(1) Maharashtra State Textbook Stores and Distribution Centre, Senapati Bapat Marg, Pune 411004 ☎ 25659465
(2) Maharashtra State Textbook Stores and Distribution Centre, P-41, Industrial Estate, Mumbai - Bengaluru Highway, Opposite Sakal Office, Kolhapur 416122 ☎ 2468576 (3) Maharashtra State Textbook Stores and Distribution Centre, 10, Udyognagar, S. V. Road, Goregaon (West), Mumbai 400062 ☎ 28771842
(4) Maharashtra State Textbook Stores and Distribution Centre, CIDCO, Plot no. 14, W-Sector 12, Wavanja Road, New Panvel, Dist. Rajgad, Panvel 410206 ☎ 274626465 (5) Maharashtra State Textbook Stores and Distribution Centre, Near Lekhanagar, Plot no. 24, 'MAGH' Sector, CIDCO, New Mumbai-Agra Road, Nashik 422009 ☎ 2391511 (6) Maharashtra State Textbook Stores and Distribution Centre, M.I.D.C. Shed no. 2 and 3, Near Railway Station, Aurangabad 431001 ☎ 2332171 (7) Maharashtra State Textbook Stores and Distribution Centre, Opposite Rabindranath Tagore Science College, Maharaj Baug Road, Nagpur 440001 ☎ 2547716/2523078 (8) Maharashtra State Textbook Stores and Distribution Centre, Plot no. F-91, M.I.D.C., Latur 413531 ☎ 220930 (9) Maharashtra State Textbook Stores and Distribution Centre, Shakuntal Colony, Behind V.M.V. College, Amravati 444604 ☎ 2530965

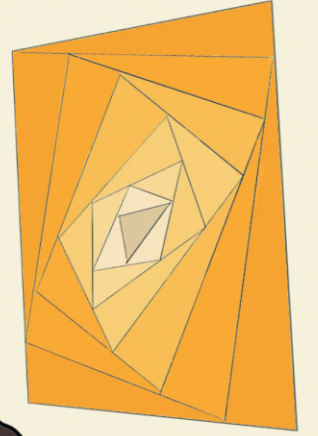



ebalbharati

E-learning material (Audio-Visual) for Standards One to Twelve is available through Textbook Bureau, Balbharati...

- Register your demand by scanning the Q.R. Code given alongside.
 - Register your demand for E-learning material by using Google play store and downloading ebalbharati app.
- www.ebalbharati.in, www.balbharati.in





Maharashtra State Bureau of Textbook Production and Curriculum Research, Pune.

इंग्रजी गणित इ.९ वी भाग-२

₹ 61.00